

PADMAJA H.S. SCHOOL / CLASS – 6TH / SUBJECT – ENGLISH / WORKSHEET – 01

1. Fill in the blanks :-

- a. One morning, Kassim and had to do.
- b. Kassim took a from him.
- c. What was common between an and a
- d. One day Ali showed Kassim a and
- e. Everyone laughed and Ali had to give Kassim

2. Rearrange the spellings :-

a. a e n t m e e r g
.....

b. l e t v i o
.....

c. e a t c h
.....

d. l e s d d r i
.....

e. b l e a r m
.....

f. g i c a m
.....

3. Give one word :-

a. It is a small glass ball of different colours.
.....

b. It is a colour.
.....

c. The day before .
.....

d. He showed Kassim a blue and red pencil.
.....

4. Write a paragraph on 'wise man/ woman'.

.....
.....
.....
.....
.....
.....
.....
.....
.....

PADMAJA H.S. SCHOOL / CLASS – 6TH / SUBJECT – ENGLISH / WORKSHEET –03

1. Fill in the blanks :-

- a. Three thieves passing through
- b. The three men cooked
- c. The chief waited for some
- d. Ramanna asked the king

2. Make adverb :-

- a. sure
- b. clever
- c. careful
- d. safe

3. Separate the words with their opposites:

Night, long, here, best, trust, busy, distrust, foolish, short, clever, careful, youngest, there, disagree, idle, day, agree, careless, worst, eldest.

4. Write hard words from lesson 2.

.....

.....

.....

.....

.....

5. Write hard words from lesson 3.

.....

.....

.....

.....

.....

PADMAJA H.S. SCHOOL / CLASS – 6TH / SUBJECT – ENGLISH / WORKSHEET –04

1. Fill articles:-

- a. eggs are sold by dozen.
- b. Sun rises in east and sets in west.
- c. fox is very clever animal.
- d. Please show me letter you have received.
- e. U.S.A. is industrialized country.
- f. The rich showed help poor.
- g. earth revolves round Sun.
- h. Ganga is holy river.

2. Write negative short form :-

- a. must not
- b. would not
- c. have not
- d. might not

3. Fill with exclamatory words :-

- a. grand idea you have!
- b. lovely eyes she has !
- c. horrible rain!
- d. tasty cheese this is !
- e. awful news !
- f. clever student you are !

PADMAJA H.S. SCHOOL / CLASS – 6TH / SUBJECT – ENGLISH / WORKSHEET –05

1. Who said to whom :-

a. "I am sorry, please forgive me. I am a poor woman. "

.....

b. "Yes, we will, but be sure to keep it in a very, very safe place."

.....

c." What is common between a dog and a tree?"

.....

d. "All right we will buy some. Go and get the pot from the old woman."

.....

2. Write 4 pairs of rhyming words of the poem "The country child"

.....

.....

.....

.....

3. Match the column :-

Bullock	House
Farm	Field
Paddy	cane
Sugar	Well
Tube	cart

PADMAJA H.S. SCHOOL / CLASS – 6TH / SUBJECT – ENGLISH / WORKSHEET –06

1. Complete the missing lines of the poem “The country child”

a. My home is a house.

.....

b. A twinkling street.

.....

c. And I should be lonely.

.....

d. The trees are so high.

.....

e. Were it not for the birds.

.....

2. Rearrange the spellings :-

a. b h t g r i

b. l l a t

c. e a r d

d. u a r s u

e. u s e h o

f. o c k l l u b

3. Who is the poet of the poem “The country child”.

.....

4. Correct the following words :-

a. thought

b. honor

c. nabal

d. ffour

e. knaw

5. Write the noun form of the following verbs :-

a. follow

b. grow

c. act

d. die

e. repay

f. settle

PADMAJA H.S. SCHOOL / CLASS – 6TH / SUBJECT – ENGLISH / WORKSHEET –07

1. Rewrite the following sentence in negative form :-

a. Manish has a new car.

.....

b. We have lunch at 1.

.....

c. You have a pet dog.

.....

d. He has enough to eat.

.....

e. She has a lovely voice.

.....

2. Fill in the blanks with simple present tense of word given in bracket.

a. These children us often. (disturb)

b. They to God in the morning. (pray)

c. Anu her work sincerely. (do)

d. I faster than my sister. (run)

3. Fill in the blanks using

very, much, too, enough, quite.

a. Aren't you fast.

b. Her result is better than expected.

c. It is hot today.

d. She is a intelligent girl.

e. I am tired walk further.

f. We have food for the week.

g. It is pretty dress.

h. He loves his parents

i. She is pure at heart.

j. Those boys are lazy.

PADMAJA H.S. SCHOOL / CLASS – 6TH / SUBJECT – ENGLISH / WORKSHEET –08

1. Write antonyms :-

- a. accept
- b. admit
- c. moral
- d. obey
- e. behave

2. Write synonyms :-

- a. ancient
- b. faithful
- c. help
- d. sorrow
- e. silent
- f. glow

3. Add suitable question tag to following ;-

- a. I am very stupid.?
- b. He came yesterday.?
- c. She lives with her mother.?
- d. You can swim well.?

4. Fill in the blanks with question words :-

- a. has taken my pen?
- b. is in your pocket?
- c. invited you?
- d. is there?

5. Fill collective nouns :-

- a. A of soldiers.
- b. A of cards.
- c. A of fish.

PADMAJA H.S. SCHOOL / CLASS – 6TH / SUBJECT – ENGLISH / WORKSHEET –09

1. Write the following sentence in negative form:-

a. I went to the market.

.....

b. We have this new book.

.....

c. He drank wine at the party.

.....

d. The boys will like to go for a picnic.

.....

2. Fill modals :-

a. Birds fly.

b. you lift this book.

c. I speak French.

d. I make tea for you.

3. Make adverb :-

a. rapid

b. brave

c. certain

d. slow

4. Choose the correct alternative:-

a. I play hockey last year.

(ought to/ used to/ need)

b. You to pay your debts.

(need/ dare/ ought)

c. How you open my letter.

(need/ dare/ used)

PADMAJA H.S. SCHOOL / CLASS – 6TH / SUBJECT – ENGLISH / WORKSHEET –11

1. Give answer in one word :-

a. One who drives a chariot :

.....

b. A person in attendance at the court of a king :

.....

c. Following the rules of the right conduct :

.....

d. A path made by carts :

.....

2. Match columns :

Sun	Blow
Wind	Twinkle
Stars	Fall
Water	Shine
Snow	flow

3. Who is the poet of the poem “The naughty boy”.

.....

4. Make new words by using prefixes :

Un, dis, mis, en.

.....

.....

.....

.....

.....

.....

.....

.....

.....

.....

.....

.....

PADMAJA H.S. SCHOOL / CLASS – 6TH / SUBJECT – ENGLISH / WORKSHEET –13

1. Write 4 pairs of rhyming words of the poem “The naughty boy “

.....
.....
.....
.....

2. Fill similies in the following :-

- a. As soft as
- b. As white as
- c. As cold as
- d. As hot as
- e. As black as

3. Fill in the blanks with correct words :-

- a. Birbal was greatly in the mind.
- b. was ready to send message to heaven.
- c. Birbal was minister at the court of

PADMAJA H.S. SCHOOL / CLASS – 6TH / SUBJECT – ENGLISH / WORKSHEET –14

1. Fill in the blanks :-

- a. We should share our neighbours and
- b. We should do work.
- c. We should welcome our with pleasure.
- d. We should not tell a
- e. We should not quarrel our
- f. We should sit silently and do

2. Write a or an before the following :-

- a. owl.
- b. cow.
- c.onion.
- d. old owl.
- e. white cow.
- f. big onion.

3. Change the following to singular :-

- a. Horses are animals.
.....
- b. Novels are books.
.....
- c. Balls are toys.
.....
- d. Roses are beautiful flowers.
.....

4. Write opposite gender of :-

- a. aunt
- b. bull
- c. lady
- d. hero
- e. master
- f. tiger

5. Underline noun in the following sentences :

- a. The crowd was very big.

- b. Always speak the truth.

- c. We all love honesty.

PADMAJA H.S. SCHOOL / CLASS – 6TH / SUBJECT – ENGLISH / WORKSHEET –16

1. Fill question tag :

- a. I am your friend.?
- b. He can't write properly.....?
- c. Anita is not very healthy?
- d. The dog is a faithful animal?
- e. They are your friends?
- f. She does not eat eggs?
- g. We shall meet again?

2. Underline the adjective:

- a. Sunil is a strong boy.
- b. The tiger is a fierce animal.
- c. Rakesh is wearing a red shirt.

3. Fill in the blanks with suitable verb :-

- a. He hindi fluently.
- b. She the room in a hurry.
- c. He very fast.

4. Fill interrogative adverb :

- a. are you crying ?
- b. have I kept my bag ?
- c. will you stay there ?

5. Write meaning and make your own sentence :

- a. innocent
.....
- b. bent down
.....
- c. mend
.....
- d. moving
.....
- e. spare his life
.....
- f. saddle
.....

PADMAJA H.S. SCHOOL / CLASS – 6TH / SUBJECT – ENGLISH / WORKSHEET –17

1. Form adverb from the following words :

- a. true
- b. due
- c. bright
- d. extreme
- e. careful

2. Fill preposition :-

- a. The book is lying the table.
- b. He rested a tree.
- c. The snake was killed a stick.
- d. He jumped the river.

3. Fill conjunctions :-

- a. He is tall he is very thin.
- b. Early to bed early to rise.
- c. I was very angry I kept quiet.
- d. Hope for the best prepare for the worst.

4. Fill in the blanks with is or are.

- a. There a pair of trousers in the wardrobe.
- b. Goods sometime brought in a truck.
- c. A herd of cattle grazing in the field.
- d. A pair of scissors used for cutting a piece of cloth.

5. Write plurals of :-

- a. child
- b. foot
- c. thief
- d. photo
- e. watchman
- f. hero
- g. shelf
- h. beach
- i. tooth
- j. history
- k. actress
- l. radish
- m. porch
- n. lottery

PADMAJA H.S. SCHOOL / CLASS – 6TH / SUBJECT – ENGLISH / WORKSHEET –19

1. Follow ei or ie to fill the blanks :

- a. pi ce.
- b. br f.
- c. y ld.
- d. cash r.
- e. rel f.
- f. gr f.
- g. rec pt.

2. Write comparative and superlative form of following words :

- a. later
- b. little
- c. long
- d. soon
- e. early
- f. loudly

3. Fill in the blanks with suitable interjections :

- a.! well done boys.
- b.! we are undone.
- c.! my brother is sleeping.
- d.! how are you.

4. Change the sentence into passive voice:

- a. He writes a letter.
.....
- b. I am eating my break fast.
.....
- c. They are playing hide and seek.
.....
- d. She is not doing her home work.
.....

5. Make noun form of :

- a. enter
- b. brave
- c. deep
- d. sit
- d. safe
- e. invite
- f. pure

PADMAJA H.S. SCHOOL / CLASS – 6TH / SUBJECT – ENGLISH / WORKSHEET –21

1.Fill in the blanks :-

- a. Saladin was in need of a large
- b. loved all three of his sons equally.
- c. Saladin saw that the was too clever for him.
- d. He asked the jew a tricky

2. Do as directed :-

a. Change into interrogative

He is ready.

.....

b. Write the type of sentence

Stop making noise.

.....

c. Write suitable subject

..... cooked the noodles.

d. Underline adjective

Romi is a honest merchant.

e. Write correct form of word

Alexander was a king.

(power, too)

f. Pick predicate

His rude behavior annoyed me.

3. Add suitable prefix :

- a. able
- b. lucky
- c. tidy
- d. safe
- e. pleasant
- f. married
- g. pure
- h. active
- i. direct

4. Fill in the blanks with

Who, whose, whom

- a. I met Mohan had just returned.
- b. This is the boy all praise.

PADMAJA H.S. SCHOOL / CLASS – 6TH / SUBJECT – ENGLISH / WORKSHEET –22

1. Fill in the blanks with appropriate preposition

- a. She goes school everyday.
- b. This a weight my shoulders.
- c. The tiger enters the jungle.
- d. He is the tallest his friend.
- e. My mother washes clothes detergent.
- f. He is loyal his friend.
- g. He returns back his house.
- h. Please listen me.
- i. I prefer coffee tea.
- j. Robin died cancer.
- k. This road leads calcutta.
- l. She is proud her beauty.
- m. She is well qualified the job.

2. Fill in the blanks with correct form of word :

- a. What a flower ! she exclaimed.
(beauty)
- b. I am cold and
(hunger)
- c. Kavita is a Girl.
(luck)
- d. His father was a very person.
(wisdom)
- e. Can you this problem.
(solution)
- f. Can you that it is your pen.
(proof)
- g. We should our children.
(education)

5. Write 5 sentences about a ship.

.....

.....

.....

.....

.....

.....

.....

PADMAJA H.S. SCHOOL / CLASS – 6TH / SUBJECT – ENGLISH / WORKSHEET –24

1. Rewrite the sentences in positive degree without changing the meaning :

a. John is taller than Tom.

.....

b. Delhi is bigger than Ludhiana.

.....

c. I am more busy than a bee.

.....

d. 2. Correct the following sentences :

a. He fall and hurt him.

.....

b. He went to Delhi with myself.

.....

c. Anna itself open the door.

.....

d. The prisoner hang itself.

.....

e. It is a secret between themselves.

.....

3. Fill articles :

a. I meet him year ago.

b. She is ugly girl.

c. He looks as stupid is owl.

d. I found egg in the nest.

e. Put some butter on potatoes.

f. child ran across street.

g. page of book is torn.

h. I want glass of water.

i. I have pen and pencil.

j. knife is made of metal.

k. apple has sweet taste.

4. Write plural of :-

a. photo

b. hero

c. beach

d. actress

e. foot

PADMAJA H.S. SCHOOL / CLASS – 6TH / SUBJECT – ENGLISH / WORKSHEET –25

1. Put the given adverb in correct place :

a. He went (by taxi/ to the station.)

.....

b. The girl reached (at 10'o clock / here.)

.....

c. He was born (on last Diwali / at 6 p.m.)

.....

d. He spoke (at the debate / this morning / well).

.....

2. Complete the sentence with the help of 'do' or 'make' :

a. I always my best.

b. They peace at last.

c. How do you?

d. A soldier must his duty.

e. Have you your home work.

3. True or false :

a. Akbar was minister at the court of birbal.

.....

b. Birbal was greatly disturbed in mind.

.....

c. The barber bribed the courtiers to co operate with him.

.....

d. One day the barber was not cutting the emperor's hair.

.....

e. After a few days the barber came to the emperor again.

.....

4. Make a list of kitchen items. You can take help of your mother.

.....

.....

.....

.....

.....

.....

.....

.....

.....

.....

Padmaja H.S School, Dewas Class- 6th Subject-Hindi Worksheet no. 01

1. रिक्त स्थानों की पूर्ति कीजिये-

- मैं स्वर्ग देखता था कहाँ चरन में
- भर रहा था तब तू किसी पतन में
- बनकर किसी के मेरे लिए बहा तू
- "मैं ढूँढता तुझे था " कविता के कवि है

2. सही जोड़ी मिलाइए-

- | | | |
|--------------|---|-----------------|
| १) पतितों के | - | १) कहाँ चरन में |
| २) झुकता | - | २) गगन में |
| ३) प्रतिभा | - | ३) संगठन में |
| ४) विस्तार | - | ४) प्रदान कर |

3. वर्तनी शुद्ध कीजिए-

अनितयता

आँसु

निरमल

परतीक्षा

आननद

4. निम्नलिखित पंक्तियों का भावार्थ लिखिए-

हे दीनबंधु ! ऐसी प्रतिभा प्रदान कर तू

देखूँ तुझे हगो में, मन में तथा वचन में

.....

.....

.....

.....

.....

.....

5. रामनरेश त्रिपाठी की किन्ही दो रचनाओं के नाम लिखिए ।

Padmaja H.S School, Dewas Class- 6th Subject-Hindi Worksheet no. 02

1. सही विकल्प चुनिए-

कविता "मैं ढूँढता तुझे था" में 'तू' शब्द का प्रयोग किसके लिए किया गया है?

अ) कवि के लिए ब) ईश्वर के लिए

"हार" शब्द का विलोम है -

अ) पराजय ब) जीत

अधीर का अर्थ है-

अ) व्याकुल ब) खुश

2. रिक्त स्थानों की पूर्ति कीजिये-

मैं था तुझे बुलाता के भजन में।

ब) तब तू लगा था के संगठन में।

स) भर रहा तब तू किसी पतन में।

3. निम्नलिखित शब्दों का वाक्यों में प्रयोग कीजिए-

अ) सौंदर्य

.....

ब) इतिहास

.....

4. इस कविता की जो पंक्तियाँ आपको अच्छी लगी उनमें से कोई दो पंक्तियाँ लिखिए।

.....

.....

.....

5. इस कविता में कवि ईश्वर को कहाँ कहाँ ढूँढ रहा है ?

.....

.....

.....

1. रिक्त स्थानों की पूर्ति लिखिए-

- क) जल के बिना संभव नहीं है ।
ख) का पानी बहकर व्यर्थ न जाए ।
ग) सूखी धरती लोग ।

2. जोड़ी मिलाइए -

- | | |
|------------------|------------|
| १. जल | १. तकनीक |
| २. अंधाधुंध | २. संरक्षण |
| ३. रिमोट सेंसिंग | ३. दोहन |

3. निम्नलिखित शब्दों के तदभव शब्द लिखिए-

- | | |
|------------|---------|
| क) प्राचीन | ग) पितृ |
| ख) अग्नि | घ) मातृ |

4. निम्नलिखित प्रश्नों के उत्तर लिखिए-

1. जल संरक्षण के कार्य के लिए किन्हे सम्मान दिया गया है?

.....

2 जल को संरक्षित करने के कोई पाँच उपाय लिखिए ।

.....

.....

.....

.....

3 रिमोट सेंसिंग तकनीक को संक्षिप्त में लिखिए ।

.....

.....

.....

1. निम्नलिखित के पर्यायवाची लिखिए-

क) धरती -

ख) उपकार -

ग) जल -

2. वाक्यों में प्रयोग कीजिये-

क) जल संकट-

ख) अनमोल-

ग) विश्वविद्यालय-

3. एक वाक्य में उत्तर दो-

क) वह कौनसी तकनीक है जिसके माध्यम से आंतरिक चित्र खींचे जाते हैं?

.....

ख) वह कौनसा क्षेत्र है जहाँ पर पारम्परिक विधियों से जल-संरक्षण किया गया है?

.....

4 जल संरक्षण से सम्बंधित एक चित्र बनाइए ।

5 यदि जल संरक्षण नहीं किया गया तो आने वाले समय में क्या क्या समस्याएँ उत्पन्न होगी ।
पाँच बिन्दु लिखिए ।

.....

.....

.....

.....

.....

.....

Padmaja H.S School, Dewas Class- 6th Subject-Hindi Worksheet no. 05

1. एक शब्द में उत्तर दो-

- क) भाई-बहन कहानी के लेखक का नाम क्या है? _____
- ख) सावित्री के भाई का नाम लिखिए । _____
- ग) कमल कहाँ खो गया था? _____
- घ) पांच बजे कौनसा जुलूस निकलने वाला था _____

2. खाली स्थान भरो-

- क) सावित्री का हृदय आया ।
- ख) उसकीके आगे अँधेरा छा गया ।
- ग) रानीजी बड़े होने पर पता चलेगा जब इन्हीसूरतों को देखने के लिए तरसोगी ।
- ड) माँ की झिड़कियों ने बालिका के मस्तिष्क कोमें डाल दिया ।

3. संज्ञा किसे कहते हैं? इसके भेदों के नाम लिखिए ।

.....

.....

.....

.....

4. मेले वाले स्थानों पर बच्चों को कौनसी सावधानियाँ रखनी चाहिए?

.....

.....

.....

.....

5. निर्मला के चरित्र के बारे में पाँच वाक्य लिखिए ।

.....

.....

.....

.....

Padmaja H.S School, Dewas Class- 6th Subject-Hindi Worksheet no. 06

1. जोड़ी मिलाइए-

- | | |
|-----------|--------------|
| १. मीठी | १. लड़की |
| २. उदुदंड | २. स्थल |
| ३. भाई | ३. स्मृतियों |
| ४. अन्तः | ४. बहन |

2. शब्द पूर्ण करो-

चि क क मै न
क नी वा व ण
वि य वि लि

भाई-बहन पाठ में आए तत्सम, तद्भव और अंग्रेजी शब्द ढूँढकर लिखिए ।

तत्सम	तद्भव	अंग्रेजी

3. निम्नलिखित शब्दों के लिंग बदलिए-

पुत्र	कवि
पिताजी	विद्वान
शिक्षिका	नौकर
भाई	छात्र
लेखक	नाना

4. भाई-बहन कहानी से हमें क्या सीख मिलती है? पाँच वाक्यों में लिखिए

.....

.....

.....

.....

.....

Padmaja H.S School, Dewas Class- 6th Subject-Hindi Worksheet no.07

1. खाली स्थान भरिए-

- क) तेरीभर हम वंदना करेंगे
ख) महिमा मँ तू है, निधान तू है
ग) जिसका मुकुटजग जगमगा रहा है
घ)स्वतंत्रता का जो दीप जल रहा है

2. जोड़ी मिलाइए-

- | | |
|-------------|----------|
| १. जन्मभूमि | १. पथिक |
| २. विजय | २. भारत |
| ३. आलोक | ३. जननी |
| ४. प्राण | ४. ध्वजा |

3. निम्नलिखित प्रश्नों के उत्तर दीजिए-

- क) "अभिनंदनीय भारत" कविता में किसके महत्व को बताया गया है?

.....
.....

- ख) इस कविता में कौन कौन से गुण हैं ?

.....
.....
.....

- ग) इस कविता में आए पाँच संज्ञा शब्द छांटकर लिखिए

.....
.....

4. उपसर्ग किसे कहते हैं ? उदहारण सहित लिखिए

.....
.....
.....
.....
.....

Padmaja H.S School, Dewas Class- 6th Subject-Hindi Worksheet no.08

1. वाक्य पूरे कीजिए-

१. विश्वास है की
२. जीवन सुमन
३. जिसका विशाल
४. तेरे लिए जनमभर

2. देशप्रेम से सम्बंधित किसी कविता की चार पंक्तियाँ लिखिए-

.....

.....

.....

.....

3. हमारे देश के पाँच शहीदों के नाम लिखिए

.....

.....

4. वाक्यों में प्रयोग कीजिए-

हिमालय-

.....

जन्मभूमि

.....

संस्कृति

.....

स्वतंत्रता

.....

5. किन कवियों ने भारत की वंदना में अनेक अमर गीत लिखे हैं?

.....

.....

Padmaja H.S School, Dewas Class- 6th Subject-Hindi Worksheet no.09

1. रिक्त स्थानों की पूर्ति कीजिए-

क) मालवीयजी से बड़ाकिसी को नहीं मानता था ।

ख) वे 1909 में लाहौर कांग्रेस केचुने गए ।

ग) मदनमोहन मालवीय समाज सेवा का कार्य करते हुएकी ओर
खींचने लगे ।

घ)राधाकृष्ण के परम भक्त थे ।

2. सही जोड़ी बनाइए-

- | | |
|---------------|------------------|
| १. दैनिक पत्र | १. विश्वविद्यालय |
| २. काशी | २.सम्मान |
| ३. आत्म | ३. लीडर |
| ४. मंत्र | ४. मुग्ध |

3. वर्तनी शुद्ध कीजिए-

- | | |
|------------------|------------|
| १. सामज | ६. महातमा |
| २. विश्वविद्यालय | ७. तयोहार |
| ३. परीक्षा | ८. शत्रिय |
| ४. शीक्षा | ९. जगल |
| ५. परिवरतन | १०. सेवीका |

4. निम्नलिखित प्रश्नों के उत्तर दीजिए-

क) मालवीयजी के चरित्र की कोई चार विशेषताएँ लिखिए ।

.....

.....

.....

.....

.....

.....

ख)मध्य प्रदेश के कोई पाँच विश्वविद्यालयों के नाम लिखिए ।

.....

.....

.....

Padmaja H.S School, Dewas Class- 6th Subject-Hindi Worksheet no.10

1. निम्नलिखित प्रश्नों के उत्तर दीजिए-

क) मदनमोहन मालवीयजी का जन्म कब और कहाँ हुआ था?

.....

ख) मालवीयजी के माता-पिता का क्या नाम था?

.....

ग) मालवीयजी के द्वारा सम्पादित किये गए दो समाचार पत्रों के नाम लिखिए

.....

घ) वह कौनसा कांड है जिसमे मालवीयजी ने 151 अभियुक्तों को फाँसी से बचाया था?

.....

ड) मालवीयजी ने इंटर परीक्षा कब पास की ?

.....

2. सही अथवा गलत लिखो । गलत होने पर सही उत्तर भी लिखिए-

क) मालवीयजी को महामना कहा जाता है

.....

ख) मूना देवी कठोर स्वभाव की थी

.....

ग) मदनमोहन मालवीय ने हिन्दू विश्वविद्यालय की स्थापना की थी

.....

घ) विश्वविद्यालय की सभा में वे अंग्रेजी में बोलते थे

.....

3. मदनमोहन मालवीय पाठ के लेखक कौन हैं?

.....

4. मालवीयजी के निस्वार्थ जीवन की कहानी से हमें क्या शिक्षा मिलती है ?

.....

.....

.....

Padmaja H.S School, Dewas Class- 6th Subject-Hindi Worksheet no.11

प्र.१ रिक्त स्थानों कि पूर्ति कीजिये ।

१. बुआजी दो दिन से है ।
२. आज मेले में नाटक का कार्यक्रम है ।
३. बिरजू यह तो है ।
४. पर दुकान जाता ।

प्र.२ वर्तनी शुद्ध करो ।

१. कर्तव्य -
२. परीश्रम -
३. प्रवन्ध -
४. बेक -

प्र.३ इस पाठ में से तत्सम शब्द छाँटिए ।

.....
.....

प्र.४ प्रश्नों के उत्तर लिखों ।

१. चंदू के चरित्र कि विशेषताओं को लिखिए ।

.....

२. पांच विराम चिन्हों के नाम लिखिए ।

.....

.....

३. ' रामलाल का परिवार ' पाठ से आपको क्या शिक्षा मिलती है ?

.....

.....

.....

Padmaja H.S School, Dewas Class- 6th Subject-Hindi Worksheet no.12

प्र.१ जोड़ी बनाइये ।

दादा	सत्कार
आदर	दादी
बीरम	नाटक
शिक्षा	काका

प्र.२ वाक्यों में प्रयोग कीजिये ।

१. खेत -
२. मेला -
३. परिश्रम -
४. आदर -

प्र.३ आदर्श परिवार पर पांच वाक्य लिखिए ।

.....
.....
.....
.....
.....

प्र.४ अर्थ लिखिए ।

१. विश्राम -
२. साँझ -

प्र.५ रामलाल के परिवार के सभी सदस्यों के नाम लिखिए ।

.....
.....
.....

प्र.१ रिक्त स्थान भरिये ।

१. वृक्ष निभाता आज भी रिश्ता नाता ।

२. आम वृक्ष नाना सा मीठे फल बरसाता ।

३. खिरनी है मीठी निर्मल सीधी सादी ।

४. मधुमेह का है जामुन ज्यों जामाता ।

प्र.२ जोड़ी बनाइये ।

बरगद वैश्य

जीवनदायी औषधि

रोपें परदादा

कुशल सींचे

प्र.३ आपके घर के आस पास के पेड़ों के नाम लिखिए ।

.....

प्र.४ औषधि वाले पांच वृक्षों के नाम लिखिए ।

.....

प्र.५ पांच वृक्षों के चित्र बनाइये ।

Padmaja H.S School, Dewas Class- 6th Subject-Hindi Worksheet no.14

प्र.१ वर्तनी शुद्ध कीजिये ।

१. त्रीफला - २. पारिवारीक -
३. जीवनदाई -

प्र.२ तत्भव रूप लिखिए ।

- पितृ - , मातृ -
- भ्राता - , आम्न -

प्र.३ वाक्य पूर्ण करो ।

१. आम वृक्ष
२. मीठे
३. पीपल
४. तुलसी

प्र.४ उक्त पंक्ति का भावार्थ लिखिए ।

देवदार दादाजी जैसा , इमली जैसे दादी
खिरनी नानी सी है मीठी , निर्मल सीधी सादी

.....

.....

.....

.....

प्र.५ आपके विद्यालय में उपलब्ध पेड़ पौधों के नाम लिखिए ।

.....

.....

.....

Padmaja H.S School, Dewas Class- 6th Subject-Hindi Worksheet no.15

प्र.१ रिक्त स्थान भरो |

१. यह भुक्तभोगी का है |
२. टूटी टाँग को साहित्य में करूँगा |
३. मेरा व्यवसाय है |
४. अक्सर एवं बाथरूम में फिसलते हैं |

प्र.२ वर्तनी शुद्ध करो |

- बाथरूम - , हडी -
- प्रशंशा - , केश -

प्र.३ ' बाथरूम की फिसलन ' पाठ में आए तत्सम एवं तत्भव शब्दों को छाँट कर लिखिए पांच पांच |

.....

.....

.....

प्र.४ निम्न लिखित प्रश्नों के उत्तर लिखिए |

१. ' बाथरूम की फिसलन ' पाठ एक क्या है ?

.....

२. ' बाथरूम की फिसलन ' पाठ के लेखक का नाम क्या है ?

.....

३. इस पाठ से आपको क्या शिक्षा मिलती है ?

.....

४. प्रत्यय के दो उदाहरण लिखिए |

.....

Padmaja H.S School, Dewas Class- 6th Subject-Hindi Worksheet no.16

प्र.१ रिक्त स्थान भरिये |

१. हड्डी टूटने से में इजाफा हुआ |
२. मेरा साहित्यिक वातावरण में हुआ |
३. कुछ क्षणों के लिए मन ही मन अपने को समझा |
४. का नाम लेना शुरू करो , सारे पाप धुल जाएँगे |

प्र.२ ' बाथरूम की फिसलन ' पाठ में आए अंग्रेजी शब्दों को छाँट कर लिखिए |

.....

.....

प्र.३ किसने कहा -

१. गनीमत है फिलहाल तो एक में ही लगा है |
२. अगर एनस्थीसियो की जरूरत हो तो यहाँ कई कवि मौजूद हैं |
३. अपराधी कोई हो और सजा किसी और को मिले |

प्र.४ लेखक व उनके छात्रों के बीच हुए संवाद को लिखिए |

.....

.....

प्र.५ लेखक की पत्नी क्यों झल्ला गई थी ?

.....

.....

प्र.१ सही जोड़ी मिलाइये ।

स्लिम	वादी
ईश्वर	भूमि
आदमी के भीतर	फ़ास्ट
भाव	मनोबल

प्र.२ वाक्य पूर्ण करो ।

१. इक्कीसवीं सदी

२. दर्द

३. मेरे मरीज

४. मैं जानने की कोशिश

प्र.३ 'आवट' एवं 'ई' प्रत्यय लगा कर दो - दो शब्द बनाइये ।

.....
.....

प्र.४ शब्द पूर्ण करो ।

१. पो ब , २. कनि.....रण

३. चता , ४. सफा

प्र.५ ' बाथरूम की फिसलन ' पाठ से आपको क्या पता चलता है ?

.....
.....

प्र.१ रिक्त स्थान की पूर्ति करो ।

१. के लिए केवल साहस प्रकट करना ही अभीष्ट नहीं ।
२. मध्यम श्रेणी का साहस प्रायः में पाया जाता है ।
३. ने उसके पिता की जागीर ज़ब्त कर ली थी ।
४. बादशाह के पास दो राजपूत नौकरी के लिए आए ।

प्र.२ एक शब्द में उत्तर दो ।

१. कौन कौन से काम बड़े अथवा छोटे साहस के बिना नहीं होते ?

.....

२. कौन कौन से वीरवरो ने आल्पस पर्वत पे विशाल शिखरो को पार किया ?

.....

३. अपने साहस के कारण कौन कौन आज भी हमारे हृदयो में जीवित है ?

.....

प्र.३ एक वचन में बदलिए ।

१. कपडे - २. मालाएं - ३. रोटियां -

प्र.४ संधि कीजिये ।

१. सहायता + अर्थ - , २. धर्म + आत्मा -

३. निः + पक्ष -

प्र.१ सही जोड़ी मिलाइये ।

मौरुदा	भक्ति
स्वदेश	जमींदार
कर्तव्य	गांव
बुद्धनसिंह	परायणता

प्र.२ वर्तनी शुद्ध करो ।

अतुलनिय - , सरवोच -
रनक्षेत्र - , अभीसट -

प्र.३ संधि कीजिये ।

विद्या + अर्थी - , नदी + ईश -
महा + उत्सव -

प्र.४ निम्न लिखित प्रश्नों के उत्तर लिखिए ।

१.साहसी व्यक्तियों के चित्र चिपकाइये । (कोई दो)

२.गणतंत्र दिवस के अवसर पर साहसपूर्ण कार्य करने वाले बालकों को सरकार की ओर से क्या दिया जाता है ?

.....

३. मौरुदा गांव को बचाने के लिए बुद्धनसिंह ने क्या किया ?

प्र.१ बहुवचन में बदलिए ।

१. किरण - २. आँख -

३. झरना -

प्र.२ रिक्त स्थान भरिये ।

१. साहसी व्यक्ति में एक होती है ।

२. का विचार प्रत्येक साहसी मनुष्य में होना चाहिए ।

३. कर्तव्यपरायण वीर की वीरता को लोग सम्मान पूर्वक याद करते हैं ।

४. अपने प्राणों की वह भी परवाह नहीं करता ।

प्र.३ शब्द पूर्ण करो ।

१. शि र २. स ३. विशा.....

प्र.४ वाक्यों में प्रयोग करो ।

१. प्राण -

२. कर्तव्यपरायण -

३. आक्रमण -

प्र.४ साहस पाठ में कितने प्रकार के साहस की बात कही गई है ? प्रत्येक के लिए एक एक वाक्य लिखें ।

प्र.१ वाक्य पुरे करो ।

१. मैं न बंधा हूँ

२. कोई नहीं पराया

३. अरे नहीं देवत्व

४. मेरी धरती

प्र.२ वर्तनी शुद्ध करो ।

अराध्य - , देवलाय - , अभीमान -

प्र.३ जोड़ी मिलाइये ।

आराध्य पाँति

जाति अभीमान

जग जंजीर

मानवता आदमी

प्र.४ निम्न लिखित पंक्तियों का भावार्थ लिखिए एवं कवि का नाम लिखिए ।

१. मैं बस कहता हूँ कि प्यार है तो घट - घट में राम बसे है ।

२. मुझसे तुम न कहो , मंदिर मस्जिद पर मैं सर टेक दूँ ।

प्र.१ रिक्त स्थान भरों ।

१. सुख न केवल तुम्हारा , सुख केवल का भी उसमे भाग है ।

२. मैं सिखलाता हूँ कि संसार को ।

३. मुझे सुनाओ तुम न स्वर्ग कहानियां ।

४. मैं न बंधा हूँ देश काल की जंजीर में ।

प्र.२ सही गलत का निशान लगाओ ।

१. कवि ने घर सारे संसार को कहा है । ()

२. कवि ने अपना आराध्य ईश्वर को माना है । ()

३. कवि को मानवता पर अभिमान है । ()

४. पराया का विलोम अपना होता है । ()

प्र.३ गोपालदास ' नीरज ' की दो रचनाओं के नाम लिखो ।

.....

प्र.४ ' कोई नहीं पराया ' कविता से आपको क्या सन्देश मिलता है ?

.....

.....

.....

.....

प्र.५ विलोम शब्द ।

ऊँची , अपना , शुभ , न्याय

प्र.१ सही जोड़ी बनाइये ।

- | | |
|-----------------|--------|
| १. शहनाई | गीत |
| २. मंगल | रामनाथ |
| ३. दहेज़ | बजना |
| ४. गीता के पिता | प्रथा |

प्र.२ रिक्त स्थान भरिये ।

१. देवकी की इकलौती लड़की थी ।
२. जो कुछ है , हमारा तो गीता ही है ।
३. हमे में कुछ नहीं चाहिए ।
४. पढ़ी लिखी है हमारी गीता ।

प्र.३ विलोम शब्द लिखिए ।

प्रसन्नता - , सच - , अपमान -

प्र.४ वर्तनी शुद्ध करों ।

अनमनि - , छलवा -

मानवतावदि - , रिस्ता -

प्र.५ क्रिया किसे कहते हैं ? उदाहरण सहित लिखिए ।

प्र.१ रिक्त स्थान भरों ।

१. वस्तु या सेवा का उपयोग करने वाला कहलाता है ।
२. सेवाओं के बदले बिल की राशि जमा कर प्राप्त करते हैं ।
३. रेलवे से का टिकट लेते हैं ।

प्र.२ जोड़ी मिलाइये ।

गारण्टी	फोरम
उपभोक्ता	वारण्टी
राशि	प्रशासन
जिला	मय ब्याज

प्र.३ वर्तनी शुद्ध करों ।

१. प्रकरण -
२. प्रमाणीत -
३. क्षतिपूर्ति -

प्र.४ उपसर्ग लगा कर तीन तीन शब्द बनाइये ।

१. परा -
२. अभि -

प्र.५ ' जागो उपभोक्ता जागो ' से हमें क्या सन्देश मिलता है ?

.....

.....

.....

.....

Padmaja H.S School, Dewas Class- 6th Subject-Hindi Worksheet no. 01

1. रिक्त स्थानों की पूर्ति कीजिये-

- मैं स्वर्ग देखता था कहाँ चरन में
- भर रहा था तब तू किसी पतन में
- बनकर किसी के मेरे लिए बहा तू
- "मैं ढूँढता तुझे था " कविता के कवि है

2. सही जोड़ी मिलाइए-

- | | | |
|--------------|---|-----------------|
| १) पतितों के | - | १) कहाँ चरन में |
| २) झुकता | - | २) गगन में |
| ३) प्रतिभा | - | ३) संगठन में |
| ४) विस्तार | - | ४) प्रदान कर |

3. वर्तनी शुद्ध कीजिए-

अनितयता

आँसु

निरमल

परतीक्षा

आननद

4. निम्नलिखित पंक्तियों का भावार्थ लिखिए-

हे दीनबंधु ! ऐसी प्रतिभा प्रदान कर तू

देखूँ तुझे हगो में, मन में तथा वचन में

.....

.....

.....

.....

.....

.....

5. रामनरेश त्रिपाठी की किन्ही दो रचनाओं के नाम लिखिए ।

Padmaja H.S School, Dewas Class- 6th Subject-Hindi Worksheet no. 02

1. सही विकल्प चुनिए-

कविता "मैं ढूँढता तुझे था" में 'तू' शब्द का प्रयोग किसके लिए किया गया है?

अ) कवि के लिए ब) ईश्वर के लिए

"हार" शब्द का विलोम है -

अ) पराजय ब) जीत

अधीर का अर्थ है-

अ) व्याकुल ब) खुश

2. रिक्त स्थानों की पूर्ति कीजिये-

मैं था तुझे बुलाता के भजन में।

ब) तब तू लगा था के संगठन में।

स) भर रहा तब तू किसी पतन में।

3. निम्नलिखित शब्दों का वाक्यों में प्रयोग कीजिए-

अ) सौंदर्य

.....

ब) इतिहास

.....

4. इस कविता की जो पंक्तियाँ आपको अच्छी लगी उनमें से कोई दो पंक्तियाँ लिखिए।

.....

.....

.....

5. इस कविता में कवि ईश्वर को कहाँ कहाँ ढूँढ रहा है ?

.....

.....

.....

1. निम्नलिखित के पर्यायवाची लिखिए-

क) धरती -

ख) उपकार -

ग) जल -

2. वाक्यों में प्रयोग कीजिये-

क) जल संकट-

ख) अनमोल-

ग) विश्वविद्यालय-

3. एक वाक्य में उत्तर दो-

क) वह कौनसी तकनीक है जिसके माध्यम से आंतरिक चित्र खींचे जाते हैं?

.....

ख) वह कौनसा क्षेत्र है जहाँ पर पारम्परिक विधियों से जल-संरक्षण किया गया है?

.....

4 जल संरक्षण से सम्बंधित एक चित्र बनाइए ।

5 यदि जल संरक्षण नहीं किया गया तो आने वाले समय में क्या क्या समस्याएँ उत्पन्न होगी ।
पाँच बिन्दु लिखिए ।

.....

.....

.....

.....

.....

.....

Padmaja H.S School, Dewas Class- 6th Subject-Hindi Worksheet no. 05

1. एक शब्द में उत्तर दो-

- क) भाई-बहन कहानी के लेखक का नाम क्या है? _____
- ख) सावित्री के भाई का नाम लिखिए । _____
- ग) कमल कहाँ खो गया था? _____
- घ) पांच बजे कौनसा जुलूस निकलने वाला था _____

2. खाली स्थान भरो-

- क) सावित्री का हृदय आया ।
- ख) उसकीके आगे अँधेरा छा गया ।
- ग) रानीजी बड़े होने पर पता चलेगा जब इन्हीसूरतों को देखने के लिए तरसोगी ।
- ड) माँ की झिड़कियों ने बालिका के मस्तिष्क कोमें डाल दिया ।

3. संज्ञा किसे कहते हैं? इसके भेदों के नाम लिखिए ।

.....

.....

.....

.....

4. मेले वाले स्थानों पर बच्चों को कौनसी सावधानियाँ रखनी चाहिए?

.....

.....

.....

.....

5. निर्मला के चरित्र के बारे में पाँच वाक्य लिखिए ।

.....

.....

.....

.....

Padmaja H.S School, Dewas Class- 6th Subject-Hindi Worksheet no. 06

1. जोड़ी मिलाइए-

- | | |
|-----------|--------------|
| १. मीठी | १. लड़की |
| २. उदुदंड | २. स्थल |
| ३. भाई | ३. स्मृतियों |
| ४. अन्तः | ४. बहन |

2. शब्द पूर्ण करो-

चि क क मै न
क नी वा व ण
वि य वि लि

भाई-बहन पाठ में आए तत्सम, तद्भव और अंग्रेजी शब्द ढूँढकर लिखिए ।

तत्सम	तद्भव	अंग्रेजी

3. निम्नलिखित शब्दों के लिंग बदलिए-

पुत्र	कवि
पिताजी	विद्वान
शिक्षिका	नौकर
भाई	छात्र
लेखक	नाना

4. भाई-बहन कहानी से हमें क्या सीख मिलती है? पाँच वाक्यों में लिखिए

.....

.....

.....

.....

.....

Padmaja H.S School, Dewas Class- 6th Subject-Hindi Worksheet no.07

1. खाली स्थान भरिए-

- क) तेरीभर हम वंदना करेंगे
ख) महिमा मँ तू है, निधान तू है
ग) जिसका मुकुटजग जगमगा रहा है
घ)स्वतंत्रता का जो दीप जल रहा है

2. जोड़ी मिलाइए-

- | | |
|-------------|----------|
| १. जन्मभूमि | १. पथिक |
| २. विजय | २. भारत |
| ३. आलोक | ३. जननी |
| ४. प्राण | ४. ध्वजा |

3. निम्नलिखित प्रश्नों के उत्तर दीजिए-

- क) "अभिनंदनीय भारत" कविता में किसके महत्व को बताया गया है?

.....
.....

- ख) इस कविता में कौन कौन से गुण हैं ?

.....
.....
.....

- ग) इस कविता में आए पाँच संज्ञा शब्द छांटकर लिखिए

.....
.....

4. उपसर्ग किसे कहते हैं ? उदहारण सहित लिखिए

.....
.....
.....
.....
.....

Padmaja H.S School, Dewas Class- 6th Subject-Hindi Worksheet no.08

1. वाक्य पूरे कीजिए-

१. विश्वास है की
२. जीवन सुमन
३. जिसका विशाल
४. तेरे लिए जनमभर

2. देशप्रेम से सम्बंधित किसी कविता की चार पंक्तियाँ लिखिए-

.....

.....

.....

.....

3. हमारे देश के पाँच शहीदों के नाम लिखिए

.....

.....

4. वाक्यों में प्रयोग कीजिए-

हिमालय-

.....

जन्मभूमि

.....

संस्कृति

.....

स्वतंत्रता

.....

5. किन कवियों ने भारत की वंदना में अनेक अमर गीत लिखे हैं?

.....

.....

Padmaja H.S School, Dewas Class- 6th Subject-Hindi Worksheet no.09

1. रिक्त स्थानों की पूर्ति कीजिए-

क) मालवीयजी से बड़ाकिसी को नहीं मानता था ।

ख) वे 1909 में लाहौर कांग्रेस केचुने गए ।

ग) मदनमोहन मालवीय समाज सेवा का कार्य करते हुएकी ओर
खींचने लगे ।

घ)राधाकृष्ण के परम भक्त थे ।

2. सही जोड़ी बनाइए-

- | | |
|---------------|------------------|
| १. दैनिक पत्र | १. विश्वविद्यालय |
| २. काशी | २.सम्मान |
| ३. आत्म | ३. लीडर |
| ४. मंत्र | ४. मुग्ध |

3. वर्तनी शुद्ध कीजिए-

- | | |
|------------------|------------|
| १. सामज | ६. महातमा |
| २. विश्वविद्यालय | ७. तयोहार |
| ३. परीक्षा | ८. शत्रिय |
| ४. शीक्षा | ९. जगल |
| ५. परिवरतन | १०. सेवीका |

4. निम्नलिखित प्रश्नों के उत्तर दीजिए-

क) मालवीयजी के चरित्र की कोई चार विशेषताएँ लिखिए ।

.....

.....

.....

.....

.....

.....

ख)मध्य प्रदेश के कोई पाँच विश्वविद्यालयों के नाम लिखिए ।

.....

.....

.....

Padmaja H.S School, Dewas Class- 6th Subject-Hindi Worksheet no.10

1. निम्नलिखित प्रश्नों के उत्तर दीजिए-

क) मदनमोहन मालवीयजी का जन्म कब और कहाँ हुआ था?

.....

ख) मालवीयजी के माता-पिता का क्या नाम था?

.....

ग) मालवीयजी के द्वारा सम्पादित किये गए दो समाचार पत्रों के नाम लिखिए

.....

घ) वह कौनसा कांड है जिसमे मालवीयजी ने 151 अभियुक्तों को फाँसी से बचाया था?

.....

ड) मालवीयजी ने इंटर परीक्षा कब पास की ?

.....

2. सही अथवा गलत लिखो । गलत होने पर सही उत्तर भी लिखिए-

क) मालवीयजी को महामना कहा जाता है

.....

ख) मूना देवी कठोर स्वभाव की थी

.....

ग) मदनमोहन मालवीय ने हिन्दू विश्वविद्यालय की स्थापना की थी

.....

घ) विश्वविद्यालय की सभा में वे अंग्रेजी में बोलते थे

.....

3. मदनमोहन मालवीय पाठ के लेखक कौन हैं?

.....

4. मालवीयजी के निस्वार्थ जीवन की कहानी से हमें क्या शिक्षा मिलती है ?

.....

.....

.....

Padmaja H.S School, Dewas Class- 6th Subject-Hindi Worksheet no.11

प्र.१ रिक्त स्थानों कि पूर्ति कीजिये ।

१. बुआजी दो दिन से है ।
२. आज मेले में नाटक का कार्यक्रम है ।
३. बिरजू यह तो है ।
४. पर दुकान जाता ।

प्र.२ वर्तनी शुद्ध करो ।

१. कर्तव्य -
२. परीश्रम -
३. प्रवन्ध -
४. बेक -

प्र.३ इस पाठ में से तत्सम शब्द छाँटिए ।

.....
.....

प्र.४ प्रश्नों के उत्तर लिखों ।

१. चंदू के चरित्र कि विशेषताओं को लिखिए ।

.....

२. पांच विराम चिन्हों के नाम लिखिए ।

.....

.....

३. ' रामलाल का परिवार ' पाठ से आपको क्या शिक्षा मिलती है ?

.....

.....

.....

Padmaja H.S School, Dewas Class- 6th Subject-Hindi Worksheet no.12

प्र.१ जोड़ी बनाइये ।

दादा	सत्कार
आदर	दादी
बीरम	नाटक
शिक्षा	काका

प्र.२ वाक्यों में प्रयोग कीजिये ।

१. खेत -
२. मेला -
३. परिश्रम -
४. आदर -

प्र.३ आदर्श परिवार पर पांच वाक्य लिखिए ।

.....
.....
.....
.....
.....

प्र.४ अर्थ लिखिए ।

१. विश्राम -
२. साँझ -

प्र.५ रामलाल के परिवार के सभी सदस्यों के नाम लिखिए ।

.....
.....
.....

प्र.१ रिक्त स्थान भरिये ।

१. वृक्ष निभाता आज भी रिश्ता नाता ।

२. आम वृक्ष नाना सा मीठे फल बरसाता ।

३. खिरनी है मीठी निर्मल सीधी सादी ।

४. मधुमेह का है जामुन ज्यों जामाता ।

प्र.२ जोड़ी बनाइये ।

बरगद वैश्य

जीवनदायी औषधि

रोपें परदादा

कुशल सींचे

प्र.३ आपके घर के आस पास के पेड़ों के नाम लिखिए ।

.....

प्र.४ औषधि वाले पांच वृक्षों के नाम लिखिए ।

.....

प्र.५ पांच वृक्षों के चित्र बनाइये ।

Padmaja H.S School, Dewas Class- 6th Subject-Hindi Worksheet no.14

प्र.१ वर्तनी शुद्ध कीजिये ।

१. त्रीफला - २. पारिवारीक -
३. जीवनदाई -

प्र.२ तत्भव रूप लिखिए ।

- पितृ - , मातृ -
भ्राता - , आम्न -

प्र.३ वाक्य पूर्ण करो ।

१. आम वृक्ष
२. मीठे
३. पीपल
४. तुलसी

प्र.४ उक्त पंक्ति का भावार्थ लिखिए ।

देवदार दादाजी जैसा , इमली जैसे दादी
खिरनी नानी सी है मीठी , निर्मल सीधी सादी

.....
.....
.....
.....

प्र.५ आपके विद्यालय में उपलब्ध पेड़ पौधों के नाम लिखिए ।

.....
.....
.....

Padmaja H.S School, Dewas Class- 6th Subject-Hindi Worksheet no.15

प्र.१ रिक्त स्थान भरो |

१. यह भुक्तभोगी का है |
२. टूटी टाँग को साहित्य में करूँगा |
३. मेरा व्यवसाय है |
४. अक्सर एवं बाथरूम में फिसलते हैं |

प्र.२ वर्तनी शुद्ध करो |

- बाथरूम - , हडी -
- प्रशंशा - , केश -

प्र.३ ' बाथरूम की फिसलन ' पाठ में आए तत्सम एवं तत्भव शब्दों को छाँट कर लिखिए पांच पांच |

.....

.....

.....

प्र.४ निम्न लिखित प्रश्नों के उत्तर लिखिए |

१. ' बाथरूम की फिसलन ' पाठ एक क्या है ?

.....

२. ' बाथरूम की फिसलन ' पाठ के लेखक का नाम क्या है ?

.....

३. इस पाठ से आपको क्या शिक्षा मिलती है ?

.....

४. प्रत्यय के दो उदाहरण लिखिए |

.....

Padmaja H.S School, Dewas Class- 6th Subject-Hindi Worksheet no.16

प्र.१ रिक्त स्थान भरिये |

१. हड्डी टूटने से में इजाफा हुआ |
२. मेरा साहित्यिक वातावरण में हुआ |
३. कुछ क्षणों के लिए मन ही मन अपने को समझा |
४. का नाम लेना शुरू करो , सारे पाप धुल जाएँगे |

प्र.२ ' बाथरूम की फिसलन ' पाठ में आए अंग्रेजी शब्दों को छाँट कर लिखिए |

.....

.....

प्र.३ किसने कहा -

१. गनीमत है फिलहाल तो एक में ही लगा है |
२. अगर एनस्थीसियो की जरूरत हो तो यहाँ कई कवि मौजूद हैं |
३. अपराधी कोई हो और सजा किसी और को मिले |

प्र.४ लेखक व उनके छात्रों के बीच हुए संवाद को लिखिए |

.....

.....

प्र.५ लेखक की पत्नी क्यों झल्ला गई थी ?

.....

.....

प्र.१ सही जोड़ी मिलाइये ।

स्लिम	वादी
ईश्वर	भूमि
आदमी के भीतर	फ़ास्ट
भाव	मनोबल

प्र.२ वाक्य पूर्ण करो ।

१. इक्कीसवीं सदी

२. दर्द

३. मेरे मरीज

४. मैं जानने की कोशिश

प्र.३ 'आवट' एवं 'ई' प्रत्यय लगा कर दो - दो शब्द बनाइये ।

.....
.....

प्र.४ शब्द पूर्ण करो ।

१. पो ब , २. कनि.....रण

३. चता , ४. सफा

प्र.५ ' बाथरूम की फिसलन ' पाठ से आपको क्या पता चलता है ?

.....
.....

प्र.१ रिक्त स्थान की पूर्ति करो ।

१. के लिए केवल साहस प्रकट करना ही अभीष्ट नहीं ।
२. मध्यम श्रेणी का साहस प्रायः में पाया जाता है ।
३. ने उसके पिता की जागीर ज़ब्त कर ली थी ।
४. बादशाह के पास दो राजपूत नौकरी के लिए आए ।

प्र.२ एक शब्द में उत्तर दो ।

१. कौन कौन से काम बड़े अथवा छोटे साहस के बिना नहीं होते ?

.....

२. कौन कौन से वीरवरो ने आल्पस पर्वत पे विशाल शिखरो को पार किया ?

.....

३. अपने साहस के कारण कौन कौन आज भी हमारे हृदयो में जीवित है ?

.....

प्र.३ एक वचन में बदलिए ।

१. कपडे - २. मालाएं - ३. रोटियां -

प्र.४ संधि कीजिये ।

१. सहायता + अर्थ - , २. धर्म + आत्मा -

३. निः + पक्ष -

प्र.१ सही जोड़ी मिलाइये ।

मौरुदा	भक्ति
स्वदेश	जमींदार
कर्तव्य	गांव
बुद्धनसिंह	परायणता

प्र.२ वर्तनी शुद्ध करो ।

अतुलनिय - , सरवोच -
रनक्षेत्र - , अभीसट -

प्र.३ संधि कीजिये ।

विद्या + अर्थी - , नदी + ईश -
महा + उत्सव -

प्र.४ निम्न लिखित प्रश्नों के उत्तर लिखिए ।

१.साहसी व्यक्तियों के चित्र चिपकाइये । (कोई दो)

२.गणतंत्र दिवस के अवसर पर साहसपूर्ण कार्य करने वाले बालकों को सरकार की ओर से क्या दिया जाता है ?

.....

३. मौरुदा गांव को बचाने के लिए बुद्धनसिंह ने क्या किया ?

प्र.१ बहुवचन में बदलिए ।

१. किरण - २. आँख -

३. झरना -

प्र.२ रिक्त स्थान भरिये ।

१. साहसी व्यक्ति में एक होती है ।

२. का विचार प्रत्येक साहसी मनुष्य में होना चाहिए ।

३. कर्तव्यपरायण वीर की वीरता को लोग सम्मान पूर्वक याद करते हैं ।

४. अपने प्राणों की वह भी परवाह नहीं करता ।

प्र.३ शब्द पूर्ण करो ।

१. शि र २. स ३. विशा.....

प्र.४ वाक्यों में प्रयोग करो ।

१. प्राण -

२. कर्तव्यपरायण -

३. आक्रमण -

प्र.४ साहस पाठ में कितने प्रकार के साहस की बात कही गई है ? प्रत्येक के लिए एक एक वाक्य लिखें ।

प्र.१ वाक्य पुरे करो ।

१. मैं न बंधा हूँ

२. कोई नहीं पराया

३. अरे नहीं देवत्व

४. मेरी धरती

प्र.२ वर्तनी शुद्ध करों ।

अराध्य - , देवलाय - , अभीमान -

प्र.३ जोड़ी मिलाइये ।

आराध्य पाँति

जाति अभीमान

जग जंजीर

मानवता आदमी

प्र.४ निम्न लिखित पंक्तियों का भावार्थ लिखिए एवं कवि का नाम लिखिए ।

१. मैं बस कहता हूँ कि प्यार है तो घट - घट में राम बसे है ।

२. मुझसे तुम न कहो , मंदिर मस्जिद पर मैं सर टेक दूँ ।

प्र.१ रिक्त स्थान भरों ।

१. सुख न केवल तुम्हारा , सुख केवल का भी उसमे भाग है ।

२. मैं सिखलाता हूँ कि संसार को ।

३. मुझे सुनाओ तुम न स्वर्ग कहानियां ।

४. मैं न बंधा हूँ देश काल की जंजीर में ।

प्र.२ सही गलत का निशान लगाओ ।

१. कवि ने घर सारे संसार को कहा है । ()

२. कवि ने अपना आराध्य ईश्वर को माना है । ()

३. कवि को मानवता पर अभिमान है । ()

४. पराया का विलोम अपना होता है । ()

प्र.३ गोपालदास ' नीरज ' की दो रचनाओं के नाम लिखो ।

.....

प्र.४ ' कोई नहीं पराया ' कविता से आपको क्या सन्देश मिलता है ?

.....

.....

.....

.....

प्र.५ विलोम शब्द ।

ऊँची , अपना , शुभ , न्याय

प्र.१ सही जोड़ी बनाइये ।

- | | |
|-----------------|--------|
| १. शहनाई | गीत |
| २. मंगल | रामनाथ |
| ३. दहेज़ | बजना |
| ४. गीता के पिता | प्रथा |

प्र.२ रिक्त स्थान भरिये ।

१. देवकी की इकलौती लड़की थी ।
२. जो कुछ है , हमारा तो गीता ही है ।
३. हमे में कुछ नहीं चाहिए ।
४. पढ़ी लिखी है हमारी गीता ।

प्र.३ विलोम शब्द लिखिए ।

प्रसन्नता - , सच - , अपमान -

प्र.४ वर्तनी शुद्ध करों ।

अनमनि - , छलवा -

मानवतावदि - , रिस्ता -

प्र.५ क्रिया किसे कहते हैं ? उदाहरण सहित लिखिए ।

प्र.१ रिक्त स्थान भरों ।

१. वस्तु या सेवा का उपयोग करने वाला कहलाता है ।
२. सेवाओं के बदले बिल की राशि जमा कर प्राप्त करते हैं ।
३. रेलवे से का टिकट लेते हैं ।

प्र.२ जोड़ी मिलाइये ।

गारण्टी	फोरम
उपभोक्ता	वारण्टी
राशि	प्रशासन
जिला	मय ब्याज

प्र.३ वर्तनी शुद्ध करों ।

१. प्रकरण -
२. प्रमाणीत -
३. क्षतिपूर्ति -

प्र.४ उपसर्ग लगा कर तीन तीन शब्द बनाइये ।

१. परा -
२. अभि -

प्र.५ ' जागो उपभोक्ता जागो ' से हमें क्या सन्देश मिलता है ?

.....

.....

.....

.....

PADMAJA HS SCHOOL /CLASS VI/SUB-MATHS/WORKSHEET NO -01

1. Fill in the blanks.
 - a. 1 kilometer =
 - b. Round 2936 to the nearest ten's =
 - c. Write in roman numerals 93 =
 - d. By using the digits 2 , 7, 0, 3, 5, 1, 4 the greatest possible number is
 - e. Speed =.....
2. Solve these
 - a. Find value of $720 + 999$.
 - b. Find the products of 9250 and 29.
 - c. Find the value of $-896-414$.
 - d. Write nearest ten thousands of 75847.
3. The distance between the school and the house of a student is 2km 585m. every day she goes to school by walking. Find the total distance covered by her in 7days.
.....
.....
.....
.....
.....
4. A vessel has 5 liters and 500ml of curd. In how many glasses each of 30ml capacity it can be distributed?
.....
.....
.....
.....
.....

PADMAJA HS SCHOOL /CLASS VI/SUB-MATHS/WORKSHEET NO -02

1. Fill in the blanks
 - a. By using digits 9 , 0 and 5 make the smallest possible number.....
 - b. 10 lakhs =million
 - c. 1231 , write the nearest ten's
 - d. order means arrangement from the smallest to the greatest.
 - e. Write in words 234562842

2. Do as directed

- a. Write in roman numerals

79 99 85 78 65

- b. Find product of 578×161

- c. Insert commas suitably and write the numbers according to International system of numeration.

956789732

73574281

.....
.....
.....

3. The town newspaper is published everyday. One copy has 12 pages. If 11980 copies are printed in one day than find the no of total pages printed in one day.

.....
.....
.....
.....

4. A machine on an average manufactures 8825 screws a day. How many screws did it produce in the month of January 2006?

PADMAJA HS SCHOOL /CLASS VI/SUB-MATHS/WORKSHEET NO -03

1. Which of the following statements are true and false?

- a. The natural number 1 has no predecessor.
- b. All natural numbers are whole numbers.
- c. The whole number 0 has no predecessor.
- d. Zero is the smallest natural number.
- e. $2 \div 0$ is not defined.

2. Solve the followings

- a. Simplify $126 \times 55 + 126 \times 45$.
- b. Find the sum $1962 + 453 + 1538 + 647$.
- c. Find the product of 728×101
- d. Simplify $6524 / 34$
- e. Find product of 324×321 .

.....
.....
.....
.....

3. A vender supplies 32 liters of milk to a hotel in the morning and 58 liters in the evening. If the milk costs Rs 30 per liter than how much will be the total cost of milk?

.....
.....
.....
.....
.....

4. Simplify $3845 + 5 \times 782 + 769 \times 25 \times 218$.

.....
.....

PADMAJA HS SCHOOL /CLASS VI/SUB-MATHS/WORKSHEET NO -04

1. Give answer in one word.

- a. The first and the smallest whole number is
- b. The first and the smallest natural number is
- c. Are all natural numbers are also whole number?
- d. Successor of 235010 is
- e. The whole number 13 lies in between

2. Study the pattern and fill in the blanks.

$1 \times 8 + 1 = \dots\dots\dots$

$12 \times 8 + 2 = \dots\dots\dots$

$123 \times 8 + 3 = \dots\dots\dots$

.....

.....

.....

$\dots\dots\dots \times 8 + 4 = \dots\dots\dots$

$\dots\dots\dots \times 8 + \dots\dots = 98765$

3. If the product of two whole numbers is 1, can we say that one or both numbers of them will be 1? Justify your answer.

.....

.....

.....

.....

4. Find the product of 738 and 103 by using suitable property.

.....

.....

.....

.....

.....

PADMAJA HS SCHOOL /CLASS VI/SUB-MATHS/WORKSHEET NO -06

1. What will be the sum of any two odd numbers?

.....

2. What will be the sum of two even numbers?

.....

3. Write the smallest seven digit number and express it in to the form of prime factorization?

.....
.....
.....
.....

4. Write the definition of prime and co prime numbers with examples. Find HCF and LCM of any two co prime numbers.

.....
.....
.....
.....
.....
.....
.....
.....

5. True / False

- a. The sum of three odd numbers is even.
- b. The sum of 2 odd numbers and one even number is even.
- c. The product of 3 odd numbers is odd.
- d. Sum of two prime numbers is always even.
- e. 2 is the only even prime number.

PADMAJA HS SCHOOL /CLASS VI/SUB-MATHS/WORKSHEET NO -07

1. Match the column

- | A | B |
|-------|---------------------|
| a. 35 | i) multiple of 8 |
| b. 15 | ii) multiple of 7 |
| c. 16 | iii) multiple of 70 |
| d. 20 | iv) factors of 30 |
| e. 25 | v) factors of 50 |
| | vi) factors of 20 |

2. Find the common factors of 72 , 65 and 215.

.....
.....
.....
.....
.....
.....

3. Find the HCF 105 , 175 , 280

.....
.....
.....
.....

4. Three tankers contain 402 liters , 535 liters and 645 liters of diesel respectively. Find the maximum capacity of a container that can measure the diesel of the three containers exact number of time.

.....
.....
.....
.....

PADMAJA HS SCHOOL /CLASS VI/SUB-MATHS/WORKSHEET NO -08

1. Say true or false

- a. Two diameters of a circle will necessarily intersect to each other.
- b. The center of a circle is always in its interior.
- c. The diameter of the circle divides it in to two semi-circles.
- d. A triangle is a four sided polygon.

2. Do as directed

- a. Draw rough diagrams of open curved and closed curved.

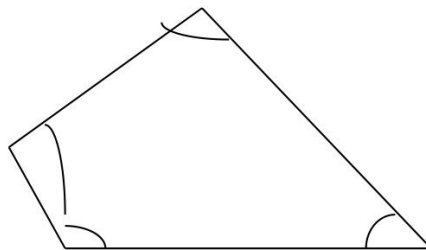
b. How many lines can pass through one given point?

.....
.....

c. How many lines can pass through two given point?

.....
.....

d. Name the angles in the given figure



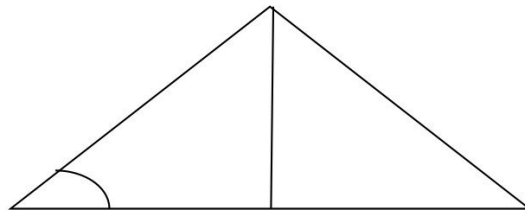
3. Draw a circle and marked its center ,radius, diameter , sector, segment.

1. A star in the sky gives us an idea of a point. Identify at least five such situations in your daily life.

.....
.....
.....
.....

2. How many circles can pass through three non collinear point. Justify your answer with construction.

3. Identify three triangles in given figure. Write their names also write the names of seven angles, six line segments.



.....
.....

4. Sides of triangle are 6cm , 5cm ,and 4m find the perimeter.

.....
.....
.....
.....
.....

PADMAJA HS SCHOOL /CLASS VI/SUB-MATHS/WORKSHEET NO -10

1. Match the following

A

- a. Straight angle
- b. Right angle
- c. Acute angle
- d. Obtuse angle
- e. Reflex angle

B

- i) less than fourth of a revaluation
- ii) more than half of a revolution.
- iii) half of a revolution
- iv) one fourth of a revolution
- v) between $\frac{1}{2}$ and $\frac{1}{4}$ th of revolut.
- vi) one complete revolution.

2. Say true or false

- a. The measure of an acute angle < 90 deg.
 - b. The measure of an obtuse angle < 90 deg.
 - c. The measure of a reflex angle > 180 deg.
 - d. The measures of one complete revolution = 360 deg
 - e. If $\angle A = 53^\circ$ and $\angle B = 35^\circ$ then $\text{ang } A < \text{ang } B$.
3. Draw the clock and draw angles of 90° , 30° and 180° by using its hour and minute hand. Write possible time on the given angles.

4. Draw two acute and two obtuse angles and write down their measures.

1. Give the definition of types of triangles according to their sides and according to their angles. Draw their diagrams also.

.....

.....

.....

.....

.....

.....

.....

.....

.....

.....

.....

.....

.....

.....

.....

.....

2. Say true or false
 - a. Each angle of a rectangle is a right angle.
 - b. The opposite sides of a rectangle are equal in length.
 - c. The diagonals of a square are perpendicular to one another.
 - d. All the sides of a rhombus are of equal length.
 - e. All the sides of a parallelogram are equal.
 - f. The opposite sides of a trapezium are parallel.
3. Draw a rough sketch of a regular hexagon, connecting any three of its vertices , draw a triangle. Identify the type of the triangle you have drawn.

PADMAJA HS SCHOOL /CLASS VI/SUB-MATHS/WORKSHEET NO -12

1. Fill in the blanks

a. An angle whose measure is less than that of a right angle is

.....

b. An angle whose measure is the sum of the measures of two right angles is

c. An angle whose measure is greater than that of a right angle is

.....

d. When the sum of the measures of two angles is that of a right angle, then each one of them is

2. Select any three objects having a flat top. Measure all sides of the top using the divider and ruler.

.....
.....
.....
.....
.....

3. What is the disadvantage in comparing line segments by mere observation?

.....
.....
.....

4. If A , B and C are three points on a line such that $AB = 5\text{cm}$, $BC = 3\text{cm}$ and $AC = 8\text{cm}$ which one of them lies between the other two ?

.....
.....
.....

PADMAJA HS SCHOOL /CLASS VI/SUB-MATHS/WORKSHEET NO -13

1. Draw a rough diagram
 - a. Cone
 - b. sphere
 - c. cylinder
 - d. cuboids
 - e. pyramid

2. What shape and size of the following. Write their measurements.
 - a. Your instruments box.
 - b. A brick
 - c. A match box.
 - d. A road- roller
 - e. A sweet laddu.

.....

.....

.....

.....

3. Draw and name the types of triangle.
 - a. Triangle with length of sides 7cm , 8cm ,and 9cm.
 - b. Tri ABC with AB = 8.7 cm AC = 7cm and BC = 6cm.
 - c. Tri.PQR such that all sides are of 5cm.
 - d. Tri.DEF with $\angle D = 90^\circ$.
 - e. Tri.XYZ with $\angle Y = 90^\circ$ and $XY = YZ$.
 - f. Tri.LMN with $\angle L = 30^\circ$, $\angle M = 70^\circ$ and $\angle N = 80^\circ$.

PADMAJA HS SCHOOL /CLASS VI/SUB-MATHS/WORKSHEET NO -14

1. What is the angle name for half a revolution?

.....
.....

2. What is the angle name for one fourth revolution?

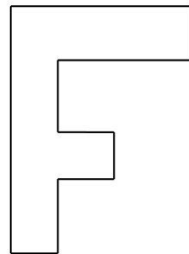
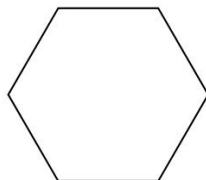
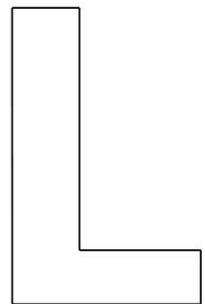

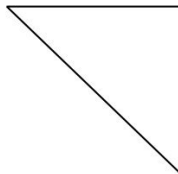
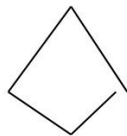
.....
.....

3. What part of revolution have you turned through if you stand facing-

- a. East and turn clockwise to face north.
- b. South and turn clockwise to face east.
- c. West and turn anticlockwise to face east.

.....
.....
.....
.....
.....
.....

4. Name each polygon



PADMAJA HS SCHOOL /CLASS VI/SUB-MATHS/WORKSHEET NO -15

1. Compare the following pairs of number using $>$ or $<$

a. 0 -8

b. -1 -15

c. 5 -5

d. 11 15

e. 0 6

f. -20 2

2. Write the following numbers with appropriate signs.

a. 100m below sea level.

b. 25°C above 0°C temperature.

c. 15°C below 0°C temperature.

d. Five numbers less than 0

3. Fill in the blanks

a. $(-8) + \dots = 0$

b. $13 + \dots = 0$

c. $12 + (-12) = \dots$

d. $(-4) + \dots = -21$

e. $\dots - 15 = -10$

4. Find the LCM and HCF of 120 and 240.

5. Convert $\frac{4325}{100}$ in to standard form and into decimal form.

PADMAJA HS SCHOOL /CLASS VI/SUB-MATHS/WORKSHEET NO -16

1. Fill in the blanks –

a. $(-7) - 8 - (-15) = \dots\dots\dots$

b. $(-13) + 38 - 10 - 5 = \dots\dots\dots$

c. $(-7) + (-10) + (-80) = \dots\dots\dots$

d. $50 - (-20) - (-15) = \dots\dots\dots$

e. $23 - (-12) - 5 = \dots\dots\dots$

2. Show the following on number line

a. 7 more than 9

b. 5 more than -4

c. 7 less than 5

d. 4 less than -3

3. Write opposites of the following

a. Increase in weight.

b. 40km north.

c. 326 B C

d. Loss of Rs 1500

e. 100m above sea level.

PADMAJA HS SCHOOL /CLASS VI/SUB-MATHS/WORKSHEET NO -17

1. Write true or false.

- a. -8 is to the right of -10 on the number line.
- b. -100 is to the right of -50 on a number line.
- c. Smallest negative integer is -1
- d. -26 is greater than -25.

2. Fill in the blanks with $>$, $<$ or $=$ sign

- a. $(-4) + (-10)$ $(-3) - (-6)$
- b. $(-2) - (-7)$ $(4) - (-3)$
- c. $(-24) - (-75)$ $(-52) - (-25)$
- d. $45 - (-11)$ $57 + (-4)$

3. Simplify the following

- a. $(-9) + (4) + (-7) - (-8)$
- b. $(-4) - (-6) + 48$
- c. $-10 - 54 + 98$
- d. $35 - 26 - 85$
- e. $23 - (-36) + 65 - 36$
- f. $39 - 38 - 36$
- g. $-35 - 36 - 37$
- h. $-25 - 26 - 29$
- i. $-38 - 25 - 39$
- j. $35 - 95 + 69$

.....

.....

.....

.....

.....

.....

PADMAJA HS SCHOOL /CLASS VI/SUB-MATHS/WORKSHEET NO -18

1. Write true and false , correct the sentence if it is false.

- a. -7 is to the right of -10 on a number line.
- b. 100 its to be right of 70 on a number line.
- c. Smallest negative integer is -3.
- d. -29 is greater than -28

.....
.....
.....

2. Represent the following number on a number line.

- a. -6
- b. -10
- c. 5
- d. -2.8
- e. -3.5

3. Write four negative integers greater than :

- a. -25
- b. -35
- c. 25
- d. 36
- e. -65

PADMAJA HS SCHOOL /CLASS VI/SUB-MATHS/WORKSHEET NO – 19

1. State true and false and make the false statement true.
 - a. If a number is divisible by 3, it must be divisible by 9.
 - b. If a number is divisible by 9, it must be divisible by 3.
 - c. A number is divisible by 18, if it is divisible by both 3 and 6.
 - d. If a number is divisible by 9 and 10 both then it must be divisible by 90.
 - e. If two numbers are co primes at least one of them must be prime.
 - f. All numbers which are divisible by 4 must also be divisible by 8.

.....

.....

.....

2. Draw factor trees of 90.

3. Find the HCF and LCM of two consecutive a. numbers b. even numbers c. odd numbers (numbers should be more than 100)

PADMAJA HS SCHOOL /CLASS VI/SUB-MATHS/WORKSHEET NO -20

1. Give 3 pairs of prime numbers whose difference is 2.

.....
.....
.....
.....

2. Write down separately the prime and composite numbers less than 20.

.....
.....
.....
.....

3. Write the smallest five digit number and express it into the form of prime factorization.

.....
.....
.....
.....

4. I am the smallest number having four different prime factors. Can you find me?

.....
.....
.....
.....

5. Find prime factors of

- a. 645
- b. 362
- c. 210

PADMAJA HS SCHOOL /CLASS VI/SUB-MATHS/WORKSHEET NO -21

1. Using the number line, write the integer which is

- a. 6 less than 2
- b. 3 more than -5
- c. 6 more than -5
- d. 2 less than 5.
- e. 3 more than -8

2. Find additions

- a. $-11 + (-12)$
- b. $25 + (+44)$
- c. $-32 - (-17)$
- d. $-45 + 69$
- e. $-32 - 69$

.....

.....

.....

.....

.....

.....

3. Fill in the blanks

- a. $(-5) + \dots = 0$
- b. $13 + \dots = 0$
- c. $15 + (-15)$
- d. $-4 + \dots = -18$

PADMAJA HS SCHOOL /CLASS VI/SUB-MATHS/WORKSHEET NO -22

1. Put the sign $>$, $<$ or $=$

a. $\frac{1}{2}$ 1

b. $\frac{3}{5}$ 1

c. 1 $\frac{7}{8}$

d. $\frac{4}{4}$ 1

e. $\frac{0}{6}$ 1

2. Write improper fraction with denominator 9?

.....

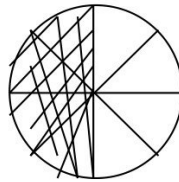
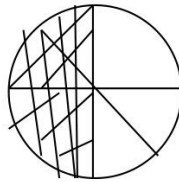
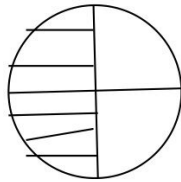
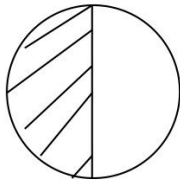
3. Write 5-5 examples of proper and improper fractions.

.....

.....

.....

4. Write the fractions. Are all these fractions equivalent?



5. Find five equivalent fractions

a. $\frac{2}{3}$

b. $\frac{5}{9}$

c. $\frac{3}{4}$

d. $\frac{6}{5}$

e. $\frac{2}{9}$.

PADMAJA HS SCHOOL /CLASS VI/SUB-MATHS/WORKSHEET NO -23.

1. Replace the \square in each of the following by the correct number.

a. $2/7 = 8/\square$

b. $5/8 = 10/\square$

c. $3/5 = \square /20$

d. $45/ 60 = 15/ \square$

e. $18/24 = \square / 4.$

2. Match the equivalent fractions and write other 2 for each.

a. $250/450$ _____ $2/3$

b. $180/200$ _____ $2/5$

c. $660/990$ _____ $1/2$

d. $180/360$ _____ $5/8$

e. $220/550$ _____ $9/10$

3. Ramesh had 20 pencils Sheelu had 50 pencils and Jamaal had 80 pencils after 4 months Ramesh used up 10 pencils Sheelu used up 25 pencil and Jamaal used 40 pencils. What fraction did each use up? Check if each has used up an equal fraction of their pencils ?

.....
.....
.....
.....
.....
.....

4. Write in standard form

a. $60/5$

b. $95/25$

c. $32/16$

d. $425/35$

PADMAJA HS SCHOOL /CLASS VI/SUB-MATHS/WORKSHEET NO -24

1. Put the sign :-

- a. $\frac{3}{6}$ $\frac{4}{6}$ b. $\frac{1}{7}$ $\frac{1}{5}$
c. $\frac{3}{5}$ $\frac{4}{5}$ d. $\frac{4}{5}$ $\frac{3}{7}$

2. Fill in the missing fractions :-

- a. $\frac{7}{10} - \text{.....} = \frac{3}{10}$
b. $- \frac{3}{6} = \frac{3}{6}$
c. $- \frac{3}{21} = \frac{5}{21}$
d. $+ \frac{5}{27} = \frac{12}{27}$

3. Write these fractions appropriately as additions or subtraction.



4. Express the following as improper fractions :-

- a. $2 \frac{5}{6}$ b. $5 \frac{9}{4}$ c. $9 \frac{8}{7}$

1. Say 'yes' or 'no' :-

- a. The fractions which have 1 as numerator are called unit fractions.
- b. Fractions having same denominators are like fractions.
- c. Fractions whose numerator are less than the denominators are called proper fractions.
- d. Fractions which indicates the same fractional number are said to be equivalent.
- e. Fractions having different denominator are unlike fractions.

2. Write 'True or False':-

- a. $\frac{3}{4} > \frac{2}{8} = \dots\dots\dots$
- b. $\frac{3}{5} > \frac{6}{5} = \dots\dots\dots$
- c. Is $\frac{5}{9}$ is equal to $\frac{4}{5} = \dots\dots\dots$
- d. $\frac{2}{12} = \frac{10}{16} = \frac{16}{96} .$
- e. $\frac{5}{6} > 0 \dots\dots\dots$
- f. $\frac{0}{4} = \frac{0}{6}$
- g. $\frac{4}{5} < \frac{5}{5} \dots\dots\dots$
- h. $\frac{5}{9} = \frac{30}{54}$

3. Shubham painted $\frac{2}{3}$ of the wall space in his room. His sister madhavi helped and painted $\frac{1}{3}$ of the wall space and his mother painted $\frac{4}{3}$ of the wall space. How much did they painted in all members?

PADMAJA HS SCHOOL / CLASS 6TH / SUBJECT- SCIENCE / WORKSHEET – 01

1. Fill in the blanks :

- a. Human being is Animal.
- b. Food taken by spider is
- c. The sweet juice of flower is called
- d. The main source of butter is
- e. plant have edible leaves.

2. Choose the correct one:

a. What are ingredients of preparing chapatti –

- i. Atta ii. Water iii. Atta and water iv. none

b. Which one of the following is a carnivorous animal –

- i. sparrow ii. Owl iii. Parrot iv. cow

c. Material required to prepare a food item –

- i. nutrients ii. Ingredients iii. Minerals iv. Nourishment

d. Which of the following is not a milk product –

- i. cheese ii. Butter iii. Honey iv. Yogurt

e. The part of banana part not used as food is –

- i. flower ii. Fruit iii. Stem iv. Root

3. Reassemble the following words-

- a. lilchi
- b. itruf
- c. senoboya
- d. roundgunt
- e. kpnimup

4. Why should we avoid waste food?

.....

.....

.....

.....

5. Name the 2 types of ingredient of food which do not come from plants and animals.

- 1.
- 2.

PADMAJA HS SCHOOL / CLASS 6TH / SUBJECT- SCIENCE / WORKSHEET – 02

1. Fill in the blanks –

- a. We get oil from the of mustard plant.
- b. Honey bee store their honey in
- c. The edible part of plant is called part.
- d. plant have edible stem.
- e. Frog is a animal.

2. Choose the correct option –

a. Honeybee store honey in –

- i. Hives
- ii. Homes
- iii. Soil

b. Carnivorous animal is-

- i. Deer
- ii. Goat
- iii. Cow
- iv. Snake

c. What are the ingredients used to prepare rice –

- i. raw rice
- ii. Water
- iii. Both i. and ii.
- iv. None

d. food taken by lizard is –

- i. insects
- ii. fruits
- iii. Flower
- iv. None

e. Plant whose roots are used as food –

- i. Carrot
- ii. Guava
- iii. Banana
- iv. None

3. Choose the odd one out –

- a. Apple, Banana, Orange, Potato
- b. Leaf, Root, Stem, sun
- c. Red, orange, pink, green
- d. Spoon, bowl, plate, pen
- e. T.V. , radio, mobile, bottle

4. Name 5 animal products.

- 1.
- 2.
- 3.
- 4.
- 5.

5. Mention at least 4 non-green plants that we consume as food.

- 1.
- 2.
- 3.
- 4.

6. Write name of any 2 fruits and name of 2 vegetables which are grown in your state.

Fruits	1.	
Vegetables		

PADMAJA HS SCHOOL / CLASS 6TH / SUBJECT- SCIENCE / WORKSHEET – 04

1. Fill in the blanks :-

- a. Our body prepare Vitamin C in the presence of
- b. A solution of and caustic soda is used to test the presence of protein.
- c. test is used to confirm the presence of starch.
- d. Deficiency of vitamin C causes disease.
- e. vitamin makes our bones and teeth strong.

2. Match the columns :-

Column A

Column B

i. Starch

i. Oily patches

ii. Punjab

ii. Idli – dosa

iii. Fat

iii. Caustic soda + copper sulphate

iv. Protein

iv. iodine

v. Karela

v. Makka roti and Sarso saag

3. Write true / false and for false ones write the correct sentence:-

- a. Some nutrients get lost during the process of cooking.

.....

- b. Lack of vitamin A causes loss of vision.

.....

- c. Vitamin B keeps our skin healthy.

.....

- d. Calcium is essential for preparing haemoglobin in our blood.

.....

4. What is the function of fat in our body? Name 3 sources of fat in our food.

.....

.....

.....

.....

5. What is the function of protein in our body? Name 3 sources of protein in our food.

.....

.....

.....

.....

PADMAJA HS SCHOOL / CLASS 6TH / SUBJECT- SCIENCE / WORKSHEET – 05

1. Choose the correct option:-

a. Wool is obtained from -

- i. Sheep ii. Goat iii. Yak iv. None

b. Which one is synthetic fibre -

- i. Polyester ii. Wool iii. Patsun iv. None

c. Cotton crops give which fibre -

- i. Wool ii. Silk iii. Patsun iv. Cotton

d. Stem of which plant gives fibre –

- i. Wool ii. Silk iii. Patsun iv. All

2. Fill in the blanks :-

a. Hand operated device used for spinning is known as

b. A single yarn is used to make a piece of fibre. This is known as

c. In Climate cotton crops grow.

d. A thin strand of thread is called

3. From which source do we get paper?

.....

4. Explain about the process of spinning in detail.

.....

5. Find the name of 6 fibres given in the puzzle.

A	N	P	A	V	U	M	I	T	J
B	Y	Y	Q	W	T	N	H	S	K
C	L	Z	X	R	S	O	G	I	L
P	O	L	Y	S	T	E	R	L	C
D	N	R	M	N	O	P	F	K	O
E	I	L	W	O	O	L	C	B	T
F	G	F	E	T	S	Q	D	A	T
G	H	J	U	T	E	R	E	Z	O
H	J	K	L	M	N	U	V	X	N
I	O	P	Q	R	S	T	W	Y	A

6. Write the name of the fibre from which your school dress has been made.

.....

PADMAJA HS SCHOOL / CLASS 6TH / SUBJECT- SCIENCE / WORKSHEET – 06

1. Fill in the blanks :-

- a. and are made from coconut fibres.
- b. Polyester is a fibre.
- c. Weaving of fabric is done on
- d. fibre is obtained the stem of plant.

2. Match the column :-

Column A

Column B

- | | |
|------------------------------------|-------------|
| i. Plant fibre | i. Silk |
| ii. Animal fibre | ii. Nylon |
| iii. Making yarn | iii. Jute |
| iv. Separation of seeds by combing | iv. Weaving |
| v. Arranging 2 set of yarn | v. Spinning |
| vi. Synthetic fibre | vi. Ginning |

3. Define the following :-

- a. Spinning -
.....
- b. Ginning -
.....

4. Choose the odd one out :-

- a. Nylon, wool, polyester, water.
- b. Science, E.V.S., Maths, Chapati.
- c. Mother, father, sister, cat.
- d. Iron, silver, gold, sand.
- e. Weaving, spinning, ginning, stirring.

5. Why does the smell of burning cotton yarn give smell similar to that of burning paper?

.....
.....
.....
.....

6. Write the name of 4 fibers and the smell given out by them on burning :-

Name of the fibre	Type

PADMAJA HS SCHOOL / CLASS 6TH / SUBJECT- SCIENCE / WORKSHEET – 07

1. Choose the correct option :-

a. Which one is not an unstitched piece of fabric-

- i. saree ii. dhoti iii. Lungi iv. trousers

b. Jute fabric is obtained from of jute plant –

- i. root ii. stem iii. Leaves iv. flower

c. The process of separating fibres from seed by combing is known as –

- i. ginning ii. spinning iii. Weaving iv. knitting

d. The fruits of cotton plant are –

- i. balls ii. jute iii. Yarn iv. cushion

e. Which one of the following is not a natural fibre –

- i. cotton ii. jute iii. Nylon iv. wool

2. Answer the following in one sentence :-

a. Coconut fiber can be woven into which fabric?

.....

b. What is the process of rearing silkworm on mulberry trees to get silk called?

.....

c. Name the process of removing hair from the skin of goat and sheep.

.....

d. Who will absorb more water – nylon or cotton?

.....

e. Name the way of making fabric from yarn other than weaving.

.....

3. Why are cotton clothes preferred over synthetic clothes?

.....
.....
.....
.....

4. What is retting? How is it done? Write 2 uses of the fibre which is extracted by retting.

.....
.....
.....
.....
.....
.....
.....
.....
.....
.....

PADMAJA HS SCHOOL / CLASS 6TH / SUBJECT- SCIENCE / WORKSHEET – 08

1. Choose the correct option :-

- a. The thinner strand of thread are known as –
i. fibres ii. fabric iii. Yarn iv. cotton
- b. Which one of the following is not a synthetic fibre –
i. polyster ii. nylon iii. acrylic iv. silk
- c. Which state does not grow jute –
i. West Bengal ii. Bihar iii. Assam iv. Rajasthan
- d. Fibres obtained from animals are made up of –
i. Proteins ii. Carbohydrates iii. Cellulose iv. Vitamins
- e. The process of twisting fiber to make yarn is called –
i. combing ii. ginning iii. spinning iv. knotting
- f. Where was silk first produced in 3000 BC-
i. India ii. America iii. Australia iv. china

2. Do as directed :-

a. Define sericulture.

.....
.....

b. Name the animal from which Pashmina Wool is obtained?(answer in 1 sentence)

.....

c. Name the fabric obtained from Flax seed and give its 2 uses.

.....
.....
.....

...

d. Write the name of any 4 non-biodegradable fibers.

- 1.
- 2.
- 3.
- 4.

e. Which fibre is resistant to mite and fungus?

f. What is the chemical composition of plant fiber?

g. What kind of soil is needed for growing cotton plant?

h. is a famous Sufi saint and a poet who was a weaver too.

i. Complete the spelling –

- e i u t re.
- i n i ng.
- K t l G.

PADMAJA HS SCHOOL / CLASS 6TH / SUBJECT- SCIENCE / WORKSHEET – 10

1. Jumble words :-

a. p n a e s t a n r r t

.....

b. t r l s c a e n n t

.....

c. q e u o e p

.....

d. l e b s l o u

.....

e. s h w o d a

.....

f. m i l a u n i u m

.....

2. Fill in the blanks :-

a. Rubber is a of heat.

b. An apple is in shape.

c. Different type of material have Properties.

d. Your palm is an object.

e. Oil is completely in water.

3. Choose the correct answer:-

a. Which of the following is lustrous material:

i. wood ii. plastic iii. copper iv. chalk

b. Which one of the following is insoluble in water:

i. oxygen ii. sugar iii. salt iv. sawdust

c. A material which do not completely dissolve in water is called :

i. soluble ii. insoluble iii. opaque iv. translucent

d. Butterpaper is

i. transparent ii. translucent iii. opaque iv. oily

e. Which one of the following will float on water :

i. iron nails ii. dry leaves iii. stone iv. steel

4. Why shopkeeper prefer to keep biscuits, sweets and other eatables in transparent container?

.....
.....
.....
.....
.....

PADMAJA HS SCHOOL / CLASS 6TH / SUBJECT- SCIENCE / WORKSHEET – 11

1. Choose the correct answer:

a. Material that are difficult to compress is called :

- i. hard material ii. soft material iii. sponge material iv. none

b. Which one of the following are transparent object :

- i. wood ii. thermocol sheet iii. mirror iv. water

c. Which one of the following objects are soluble in water

- i. chalk powder ii. sugar iii. clay iv. table salt

d. Which one of the following gives the meaning same as 'lustre' –

- i. shining ii. darkness iii. both iv. none

e. Which one is soluble in water and not in oil

- i. soap ii. salt iii. salt iv. none

2. Choose the odd one out :

- a. jasmine, rose, potato, lily
- b. sugar, salt, water, sand
- c. nails, hair, eyes, kajal
- d. chapatti, paratha, stone, pulav
- e. copy, diary, pen, notebook

3. Complete the spelling :

- a. s ri g
- b. h r n..... ss
- c. p w..... r
- d. po er.....i.....s
- e. v ss.....ls
- f. p t..... to

4. Roma has a bag full of apples. A few apples are rotten. How does Roma separate the rotten ones?

.....

.....

.....

.....

.....

5. Name 5 objects which have fixed volume but no fixed shape.

- a.
- b.
- c.
- d.
- e.

PADMAJA HS SCHOOL / CLASS 6TH / SUBJECT- SCIENCE / WORKSHEET – 12

1. Why does a cloth tumbler not able to store liquid?

.....
.....
.....
.....

2. Mixtures of red chilli powder in water, petrol in water and honey in water is given to Radha, Sofia and Raveena respectively. Whose mixture is in solution form and why?

.....
.....
.....
.....

3. Take a small cotton ball and place it in a tumbler filled with water, observe it for 10 minutes. Will it float or sink in water and why?

.....
.....
.....
.....

4. Shikha and her brother playing hide and seek with her brother, on a bright sunny day. She hide herself behind a glass door. Do you think her brother will be able to locate her? If yes, why? If no why not?

.....
.....
.....
.....

5. You are provided with the following materials- turmeric, honey, mustard oil, water, glucose, and rice flour and groundnut oil. Make 3 pairs of substance where one substance is soluble in the other any 3 pairs where one substance remains in soluble in the other.

Pair that is soluble	Pair that is not soluble

PADMAJA HS SCHOOL / CLASS 6TH / SUBJECT- SCIENCE / WORKSHEET – 13

1. Write true / false and correct the wrong one :

- a. Equal amounts of soluble components dissolve in water.
.....
- b. Large quantity of salt cannot be dissolved in water while heating.
.....
- c. Handpicking method is used to separate tea leaves from tea.
.....
- d. Filtration method is used to separate husk from wheat.
.....
- e. Threshing is a method to separate mud from water.
.....

2. Fill in the blanks:

- a. The process of conversion of water into vapours is called
- b. The process of conversion of vapours into water is called
- c. The process for separation of heavy components from a mixture is
- d. The process used to separate grains from stalk is called
- e. If a substance contains only one type of component then it is called substance.

3. Choose the correct answer:

- a. The method used to separate butter from milk is
i. churning ii. filtration iii. none iv. both
- b. Which is a pure substance
i. iron ii. soil iii. both iv. none
- c. Method used to separate cover of groundnut from the seeds
i. filtration ii. winnowing iii. threshing iv. sieving
- d. Solution means
i. solid dissolve in liquid ii. liquid dissolve in gas iii. none

4. The colour of water changes when rice or pulse that is to be cooked are washed in it. Why?

.....
.....
.....
.....
.....
.....

PADMAJA HS SCHOOL / CLASS 6TH / SUBJECT- SCIENCE / WORKSHEET – 14

1. A mixture of iron nail, salt, oil and water is given to you. Give the stepwise method to separate each of them. Explain in detail the processes too.

.....
.....
.....
.....
.....
.....
.....

2. Choose the correct option:

a. Paheli brought some French beans, lady finger, green chillis, brinjals and potatoes all mixed in a bag. Which of the following method of separation would be most appropriate for her to separate them?

- i. winnowing ii. threshing iii. sieving iv. handpicking

b. Which type of material is used for making the front glass of the car?

- i. transparent ii. translucent iii. opaque iv. all

c. The process of setting down of solid particles in a liquid is known as

- i. sublimation ii. sedimentation iii. decantation iv. precipitation

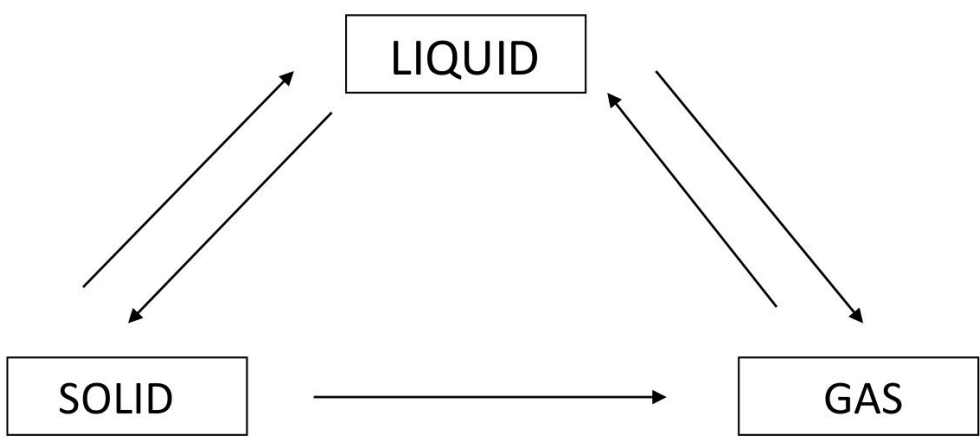
d. Which of the following is essential for winnowing-

- i. soil ii. water iii. air iv. none

e. Handpicking is effective in

- i. gaseous mixture ii. solid mixture iii. liquid mixture iv. none

3. Write the names of the processes given below for the conversion of solid, liquid and gas. (Sublimation, Evaporation, condensation, freezing and melting)



PADMAJA HS SCHOOL / CLASS 6TH / SUBJECT- SCIENCE / WORKSHEET – 15

1. Paheli was feeling thirsty but there was only a pot of water at home, which was also muddy. How do you think she would have made it fit for drinking if the following things were available to her? Write the processes involved too.

(alum, tub, muslin, cloth, gas stove, thread pan and lid)

.....
.....
.....
.....
.....
.....
.....

2. Answer in one word:

a. Boojho’s grandmother was suffering from diabetes. Her doctor advised her to take lassi with less fat content. Which method would be most appropriate to prepare it?

.....

b. Method used to separate grains from bundles of stalks.

c. Which method is suitable to separate grains from flour.

d. Method used to get back Copper sulphate dissolved in water?

3. Fill in the blanks:

a. Air is a

b. Process of changing of solid into vapours without changing into liquid is

.....

c. Method for separating material on the basis of shape and size is

d. Method is used to separate salt from water.

e. process is used to convert vapour into liquid.

4. Write any 6 places where you use the different processes of separation and there importance for separating.

.....
.....
.....
.....
.....
.....

PADMAJA HS SCHOOL / CLASS 6TH / SUBJECT- SCIENCE / WORKSHEET – 16

1. Both sarika and mohan were asked to make salt solution. Sarika was given a tablespoon full of salt and half glass of water, whereas mohan was given 20 tablespoons and half glass water.

a. How would they make the salt solutions?

.....
.....
.....

b. Who would be able to prepare saturated solution and why?

.....
.....
.....

2. Answer in one word:

a. During filtration the particle that remain on the filter paper are

b. Transferring of clear liquid from one container to another using a glass rod

.....

c. Pebbles and stones are removed from sand by

d. Define sublimation.

.....
.....
.....

PADMAJA HS SCHOOL / CLASS 6TH / SUBJECT- SCIENCE / WORKSHEET – 17

1. Classify into reversible or irreversible changes:

- a. Opening of door
- b. Cutting of tree
- c. Blooming of a flower
- d. Make aeroplane from paper
- e. Burning of candles
- f. Changing of curd into milk
- g. Blowing of a balloon
- h. Tearing of a paper
- i. Cooking of rice

2. Classify the following changes as physical or chemical change:

- a. Freezing of water
- b. Boiling of water
- c. Melting of ghee
- d. Hardening of cement
- e. Expansion of a ring
- f. Melting of chocolate
- g. Mixing of salt in water
- h. Burning of insense sticks
- i. Rotting of food and fruits

3. A piece of iron is heated till it becomes red hot. It then becomes soft and is beaten to a desired shape. What kinds of changes are observed here? Explain how they take place?

.....
.....
.....
.....
.....

4. Paheli has bought a new bottle of pickle from the market. She tried to open the metal cap to taste it but couldn't do so. She then took a bowl of hot water and immersed the upper part of bottle in it for 5 minutes. She could easily open the bottle now. Can you explain the reason for this?

.....
.....
.....
.....
.....

PADMAJA HS SCHOOL / CLASS 6TH / SUBJECT- SCIENCE / WORKSHEET – 18

1. Give an example of each of the following:

a. Change that occur on heating but can be reversed.

.....

b. Change that occurs on heating but cannot be reversed.

.....

c. Change that occur on cooling but can be reversed.

.....

d. Change which occur on cooling but cannot be reversed.

.....

e. Change that occur on burning but cannot be reversed.

.....

f. Change that occur naturally in human body.

.....

g. Change that occur naturally in plants.

.....

2. It was Shikha's birthday, her brother Simba was helping her to decorate the house for the party and her parents were also busy making other arrangements. Following were the activities going on. Identify them as types of changes occurring:

a. Simba blew balloons and put them on wall.

b. Some balloons got burst.

c. Shikha cut strips of different colour and put them on wall.

d. Shikha made flower out of coloured paper.

e. Mother rolled dough balls to make puris.

f. Her father made dough balls out of flour.

g. Mother heated oil in a pan.

h. Father fried the puris in the pan.

3. Choose the odd one out:

a. Chair, table, bed, glass.

b. Red, green, blue, liquid.

c. Bike, cycle, car, horse.

d. Computer, laptop, t.v., cat.

e. Add, subtract, ball, divide.

PADMAJA HS SCHOOL / CLASS 6TH / SUBJECT- SCIENCE / WORKSHEET – 19

1. Give reason why the burning of crackers is a chemical change?

.....
.....
.....
.....
.....

2. When a candle burns both physical and chemical changes occur. Explain how with a well labeled diagram?

.....
.....
.....
.....
.....

3. Write true or false:

- a. Melting of ice is a reversible change.
- b. Melting of wax is irreversible change.
- c. Conversion of water into vapour is a physical change.
- d. Making lemonade is a reversible change.
- e. Tearing a paper is a chemical change.

4. Fill in the blanks:

- a. Germination of seed is a change.
- b. Making a dough from flour is achange.
- c. Cutting of fruits is achange.
- d. Making a chapatti is achange.
- e. Burning of paper is achange.
- f. Using up of electricity by fan is achange.

5. Write 2 essential changes in our daily life with their classification.

- 1.
- 2.

PADMAJA HS SCHOOL / CLASS 6TH / SUBJECT- SCIENCE / WORKSHEET – 20

1. Rearrange the following words:

- a. icalyhp
- b. CemhiacI
- c. isreverelb
- d. Rierevsielb
- e. Anchegs

2. Do as directed:

a. Give an example of a change that can be reversed but takes more time.

.....

b. Type of change in melting of ice.

c. Type of change in conversion of water to vapour.

d. What happens to metals on heating? (answer in one sentence)

.....

e. Ripening of fruit is fast or slow reaction? (answer in one sentence)

.....

f. Which of the following is a desirable change

- i. burning of house
- ii. floods
- iii. landslides
- iv. burning of cooking gas

g. Baking of dough into bread is what type of change? (answer in one sentence)

.....

h. Changes in which heat is liberated are called changes.

i. What is the reaction on heating metals? (answer in one sentence)

.....

j. Write 2 examples of fast changes.

1.....

2.....

3. Size of iron rim is smaller than that of the wooden wheel. But this rim is fitted on the wheel after heating it. Why? Write the type of change occurring here and explain it.

.....
.....
.....
.....
.....
.....
.....
.....
.....

PADMAJA HS SCHOOL / CLASS 6TH / SUBJECT- SCIENCE / WORKSHEET – 21

1. Meena tries to pull out a branch of grass and a rose plant from soil. Which one is easy to pull and why?

.....
.....
.....
.....

2. Do the labeling in the diagram: (plant)

3. Do as directed :

- a. Name the plant with soft short stem
- b. Plant with woody thorny stem
- c. Plant with thick brown stem
- d. Plant which wants support to be upright
- e. Part where the storage of food takes place

PADMAJA HS SCHOOL / CLASS 6TH / SUBJECT- SCIENCE / WORKSHEET – 22

1. Answer the one word :

- a. Process by which leaves give out water
- b. Write the name of any 2 herb plants,
- c. Food preparation process of plants
- d. Write 2 examples of creepers,
- e. In respiration plants release
- f. Element in plant that helps in absorbing sunlight

2. Complete the following words:

- a. Tp
- b. f.....b.....ou.....
- c. c.....ee.....e.....s
- d. c.....i.....b.....r.....
- e.e.....b
- f. c.....l.....r.....ph.....ll
- g. p.....o.....o.....y.....t.....e.....is
- h. t.....a.....sp.....r.....t.....on
- i. t.....u.....k

3. Sahil visited her aunt’s home. There he saw an ornamental plant in a pot. The plant took the support of a neighbouring structure to climb. What do we call such a plant? Give 3 example of such a plant and write its 4 characteristics.

.....

.....

.....

.....

.....

.....

.....

.....

.....

.....

4. Is there any relation between type of roots and the venation of leaves? Explain in detail.

.....

.....

.....

.....

.....

PADMAJA HS SCHOOL / CLASS 6TH / SUBJECT- SCIENCE / WORKSHEET – 23

1. Fill in the blanks:

- a. Part by which a leaf is attached to the stem is
- b. Leaf like structure that protect flower in bud stage
- c. Plant with weak stem that cannot stand upright but spread on ground is
- d. Part of the plant that anchors it to the soil
- e. Arrangement of veins or lamina is called

2. Write true or false and correct the wrong one:

- a. Stamen is a part of stem.
.....
- b. Plants depend upon other plant for their food.
.....
- c. Plants have 4 types of roots.
.....
- d. Stem does not conduct water to leaves.
.....
- e. Sepals protect the flower after the bud blooms.
.....

3. Sam learned that green plants prepare their own food by photosynthesis. Name the raw materials for it and explain the process in detail.

.....

.....

.....

.....

.....

.....

.....

.....

.....

.....

4. Match the column:

Column A

- i. herb
- ii. shrub
- iii. tree
- iv. climber
- v. stamen

Column B

- i. thick brown stem
- ii. flower
- iii. small height
- iv. woody thorny stem
- v. money plant

PADMAJA HS SCHOOL / CLASS 6TH / SUBJECT- SCIENCE / WORKSHEET – 25

1. Do as directed:

a. Name the joint in the elbow and write a feature of it.

.....
.....

b. What is heart protected by?

c. Name the joint joining head and the neck and write its 1 feature.

.....
.....

d. Name the bird that can walk, fly and swim?

e. Write the name of 2 animals having 3 pairs of legs.

1..... 2

2. Write true or false and correct the wrong one:

a. Snakes have long back bone.

.....

b. Shell of snail is not made up of bone.

.....

c. Bones cannot bend.

.....

d. Muscles cannot pull.

.....

e. Muscles can help in movement of bones.

.....

f. Snakes cannot move in a straight line.

.....

3. Explain how does a snake moves?

.....
.....
.....

4. Fill in the blanks:

a. numbers of bones are present in an adult human.

b. joint in immovable.

c. protects our lungs.

d. joint helps the body to rotate in all directions.

e. bone protects the lower abdominal organs.

PADMAJA SCHOOL DEWAS/ CLASS 6TH/SUB-SO SCIENCE/WORKSHEET NO-01

1. Fill in the blanks

- a. Language in which petro graphs are not written.....
- b. Three quarters of the total rock of India have been found in
.....
- c. Which is not developed in ancient era.....
- d. The Greek traveler.....travelled to our country.
- e.is the book written by travelers.
- f. Literary sources focus on the different contemporaryof the period.

2. Give answers .

- a. What do you understand by archaeologist?

.....
.....
.....
.....
.....

- b. Who explored the facts of bhim betka?

.....
.....
.....
.....
.....

- c. Write the name of Chinese traveler who travelled to our country.

.....
.....
.....
.....
.....
.....
.....

PADMAJA SCHOOL DEWAS/ CLASS 6TH/SUB-SO SCIENCE/WORKSHEET NO-03

1. Give answers of these questions

a. How did the primitive man collect food?

.....
.....
.....

b. How did primitive man hunt?

.....
.....
.....

c. What did the primitive man wear?

.....
.....
.....

d. When did agriculture begin in India?

.....
.....
.....

2. Give answer in one word

a. In which age man gradually learnt the art of making handles of the tools?

.....

b. Till 2500BC. Which civilization began to take shape?

.....

c. Who even today adorn themselves with feathers shells wood coloured stones horns and teeth of animals.

.....

3. Draw stone tools of primitive man and write its uses.

.....
.....
.....
.....

PADMAJA SCHOOL DEWAS/ CLASS 6TH/SUB-SO SCIENCE/WORKSHEET NO-04

1. Give answers of these questions

a. Who was the primitive man?

.....
.....

b. Into how many parts stone age can be divided?

.....
.....

c. What were “ Rock Shelters “?

.....
.....

d. What changes gradually occurred in the body human beings.

.....
.....

2. Give answer in one word

a. In which age tools were gigantic and heavy in shape.....

b. The painting were done on the rocks are called.....

c. Which discovery proved a boon for primitive man?.....

3. Explain the rock paintings with help of diagram.

.....
.....
.....
.....
.....

4. Say true or false

a. Primitive man wandered in search of food.

b. The rock shelters were small at some places.

c. Primitive man depicted their daily activities through colours.

d. The discovery of fire was significant.

e. To protect themselves from cold rain they covered themselves with.

PADMAJA SCHOOL DEWAS/ CLASS 6TH/SUB-SO SCIENCE/WORKSHEET NO-05

1. Give answer in one word

a. Who takes responsibility of their children?

.....

b. What is the unit of family?

.....

c. Where does individual live and grow?

.....

2. Make a list of 5 nuclear and 5 joint families nearby your surroundings.

.....

.....

.....

.....

.....

.....

3. Say True or False

a. Responsibility is the feeling of family.

b. Person is the unit of society.

c. Sociologists consider society as a network of social relations.

d. An amalgamation of some families make a society.

e. An educated society can control social evils.

f. Living together in a family not provides a sense of security.

g. A big family is considered to nuclear family.

4. Pick the odd one out.

a. Cow , buffalo, tiger , goat.

b. Petrol ,cloths , diesel , kerosene

c. Paleolithic , black stone age , Mesolithic, Neolithic.

PADMAJA SCHOOL DEWAS/ CLASS 6TH/SUB-SO SCIENCE/WORKSHEET NO-06

1. Give answer in one word.
 - a. Who take care of you and prepare food for you?
.....
 - b. What is the unit of society?
.....
 - c. What decide the characteristics of the individuals
.....
2. Pick the odd one out
 - a. Crop ,food grains, food , produce
 - b. Family , community, marriage ,society
 - c. Food , clothes , electricity , shelter
3. Make a list of food habits , life style ,traditions and festivals of people of different religious.
.....
.....
.....
.....
4. Fill up the blanks
 - a. The personal needs of members arein the family.
 - b. A group of people having blood relation and staying.....
 - c. The school is also like a
 - d. The social organization and relations are the basis of a
5. Say true or false
 - a. Each society has its own structure.
 - b. Society has not their own organization.
 - c. A society is a system.
 - d. A small family is considered an ideal family.

PADMAJA SCHOOL DEWAS/ CLASS 6TH/SUB-SO SCIENCE/WORKSHEET NO-07

1. Write 5 things produced in village.

.....
.....
.....

2. Write 5 things produced in city.

.....
.....
.....

3. Make a list of things which are available in India and which are imported.

.....
.....
.....
.....

4. Which crops grown in India?

.....
.....
.....
.....

5. Circle the odd one

- a. Seeds, fertilizers, crop, cloth
- b. Village, town, city, Dewas
- c. Wheat , gram, cotton, cycle

6. Fill in the blanks

- a. Our civic life depends on.....and
- b.brought human beings close to each other.
- c. All the members in your family.....with each other.
- d. The work we do regularly is called.....

7. Say true or false

- a. The need of mutual help is not felt in family.
- b. Mutual help forms the basis of our civic life.
- c. All things are available in a particulars area.

PADMAJA SCHOOL DEWAS/ CLASS 6TH/SUB-SO SCIENCE/WORKSHEET NO-08

1. Give answer in one word

- a. The head of the solar system is the
- b. The planet which has all the signs of life is
- c. The nearest planet to the sun is
- d. The biggest planet yellow in color.....
- e. The satellite of the earth is

2. Give answer in short

- a. Who said first the Earth is round?
- b. What do you mean by asteroids?
- c. What do you understand by light year?
- d. What is galaxy?

.....
.....
.....

3. Say true or false

- a. Sun has not a big family.
- b. The number of planet in solar system is nine.
- c. Comets are the celestial mass with heads and long tails.
- d. Bhaskar is a natural satellite.
- e. The satellites get light and heat from the Earth.

4. Fill in the blanks

- a. The earth has of the three realms.
- b. Thecomet is well known.
- c.is imaginary line which links two opposite poles.

5. Draw the diagram of comets.

PADMAJA SCHOOL DEWAS/ CLASS 6TH/SUB-SO SCIENCE/WORKSHEET NO-09

1. Give answer in one word

- a. The celestial bodies which rotate round the sun.....
- b. The path on which the planets rotate.....
- c. The imaginary lines which links two opposite poles.....
- d. The celestial bodies which rotate around the planet.....
- e. The man made small and temporary satellites.....

2. Give answers in short

- a. What is the time of revolution and rotation of earth?
.....
- b. What do you mean by comet?
.....
.....
.....
- c. What do you understand by the universe
.....
.....
.....
- d. What time is taken by the sun rays to reach earth?
.....
.....
.....

3. Say true or false

- a. The diameter of the sun is 400 times bigger than the moon.
- b. The smaller celestial bodies which are close to the earth look smaller.
- c. Our earth is an important member of the solar system.
- d. In ancient time people thought that the earth's surface is round.
- e. Earth is a living planet.

PADMAJA SCHOOL DEWAS/ CLASS 6TH/SUB-SO SCIENCE/WORKSHEET NO-10

1. Write 5 characteristic of earth.

.....
.....
.....
.....
.....
.....

2. Draw a diagram of solar system.

3. Why does Pluto not consider to be a planet now?

.....
.....
.....

4. Write the physical condition of Earth.

.....
.....
.....

PADMAJA SCHOOL DEWAS/ CLASS 6TH/SUB-SO SCIENCE/WORKSHEET NO-11

1. Give answer of the following questions

a. Write the 5 uses of a globe.

.....
.....
.....
.....

b. Paste a map of Madhya Pradesh and fill its districts and division



c. In which division your city is located?

.....

d. Why colors are used in map?

.....
.....
.....

e. What are conventional symbols and why they are useful for us?

.....
.....
.....

f. Write difference between globe and map.

.....

PADMAJA SCHOOL DEWAS/ CLASS 6TH/SUB-SO SCIENCE/WORKSHEET NO-12

1. Give answer to the following questions

a. Draw the picture of a globe and show equator , tropic of cancer. And tropic of Capricorn.

b. Make a list of continents oceans seas and island using globe .

.....
.....
.....
.....
.....

c. Draw conventional symbols for following
Well , habitat, park , wheat crop, cotton crop.

d. From where the ward map had been derived and what is its meaning.

.....
.....
.....
.....
.....

e. Which colour is seen most on the globe and why?

PADMAJA SCHOOL DEWAS/ CLASS 6TH/SUB-SO SCIENCE/WORKSHEET NO-13

1. Give answer in short

a. What is tropic of cancer?

.....
.....

b. What is the tropic of Capricorn?

.....
.....

c. Which is the largest latitudes drawn on the globe and what it is called?

.....
.....

d. What is prime meridian? In to how many parts it divide the earth?

.....
.....

e. Draw a circle showing latitudes, longitudes and indicate poles in it.

2. Fill in the blanks

a. The earth is tiltedon its axis.

b. The point is at the uppermost part of globe is

c. Latitudes in the northern hemisphere.

d. The length of longitudes is

e. The longitudes drawn at the interval of

3. Say true or false.

a. N or S denotes northern or southern latitude.

b. To locate the position of a place we take the help of horizontal lines.

c. The latitude passes through green which observatory near London.

PADMAJA SCHOOL DEWAS/ CLASS 6TH/SUB-SO SCIENCE/WORKSHEET NO-14

1. Pick out the odd one.

- a. Mountain,sea,plateau,plains
- b. Lithosphere,biosphere,atmosphere,solar system
- c. Nitrogen,oxygen,vapoure,co2

2. Give answer of the following

a. Define hydrosphere.

.....
.....

b. Describe percentage of water and land on earth with the help of diagram.

.....
.....

c. In to how many parts in organisms in the biosphere may be broadly divided? Write their name.

.....
.....

d. Who does cutting of trees affect the most?

.....
.....

3. Say true or false

- a. The land is divided into large masses of land is called plateau.
- b. The entire surface of the land is even.
- c. Earth has a large quantity of water.
- d. Sea water is sweet.
- e. The organisms of biosphere divided into 4 parts.

4. Fill in the blanks

- a.means life.
- b. All the realms of the earth are
- c.number of population need more space.

PADMAJA SCHOOL DEWAS/ CLASS 6TH/SUB-SO SCIENCE/WORKSHEET NO-15

1. Fill up the blanks

- a. Land ispercent part of earth.
- b. The gas cover over the earth is called
- c. The area of land surrounded by water on all sides is called.....

2. Give answer of the followings

- a. Define atmosphere.

.....
.....

- b. Describe the percentages of gases in the atmosphere with the help of diagram.

.....
.....

- c. What are plains?

.....
.....

- d. How many species of animals which includes microscopic organisms to large animals?

.....
.....

3. Say true or false

- a. There is a deep relationship between the natural environment and biosphere.
- b. It is not essential that balance of environment should not be disturbed.
- c. The entire range of life is confined to bio zone.
- d. There are 10 million species of animals.
- e. Carbon di oxide is not helpful in the growth of plants.
- f. The night when the total moon is seen is called new moon.

PADMAJA SCHOOL DEWAS/ CLASS 6TH/SUB-SO SCIENCE/WORKSHEET NO-16

1. Circle the odd one.
 - a. Euphrates, Indus, Nile, Kalibangan.
 - b. Lothal, Kalibangan, Dholavira, Bhopal
2. Answer to the following questions
 - a. What do you mean by Mesopotamia?

.....
.....

- b. Which is the largest civilization of the world?

.....
.....

- c. What found in 1922 excavation?

.....
.....

- d. Write any two reasons for the decline of Harappan civilization.

.....
.....

3. Fill up this chart.

Name of civilization	Name of the river

4. Fill in the blanks
 - a. Thecivilization of Africa is the oldest.
 - b. The ancient civilization develop
 - c.means the land between two rivers.

PADMAJA SCHOOL DEWAS/ CLASS 6TH/SUB-SO SCIENCE/WORKSHEET NO-17

1. Answer to the following questions.

a. Which is the oldest civilization?

.....
.....

b. Who found evidences of human civilization in the valley of Himalaya?

.....
.....

c. Write any two characteristic of harappan civilization.

.....
.....

2. Draw diagram

a. Harrapan script

b. Harrapan copper utensils and weapons

c. Stone weapons

3. Fill in the blanks

a. The fourth civilization is the

b. Copper was more.....than hard stone.

c.had an important place in the harrappan civilization.

1. Cross the odd one

- a. Rishi,shresthi,mukhiya,police
- b. Brahman, viashy, kshatriya , sunar

2. Write the answer of the following questions

- a. What do you mean by Aghnya?

.....
.....
.....

- b. Why the drinking of som and sura was discouraged?

.....
.....
.....

- c. In vedic period classification of cast was based on what?

.....
.....
.....

- d. At present which river disappeared of vedic period?

.....
.....
.....

3. Fill in the blanks

- a.system in the Harrappan civilization was unique.
- b. The river.....was the life line of the Harrappan civilization.
- c. The Harrappan people reared cattles along with.....
- d. Harrappan civilization belongs to the
- e. The Harrappans knew the art of

PADMAJA SCHOOL DEWAS/ CLASS 6TH/SUB-SO SCIENCE/WORKSHEET NO-19

1. Give answer to the following questions.

a. What do you mean by Janpada?

.....
.....
.....
.....

b. Who called Jansangh?

.....
.....
.....
.....

c. Paste picture of Vardhman Mahavir and write about their techniques.

.....
.....
.....
.....

d. What do you understand by eight fold path.

.....
.....
.....
.....

2. Fill in the blanks

a. Inthere is mention of many Janpadas.

b.was todays Bundelkhand.

c. The big and powerful Janpada was called

d. The Avanti Mahajanpada was ruled by.....

e. Punch marked coins were used in the.....

PADMAJA SCHOOL DEWAS/ CLASS 6TH/SUB-SO SCIENCE/WORKSHEET NO-20

1. Cross the delete one

- a. Bharat, Avanti, Magadh, Kosala.
- b. Kashi, Vatsa, Anga, Ajatshatru.

2. Fill in the blanks

- a. The founder of the Nanda Dynasty was
- b. The ancient name of Ujjain is
- c. The 24th Tirthankar of the Jain religion was
- d. Goutam Buddha was known asin childhood.

3. Answer these questions

a. Which Janpadas were there in Madhyapradesh in 600BC?

.....
.....
.....

b. Write the name of 16 Mahajanpadas.

.....
.....
.....
.....

4. Say true or false.

- a. The names of the Janpadas were given after the names of the person or family.
- b. Kosal was the most powerful.
- c. Ajatshatru occupied the throne of Avanti.
- d. The biggest enemy of Magadha was Avanti Mahajanpada.

PADMAJA SCHOOL DEWAS/ CLASS 6TH/SUB-SO SCIENCE/WORKSHEET NO-21

1. Fill in the blanks

- a. Ashoka changed after thewar.
- b. The book Indica was written by.....
- c. Shunga dynasty was founded by.....
- d. Chandragupta made a plane with the help of
- e. Bihar was known as.....

2. Give answer to these questions

- a. What inscribed in the form of petrography in all the provinces?

.....
.....
.....
.....

- b. Describe Ashoka's relations with neighbouring countries.

.....
.....
.....
.....

- c. Describe Mourya's art.

.....
.....
.....
.....

- d. What do you mean by Pinjarapol?

.....
.....
.....
.....

3. Fill in the blanks

- a. Chandragupta organized the unsatisfied tribes of.....
- b. was the capital of Mouryan Empire .
- c. Ashoka decided to winand
- d. Ashoka wanted that people of all religion should live

PADMAJA SCHOOL DEWAS/ CLASS 6TH/SUB-SO SCIENCE/WORKSHEET NO-22

1. Give answer in one word.
 - a. When the king expanded the limits of their states these states were called
 - b. Who described the society of moryan empire in India?.....
 - c. Ashoka decided to win which state?.....
 - d. Ashoka shunned war to follow the path of.....
 - e. Indica book written in which language?.....
2. Give answer to these questions
 - a. Which one was the popular language among Brahmi,khorashtri, and aremic.
.....
 - b. When did Ashoka feel great pain and why?
.....
.....
 - c. Describe about the currency of Mouryan period.
.....
.....
.....
 - d. In which areas of Madhyapradesh Ashoka's petrographs,stupas and pillar were found.
.....
.....
3. Fill in the blanks:
 - a. Magasthenese describes about the period of Indian society in his book.....
 - b. Soldiers were paid land as.....
 - c. Ashoka got his messages engraved on shining.....and
 - d. The lion pillar ofnow in the museum.

PADMAJA SCHOOL DEWAS/ CLASS 6TH/SUB-SO SCIENCE/WORKSHEET NO-23

1. Fill in the blanks

- a. Any village , state or country is ait self.
- b. Manyliving closely form a community.
- c. The place ofand area of a community are definite.
- d. Adevelops itself.
- e. Any work done by a community is.....

2. Give answers to these questions.

- a. What do you mean by gram swaraj?

.....
.....
.....
.....
.....

- b. What comities are formed at the village /city as per the regulation of the state or central governments.

.....
.....
.....
.....
.....

- c. In which comities maximum public participation is required today?

.....
.....
.....
.....
.....

3. Say true or false

- a. Public participations does not encourages the people to improve their condition.
- b. The role of the local citizens is very important in community development.

PADMAJA SCHOOL DEWAS/ CLASS 6TH/SUB-SO SCIENCE/WORKSHEET NO-24

1. Give answers to the following questions

a. Who are parts of a community?

.....
.....
.....
.....
.....

b. What does a communities promote?

.....
.....
.....
.....
.....

c. What does change the life style of a community?

.....
.....
.....
.....
.....

d. What were the chief foundations of our Indian society?

.....
.....
.....
.....
.....

2. Fill in the blanks

- a.and communities coming in contact influence each other.
- b. The expansion ofhas influence the development of communities.
- c. Encourages the people to improve their conditions.
- d. A community is agroup.
- e. People developed theirlife on their own despite local adversities.

PADMAJA SCHOOL DEWAS/ CLASS 6TH/SUB-SO SCIENCE/WORKSHEET NO-25

1. Give answers to the following questions

a. What do you understand by clan organization?

.....
.....
.....
.....
.....

b. What are nomadic groups?

.....
.....
.....
.....
.....

c. What do you mean by social organization means “ Arrangement of Social relations” .

.....
.....
.....
.....
.....

d. What is adivasi?

.....
.....
.....
.....
.....

2. Fill in the blanks.

- a. A tribe lives in a certainarea.
- b. Tribal people have a limitedwith the urban society .
- c. Specialhave been made for tribal people.
- d. Every society has a
- e. Every tribe belongs to a