

PADMAJA H.S. SCHOOL / CLASS – 5TH / SUBJECT – ENGLISH / WORKSHEET – 01

Do as directed:-

1. Fill articles:-

- a. ass is braying .
- b. The dog is faithful animal.
- c.Ganga is holy river.
- d. He is honest man.

2. She goes to school every day. (Change into negative)

.....

3. He went to market. (Change into interrogative)

.....

4. The book is on the table. (Find out preposition)

.....

5. Write antonyms of:- good, evening, dirty, enemy, come.

.....

6. Write 5 countable and 5 uncountable nouns.

.....

.....

7. Define nouns with an example.

.....

.....

.....

8. Write v2 and v3 of the following verbs:-ask, blow, abuse, hang, ride.

.....

.....

9. Write 10 sentences about your parents.

.....

.....

.....

.....

.....

.....

.....

.....

.....

.....

PADMAJA H.S. SCHOOL / CLASS – 5TH / SUBJECT – ENGLISH / WORKSHEET –04

1.Fill in the blanks:-

- a. There lived a in a mango tree.
- b. One day kalu proudly said
- c.The pigeons immediately went to

2. Rearrange the jumbled letters and make a meaningful word:-omnag, pllu, lyrpe, siwe.

.....
.....

3.Rewrite using the past(v2) form of the verb given in bracket.

- a.They (send) her a letter yesterday.

.....

- b.Anita (lose) her pen in the class.

.....

4.Fill auxiliaries:-

- a.The Sun not set in the east.
- b.We help our friends.
- c.I Lift this weight.

5.Write any 4 main verb.

.....
.....

6.This bench is made of wood.(find out kind of noun)

.....

7.Write 5 sentence about your neighbour.

.....
.....
.....
.....
.....

8. Write 5 sentence about the sky.

.....
.....
.....
.....
.....

PADMAJA H.S. SCHOOL / CLASS – 5TH / SUBJECT – ENGLISH / WORKSHEET –05

1. Write noun forms of the following words:-

a. rule

b. build

c. gentle

2. Give one word:-

a. It has aerial roots.

.....

b. They live in the banyan tree.

.....

c. A banyan tree is regarded as a

.....

3. Write 5 name of decoration plant.

.....

.....

.....

4. Add prefixes:-

a. able

b. kind

c. possible

5. Make a list of things those are used in indoor games.

.....

.....

6. Write name of your 5 best friends.

.....

.....

7. Write 5 sentences on the faithful dog.

.....

.....

.....

.....

.....

.....

PADMAJA H.S. SCHOOL / CLASS – 5TH / SUBJECT – ENGLISH / WORKSHEET –08

Do as directed:-

1.Fill in the blanks with pronouns:-

- a.We shall invite
- b.The teacher is teaching
- c.We are helping
- d.My parents love

2.Change the tense of following sentences:-

- a.We go to school daily.(simple past)
.....
- b.My friend often comes to my house.(simple future)
.....
- c.Misha reaches here in time.(past continuous)
.....

3.Change sentence into possessive case:-

- a.The hats of ladies.
.....
- b.Clothes of man.
.....
- d.The leg of the dog.
.....
- e.The cave of the lion.
.....

PADMAJA H.S. SCHOOL / CLASS – 5TH / SUBJECT – ENGLISH / WORKSHEET –09

1.Pick out the adjectives:-

a.These are sweet apples.

.....

b.Delhi is a big city.

.....

c.Misha is a thin girl.

.....

d.I have a sharp knife.

.....

e.Hari is a good player.

.....

f.The grapes are sour.

.....

2.Fill in the blanks with missing form of verb:

V1	V2	V3
Weep		
Make		
Write		
	Stood	

3.Change these sentences into negative form:-

a.Can you do it?

.....

b.They can sit here.

.....

c.Mohan is going home.

.....

PADMAJA H.S. SCHOOL / CLASS – 5TH / SUBJECT – ENGLISH / WORKSHEET –10

1. Write 5 outdoor games:-

- a. b.
- c. d.
- e.

2. How many players are there in a cricket team?

.....

3. Select the correct word and fill in the blanks:-

a. The man went to a

(sale / set)

b. I have the movie.

(scene / seen)

c. All the friends on the ground.

(sat / set)

4. Write name of any 5 freedom fighters:-

- a. b.
- c. d.
- e.

5. Fill subject in the following sentences:-

a. is reading newspaper.

b. is a scientist.

c. travels by bus.

d. sets in the east.

e. brush our teeth.

f. go to school daily.

PADMAJA H.S. SCHOOL / CLASS – 5TH / SUBJECT – ENGLISH / WORKSHEET –11

1.How many tense are there in english? Give there names.

.....
.....
.....

2. Identify tense in following sentences:-

a. Manu is going home now.

.....

b.They had finished their work already.

.....

c.Misha threw the ball to me.

.....

3.Change these sentence into interrogative:-

a.We have left this house.

.....

b.The peon has rung the bell.

.....

c.Mother had cooked our breakfast.

.....

4. Write a paragraph about your house and your family members.

.....
.....
.....
.....
.....

PADMAJA H.S. SCHOOL / CLASS – 5TH / SUBJECT – ENGLISH / WORKSHEET –13

1. Write rhyming words of the following :-

a.sway

b.soaked

c.again

d.drop

e.stumble

f.night

g.weary

2. Who is the poet of the poem “Trust in God and do the right” ?

.....

3. Rearrange the words:-

a.krow

b.thaleh

c.bbyho

d.skoob

e.Yananb

f.seert

4. Fill in the blanks:-

a. Let us meet 7'o clock today.

b. It snow here December

c. Mohan has worked here five years.

d. We to school daily.

e. It a hot day today.

PADMAJA H.S. SCHOOL / CLASS – 5TH / SUBJECT – ENGLISH / WORKSHEET –14

1. Write 5 good habits and why they are important :

.....

.....

.....

.....

.....

.....

.....

.....

.....

.....

2. Fill in the blanks:-

- a. We should our hands before and after meals.
- b. Rohit was not feeling
- c. We must have a everyday.
- d. We must use a when we cough or sneeze.

3. Write babies of these animals:-

Cow	
Goat	
Deer	
Dog	
Lion	
Frog	
Hen	
Cat	
Horse	
Buffalo	

PADMAJA H.S. SCHOOL / CLASS – 5TH / SUBJECT – ENGLISH / WORKSHEET –15

1. Write synonyms:-

a. meal

b. litterbin

c. often

d. to take down

e. garbage

2. Write homes of following birds and animals:-

Dog	
Horse	
Bird	
Bee	
Hen	
Tiger	

3. Find out proper noun in each of the following group of words:-

a. tina, book, boat.

.....

b. boy, tajmahal, king.

.....

c. spring, hindu, village.

.....

d. hill, cat, great Britain.

.....

e. you, pink, Bombay.

.....

f. sita, indore, summer.

.....

PADMAJA H.S. SCHOOL / CLASS – 5TH / SUBJECT – ENGLISH / WORKSHEET –16

1.How can we maintain cleanliness around us. Write 10 points.

.....

.....

.....

.....

.....

.....

.....

.....

.....

.....

2.He caught the mouse. (change into plural)

.....

3.There was a lion. (change into negative)

.....

4.Write correct spelling of the following :-

Plaese	
Idia	
Freind	
Leter	
Fingre	
Moeny	
Suny	
Ruote	
llood	
freeg	
breeif	
Cloz	

PADMAJA H.S. SCHOOL / CLASS – 5TH / SUBJECT – ENGLISH / WORKSHEET –17

1. Write v1 form of following verb:-

a.said

b.kept

c.untied

d.learnt

e.called

f.gave

2. Write opposites of the following :-

a.day x

b.old x

c.give x

d.live x

e.strong x

3. Rearrange the spelling :-

a.namtsop

b.daer

c.naiga

d.kcits

e.remraf

4. Define antonyms with 5 examples.

.....

.....

.....

.....

PADMAJA H.S. SCHOOL / CLASS – 5TH / SUBJECT – ENGLISH / WORKSHEET –18

1. Arrange these words in dictionary order :-

Piece, sweet, garden, beak, foolish, fish, colour, day, rat, frog, arrow.

.....
.....
.....

2. Complete the spellings :-

a. pi.....k.....d

b. f..... ..ish

c. b..... ..utif.....l

d. sit..... ..ng

e. pra.....er

f. br.....sh

g. te.....th

h. ni.....ht

i. but.....er

3. Fill in the blanks with preposition

a. She came my house.

b. I want a piece bread.

c. The fox stood the tree.

d. Many birds live this tree.

e. The book is the table.

f. Cat is sitting the table.

g. Pen is the stand.

h. Boys are playing The tree.

PADMAJA H.S. SCHOOL / CLASS – 5TH / SUBJECT – ENGLISH / WORKSHEET –19

1. Use the following words in sentence:-

a. There

.....

b. Some

.....

c. More

.....

d. Their

.....

e. Next

.....

2. Add -ing to following verb:-

a. have

b. live

c. teach

d. respect

3. Write the opposite gender of following:-

a. Uncle

b. Nephew

c. Brother

d. Father

e. Grandfather

f. Milkman

g. King

PADMAJA H.S. SCHOOL / CLASS – 5TH / SUBJECT – ENGLISH / WORKSHEET –20

1. Write the v2 form of the following verbs:-

Has	
Go	
Put	
Bring	

2. Fill in the blanks with question word :-

a..... will you come back?

b..... do you live?

c..... girl is the tallest?

d..... is your name?

3. Change the sentences into plural subject :-

a. I go to school by bus.

.....

b. A child loves sweets.

.....

c. She makes many mistakes.

.....

d. This girl speaks good English.

.....

e. Boy is playing in the park.

.....

f. Bird fly in the sky.

.....

g. Dog is barking.

.....

PADMAJA H.S. SCHOOL / CLASS – 5TH / SUBJECT – ENGLISH / WORKSHEET –21

1.Match the words with their meaning :-

Horrible	Often
Frequently	A particular time of happening.
Soaked	Very bad
Occasion	A large amount
Plenty	Very wet
Business	Light of the Sun
sunshine	Occupation

2.Write 5 diseases caused by mosquitoes.

.....

.....

.....

.....

3.You were busy with the task. (use a question tag)

.....

4.Use the correct form of verb:

..... is a good exercise. (walking /to walk)

5.Write opposite gender of following noun:-

- a.Lady
- b.Mare
- c.Cow
- d.Milkmaid
- e.Hen
- f.Tiger
- g.Dog

PADMAJA H.S. SCHOOL / CLASS – 5TH / SUBJECT – ENGLISH / WORKSHEET –22

1. Write plurals of the following :-

a. Monkey

b. Movie

c. Body

d. Squirrel

2. Write the correct preposition:-

a. The book is the table.

b. The players played the guidance of the captain.

3. Make sentences of:-

a. Wise:

.....

b. Clean:

.....

4. Write 10 sentences about cleanliness.

.....

.....

.....

.....

.....

.....

.....

.....

.....

.....

PADMAJA H.S. SCHOOL / CLASS – 5TH / SUBJECT – ENGLISH / WORKSHEET –24

1.Rearrange the following group of words to make meaningful sentence:-

a.This park beautiful is very.

.....

b.Sweets I love.

.....

c.Brother stamps my collects.

.....

d.An is Tapas boy intelligent.

.....

e.piano Rohini plays the.

.....

2.Give one word:-

a.A woman who practices black magic is a

b.One who has magical power is a

c.To look at something for a very short time

d.A field covered with grass is

e.A place where we keep our motors

3.Complete the sentences by filling in 'a' , 'an', or 'the' :-

a.Copper is useful metal.

b.The guide knows way.

c.Do you see blue sky?

d.You are fool to say that.

e. Ganga is holy river.

PADMAJA H.S. SCHOOL / CLASS – 5TH / SUBJECT – ENGLISH / WORKSHEET –26

1.Change given sentences into negative:-

a.I have done my work.

.....

b.Mira has broken the slate.

.....

c.Arun was in time today.

.....

d.The child is drinking milk.

.....

2.Change the sentence into question:-

a.She wears bangles.

.....

b.John comes late.

.....

c.Lion eat vegetables.

.....

d.We swim in the river.

.....

3.Fill in the blanks with 'do' or 'does' :-

a.Coffee not grow here.

b.I not go to cinema.

c.This tree not give us apples.

d.We not need help.

e.Leaves of many trees not fall in monsoon.

PADMAJA H.S. SCHOOL / CLASS – 5TH / SUBJECT – ENGLISH / WORKSHEET –28

1.From the following group of word take out two words with similar meaning :-

a. foolish, silly, clever, lazy, curious, strange.

.....

b. quiet, tricky, hard, silent.

.....

c. tired, happy, smart, weary, energetic.

.....

d. afraid, terrible, horrified, frightened.

.....

e. speedy, slow, rapid, silly, angry.

.....

2.Write the word that sounds same to the given word:-

a.weight

b.steal

c.prey

d.floor

3.Fill in the blanks with proper article:-

a. cow is a useful animal.

b.London is on Thames.

c.I first meet him year ago.

d.Ceylon is island.

e.Which is longest river in India?

f.Aladdin had wonderful lamp.

g.Let us go to club.

PADMAJA H.S. SCHOOL / CLASS – 5TH / SUBJECT – ENGLISH / WORKSHEET –31

1. Rewrite using pronoun instead of underlined noun :-

a. Radhika is my friend. Radhika is very helpful.

.....

b. The horses are in the field. The horses are grazing.

.....

c. Sahil is a student of our school. Sahil is very intelligent.

.....

d. Rakesh and Mahesh are brothers. Rakesh and Mahesh goes to same school.

.....

2. Fill in the blanks with suitable describing word:-

a. Uma is an girl.

b. That shirt is mine.

c. Yesterday my mother prepared a dinner.

d. Bangalore is a city.

e. Yellow is my colour.

3. Fill in the blanks with preposition :-

a. My uncle lives Mumbai.

b. I go to school bus.

c. The Sun rises the east.

d. Delhi is the capital India.

e. She goes to school bus.

f. She has been absent monday.

g. He was born a small village.

h. The mail train is due 3 pm.

PADMAJA H.S. SCHOOL / CLASS – 5TH / SUBJECT – ENGLISH / WORKSHEET –32

1. Write 4 pair of rhyming words from the poem 'A house, A home' .

.....
.....
.....
.....

2. Write 2 examples of each of these plants:

- a. Tree
- b. Herb
- c. Shrub
- d. Climber
- e. Creeper

3. List 3 situations in which children usually cry.

.....
.....
.....
.....

4. Choose the correct answer among (listen /hear):

- a. Hey john ! can you me?
- b. Do you like to to the music.
- c. Can't you the baby crying.
- d. Please, to the lecture carefully.
- e. Can you the announcement.
- f. I can the waterfall.

PADMAJA H.S. SCHOOL / CLASS – 5TH / SUBJECT – ENGLISH / WORKSHEET –33

1.Fill suitable articles:-

- a.Bring me glass of water.
- b.I have idea.
- c.It was Interesting story.
- d. Tell me joke.
- e..... pyramids are in Egypt.
- f.My mother is good cook.

2.State the kind of sentence from the following:-

a.Can you give me your pen.

.....

b.May God bless you!

.....

c.Close your eyes.

.....

d.How intelligent he is!

.....

3.Write a paragraph about your hobby.

.....
.....
.....
.....
.....
.....
.....
.....

PADMAJA H.S. SCHOOL / CLASS – 5TH / SUBJECT – ENGLISH / WORKSHEET –35

1. Who said to whom:-

a. "He is our neighbour but it doesn't mean that he has a right to disturb us."

.....

b. "What brings you here, lovely children?"

.....

c. "Friends! how can an animal be a good friend of man.?"

.....

2. Fill in the blanks:-

a. Dogs have an power to smell out.

b. Trained animals follow the Given to them.

c. Dogs are the natural of our life and prosperity.

3. Write 5 sentence on how you keep your pet.

.....
.....
.....
.....
.....

4. Observe the birds in your surroundings. Write name of any 5.

.....
.....
.....

PADMAJA H.S. SCHOOL / CLASS – 5TH / SUBJECT – ENGLISH / WORKSHEET –37

1. Unscramble the words and write the correct in blank:

a. on skomnign

b. etren

c. dnaerg

d. llup

e. kpeeotu

f. cosled

2. Write v2 and v3 of the following verb:-

Come		
Creep		
Break		
blow		

3. Fill in the blanks with is, are, was, were, has, have.

a. There some bad news for you.

b. The boy's trousers torn.

c. They a house in shimla.

d. One of her cousin killed in the battle.

4. Choose the odd word in each of the following groups:-

a. cotton, iron, steel, zinc.

.....

b. table, chair, lunch, book.

.....

c. frock, trousers, shirt, belt.

.....

d. chalk, board, duster, book.

.....

PADMAJA H.S. SCHOOL / CLASS – 5TH / SUBJECT – ENGLISH / WORKSHEET –38

1.Fill in the blanks:-

- a.The are of different kinds.
- b.The roof of a kachcha house is like a
- c.Houses provides a to living beings.
- d.Family member always to each other.

2. Visit a construction site nearby , note down the material used there.

.....

.....

.....

.....

.....

3.Add –ing to following verb:-

- a.swim
- b.write
- c.skip
- d.run
- e.apply
- f.lie

5.Change these sentence into plural subjects:-

- a.She write a letter.
.....
- b.Rita make very good tea.
.....

PADMAJA H.S. SCHOOL / CLASS – 5TH / SUBJECT – ENGLISH / WORKSHEET –40

1. Use the correct form of verb (buying/ to buy) :-

My father wants a house in Bhopal.

.....

2. Combine the sentence using 'who'

The boys worked hard. The boys got very good marks.

.....

3. Change into interrogative

The teacher asked if that was the way to sit.

.....

4. Change into passive

The cow gives milk.

.....

5. Fill in the blanks with the given words :

(the railways, dog, exist, feeling of sadness)

a. Grief means

b. Heaven and hell both Right here on the earth.

c. Tapas was angry with the

d. 'From the railway carriage' is a poem about

6. Write 5 sentences about your classmates

.....

.....

.....

.....

.....

Padmaja HS School Class V Subject: EVS **Worksheet-01**

1. Think and answer the questions:

a. Have you noticed that during the cold season you can't see any lizard in the house? Where do you think they have gone?

.....
.....
.....
.....
.....

b. Do some animals understand your language? Which ones?

.....
.....
.....
.....

c. Have you noticed that sometimes singers put their hands on their ears when they sing? Why do you think they may be doing this?

.....
.....
.....
.....

2. Write the names of five things whose smell you like and five whose smell you don't like-

I like the smell of-	I don't like the smell of-

Padmaja HS School Class V Subject: EVS **Worksheet-02**

1. Here are some names of animals given. Classify whose ears are bigger than ours and whose not. Also find one animal from the list which does not have ears.

Elephant, rabbit, rat, ant, ant, cow, buffalo, dog, mosquito, ox, snake, monkey, tortoise

Animals with bigger ears	Animals with smaller ears	Animal without ear

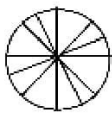
2. Pick the odd one out:

- a. Ear, nose, skin, hand
- b. Family, man, woman, child
- c. Elephant, cow, deer, tiger
- d. Lizard, snake, cat, turtle
- e. Fish, fox, octopus, crocodile

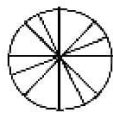
3. Write the following-

- a. The name of a bird which has eyes in front of its head-
- b. The name of some birds which have eyes on either side of the head-
- c. The name of a bird which repeats the sound of human-
- d. The animal that sleeps in the cold season-
- e. The animal which can live both on land and in water-

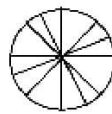
4. The clock is divided into 24 hours time. Show the sleeping hours of the given animals-



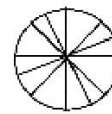
Cow 4 hours



Giraffe 6 hours



Python 8 hours



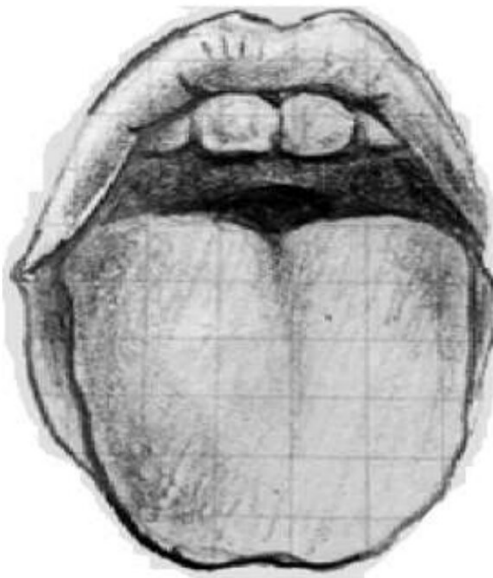
Sloth 12 hours

Padmaja HS School Class V Subject: EVS **Worksheet-04**

1. What are the following animals killed for?
 - a. Elephant-
 - b. Tiger-
 - c. Snake-
 - d. Crocodile-
 - e. Fish-
2. Identify the animals-
 - a. That takes away your food if you are eating in an open ground-
 - b. That is killed for its skin-
 - c. That looks like a bear and spends 17-18 hours in sleep-
 - d. That has very hard shell-
 - e. That has a long nose known as trunk-
3. Snakes have two hollow teeth called When it bites theenters the person's body through it.
4. Answer the following questions:
 - a. What are endangered animals?
.....
.....
.....
.....
 - b. Why is tiger in danger?
.....
.....
.....
.....
 - c. Why do people kill wild animals?
.....
.....
.....
.....

Padmaja HS School Class V Subject: EVS **Worksheet-06**

1. Answer in one word-
 - a. The process of breaking down of food in simple form which the body can use-
 - b. The tiny bumps present on the tongue.
 - c. The liquid in our mouth that helps in digestion.
 - d. A muscular bag in our body that churns food.
2. Look at the picture of the tongue given below and mark the parts of the tongue where you can taste sweet, bitter, salty and sour-



3. Fill in the blanks:
 - a. The temperature of our stomach is about
 - b. Glucose gives usto the body.
 - c.help us to chew food.
 - d. Normal heart beat isper minute.
 - e. Normal body temperature is

Padmaja HS School Class V Subject: EVS **Worksheet-07**

1. Write the kind of taste of each of the following:

- | | |
|------------------|------------------|
| a. Bitter guard- | f. strawberry- |
| b. Tamarind- | g.- Neem leaves- |
| c. Lemon- | h- raw mango- |
| d. Chips- | i- chocolate- |
| e. Rasgulla- | j- French fries- |

2. Complete the words-

- a. S E T
- b. T N U
- c. E E G Y
- d. G U C E
- e. S G R
- f. S N S

3. Answer the following questions:

a. Why should we chew our food properly?

.....
.....
.....
.....

b. How is digestion affected when we are sad?

.....
.....
.....
.....

c. What is the function of saliva in our mouth?

.....
.....
.....
.....

Padmaja HS School Class V Subject: EVS **Worksheet-08**

1. Given below is some food items name. write in the blanks what you can do to preserve them-
- a. Ripe mango-.....
 - b. Potato-.....
 - c. Tomato-.....
 - d. Ginger-.....
 - e. Milk-.....
 - f. Raw mango-.....
 - g. Raw banana-
 - h. Green pea-

2. Match the following-

- | | |
|----------------------|--|
| A | B |
| a. Milk - | i. wrap it in a damp cloth |
| b. Vegetables- | ii. Keeping them in a dry place |
| c. Cooked rice- | iii. Keeping them in a refrigerator |
| d. Green coriander- | iv. By boiling them. |
| e. Onion and garlic- | v. putting it in a bowl and keeping the bowl in a container with some water. |

3. Given below are reasons of spoiling of food as well as methods to preserve them.. Encircle the reasons which spoil food and make a rectangle on the methods to preserve food-

Moisture drying air freezing temperature

Cooking Boiling canning micro-organism

Unhygienic conditions frying improper storage

4. Write 6 food items which are good to taste but are not considered healthy-

.....

.....

.....

Padmaja HS School Class V Subject: EVS **Worksheet-09**

1. Name any two seeds-

- a. Scatter by bursting-
- b. Scatter by water-
- c. Seeds used as spices-.....
- d. Seeds used as food grains-.....
- e. Seeds used as pulses-.....

2. Give reasons-

- a. Seeds kept in the refrigerator do not sprout.
.....
.....
.....
.....
- b. Farmers leave space while sowing seeds.
.....
.....
.....
.....
- c. Seeds kept in an air-tight container do not sprout.
.....
.....
.....
.....

3. Write any 5 seeds that we eat.

.....
.....

4. Write any 5 seeds that we do not eat.

.....
.....

Padmaja HS School Class V Subject: EVS **Worksheet-11**

1. Write true or false. Also write correct answer if any sentence is false-

a. A puffed up puri will float in water.()

.....

b. Dead sea has the saltiest water of all seas.()

.....

c. Oil can easily mix with water.()

.....

d. Salt is made from sea water.()

.....

e. Sugar and salt do not quickly dissolve in water.()

.....

2. Fill in the blanks-

a. Thecan be used to make salt.

b. Onsugar gets quickly dissolved in water.

c. A plastic bottle cap floats in

d. Water evaporates on

e. The boiling point of water isCelsius.

3. Answer the following questions-

a. What is a step well? Why is it called so?

.....

.....

.....

.....

b. List two causes of water shortage.

.....

.....

.....

.....

Padmaja HS School Class V Subject: EVS **Worksheet-12**

1. Tick (✓) the correct answer-

a. Which of the following does not dissolve in water?

- I Sugar II Salt III Mud

b. Which of the following dissolves in water?

- I wood II Jaggery III Dust

c. Which of the following floats on water?

- I A plastic Sharpener II A chain III A Stone

d. Which of the following sinks in water?

- I A boat II A nail III A stick

e. Which type of water is not suitable for drinking?

- I River water II Sea water III well water

2. How would you separate-

a. Salt from water-.....

.....

b. Chalk powder from water-.....

.....

c. Mud from water-.....

.....

3. Does oil dissolve in water? Why?

.....

.....

.....

.....

4. What is the specialty of dead sea?

.....

.....

.....

.....

.....

Padmaja HS School Class V Subject: EVS Worksheet-13

1. Fill in the blanks with appropriate answer-

- a. Salt can be obtained fromwater.
- b. Movement launched by Mahatma Gandhi for salt was
- c. Gandhi ji undertook afrom Ahmedabad to
in Gujarat.
- d. The soap case floats in water while the soap
- e. Dead sea has thewater of all the seas.

2. Give reasons-

- a. Puris float on oil while frying.-.....
.....
.....
- b. A nail made of Iron sinks in water-.....
.....
.....
- c. A soap case floats in a bucket of water while a cake of soap sinks-.....
.....
.....

3. Answer the following questions-

- a. Why do clothes dry faster on a sunny day than on a cloudy day?
.....
.....
.....
- b. Sort the following items in the given categories:

Items- towel, handkerchief, jute bag, silk cloth, bed sheet, sweater, foam sheet, sponge piece

Category

Quick dry	Late dry

Padmaja HS School Class V Subject: EVS **Worksheet-14**

1. Encircle the things that dissolve in water:

Sugar Lemon juice Oil Fruit juice Pepsi salt
Chalk powder mud Ghee Mishri (sugar lumps) milk

2. Group the following objects:

Marble, Eraser, wood, Pencil, key, coin, cork, lid of a bottle, gold bangle, shuttle cock, safety pin, polythene bag, wooden flute, mobile phone, needle, . slipper, football

Objects that float	Objects that sink

3. Why are wells drying up these days?

.....
.....
.....
.....
.....

4. Write two ways in which we can conserve water.

.....
.....
.....
.....
.....

Padmaja HS School Class V Subject: EVS **Worksheet-15**

1. Fill in the blanks:

- a. Mosquitoes lay eggs inwater.
- b. The has to be tested to find out if the patient has malaria or not.
- c.spreads malaria.
- d. Jaggery, Amla and green leafy vegetables are rich in
- e. Very small green plants that are found around the watery spots are called

2. Tick the food items which contain iron-



Jaggery



Potato



Banana



Amla



Apple



Spinach



Peanut



Cashew nut

3. What should we do to control mosquitoes breeding?

.....

.....

.....

.....

.....

.....

4. How can we protect ourselves from mosquito bite?

.....

.....

.....

.....

Padmaja HS School Class V Subject: EVS Worksheet-16

1. Some jumbled sentences are given below showing how the flies spread diseases. Arrange them in sequence by writing 1,2,3,4 etc in the boxes-

- a. They pick disease causing agents (microbes) from there.
- b. We consume such food.
- c. Flies sit on garbage and other waste products.
- d. Microbes enter our body and cause disease.
- e. Then they sit on our food.

2. Write true or false. If any sentence is false write the correct answer-

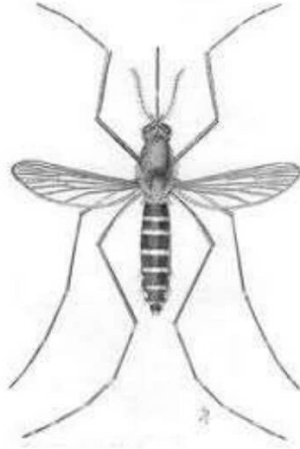
- a. Haemoglobin increases in our blood if we eat iron rich food.()
.....
- b. Mosquitoes lay eggs in fresh water.()
.....
- c. Malaria is more common in winter season.()
.....
- d. Malaria can't be cured.()
.....

3. Answer the following questions:

- a. What are algae?
.....
.....
.....
- b. What are the effects of anaemia on children?
.....
.....
.....
.....

Padmaja HS School Class V Subject: EVS Worksheet-17

1. A diagram of a mosquito is given below. Name the various parts of body. Also tick (✓) the part which you think the mosquito uses for sucking blood-



2. Study the report given below carefully and answer the following questions-

CLINICAL PATHOLOGY REPORT		
Central government health scheme		
		15/09/2007
NAME/नाम: Aarti Patel	AGE/आयु : 12 years	sex/स्त्री/पुरुष: Female
Diagnosis/रोग की पहचान: Anaemia(अनीमिया)		
Haemoglobin/हीमोग्लोबिन: 10.5 gm/dl	Normal range/ नार्मल रेंज: 12 to 16 gm/dl	
Pathologist		

- a. What is the normal range of a healthy girl's haemoglobin?
- b. What diseases was the girl suffering from?
- c. What was the haemoglobin level of the girl?

Padmaja HS School Class V Subject: EVS Worksheet-18

1. Write the names of the diseases caused by mosquitoes and flies-

Diseases by flies	Diseases by mosquitoes

2. Fill the missing letters to make meaningful words-

- a. H M G O B N
- b. A A M A
- c. M L R A
- d. D G U
- e. M O U T O

3. Answer the following questions:

a. What should we eat to increase haemoglobin or iron in our blood?

.....
.....
.....

b. What is a microscope?

.....
.....
.....

c. Where and when are algae commonly seen?

.....
.....
.....

d. What is baby mosquito called?

.....

Padmaja HS School Class V Subject: EVS Worksheet-19

1. Fill in the blanks:

- a. The Mt. Everest is calledin Nepal.
- b.was the director of the adventure course.
- c.became the first Indian woman to climb Mt. Everest.
- d. Khondonbi spoke onlylanguage.
- e. The Himalaya mountains are mostly covered with

2. Tick the food items that are preferable during mountaineering-

- | | |
|----------------------------------|-------------------------------|
| a. Pizza () | e. Glucose biscuit () |
| b. Jaggery () | f. Burger () |
| c. Hot chocolate milk () | g. Chana () |
| d. Dosa () | h. Oranges () |

3. Give reason-

a. Sangeeta could not talk to khondonbi even once.

.....
.....

b. They were all given vitamin C tablets and hot chocolate milk with breakfast.

.....
.....
.....

c. Mountaineers carry oxygen cylinder with them while doing mountaineering.

.....
.....
.....
.....

Padmaja HS School Class V Subject: EVS Worksheet-20

1. Fill in the blanks :

- a. On 23rd May, 1984 Bachendripal climbed
- b. The height of Mt. Everest is about
- c. Tekla village was at a height ofmetres.
- d. Sangeeta hadon her feet.
- e. Mt. Everest is the highest peak of the

2. Write true or false. Also write the correct answer if ant sentence is false.

- a. There is a camp fire on the first day of the camp.()
.....
- b. A group walks ahead of the group. ()
.....
- c. There is no discipline in a camp. ()
.....
- d. It is difficult to walk on the snow. ()
.....
- e. Bachendripal was the first Indian woman to go on the Moon. ()
.....

3. Answer in one sentence each-

- a. Where is Nehru institute of mountaineering located?
.....
- b. Who was the guide of Bachendripal?
.....
- c. How many minutes did Bachendripal spend on the peak of Mt. Everest?
.....
- d. Who is Bachendripal?
.....
.....

Padmaja HS School Class V Subject: EVS Worksheet-21

1. Tick the correct answer:

a. What is the most important responsibility of a leader?

- 1. To punish whoever made a mistake. ()
- 2. To remain in front of the group. ()
- 3. To keep everyone under strict command. ()

b. Why was a drain dug around the tent?

- 1. To keep away wild animals. ()
- 2. To collect waste water. ()
- 3. To make the surrounding more beautiful. ()

2. Give reasons-

a. No one was ready to step into a river. ()

.....
.....
.....

b. Sangeeta felt a special kind of happiness when she came out of the river.

.....
.....
.....

3. What do you think why people go to adventure?

.....
.....
.....
.....
.....

4. Write the names of any four mountaineering equipments.

.....
.....

Padmaja HS School Class V Subject: EVS Worksheet-22

1. Write true or false. Also write the correct answer if a sentence is false.

a. Golkunda fort has very thin walls. ()

.....

b. Cannon is a big gun. ()

.....

c. The fort had fountains on the roof. ()

.....

d. Only sultan lived in the fort. ()

.....

e. There are many places inside the fort. ()

.....

2. Using the clues given below guess the word.

a. A subject in which we study about. - H S T Y

b. It is used to be full of water. - F T

c. A group of soldiers. - A Y

d. A place where antique items are kept. - M M

3. Short answer question:

a. Which sultan lived in Golkunda fort?

.....

b. How far is Fateh Darwaza from Mahal Taramati?

.....

c. What does the map of Golkunda fort indicate?

.....

.....

Padmaja HS School Class V Subject: EVS Worksheet-23

1. Fill in the blanks with correct directions-

When we stand facing the rising sun, we are looking towards

Behind us is thewhere the sun sets. On the left hand side is the

.....direction and the right hand points to the

2. Write true or false. Also write the correct answer if a sentence is false-

a. Mashak is a leather bag used for carrying water. ()

.....

b. We should write names on the historical monuments. ()

.....

c. Much before 1200 AD the fort was made of mud. ()

.....

d. The fort had metallated pipes to carry water to different places in the palace.()

.....

3. Answer the following questions:

a. Name the things that ensured the security of the fort?

.....

.....

.....

b. Why is a small gate made in a big gate?

.....

.....

.....

c. What kind of weapons was used in this war?

.....

.....

.....

Padmaja HS School Class V Subject: EVS Worksheet-24

1. Tick the correct answer:

a. Where is the Golkunda fort located?

- 1 Delhi 2 Mumbai 3 Hyderabad 4 Kolkata

b. Why were big holes made in the bastions?

- 1 To attack the enemy without being seen 2 To get fresh air
3 to escape through them 4 To enjoy scenery around the fort

2. Fill in the blanks-

- a.is a big gun.
b. The outer walls of the fort has bastions.
c.bombs cause a lot of destructions.
d. One of the famous forts of Chhatrapati Shivaji is

3. Answer the following questions:

a. How would the fountains have worked?

.....
.....
.....

b. Why were bastions made in the fort walls?

.....
.....
.....

c. What arrangements would have been made in the building for air and light?

.....
.....
.....
.....

4. Name any 5 famous forts of India.

.....
.....

Padmaja HS School Class V Subject: EVS Worksheet-25

1. Name the following-

- a. The model of the earth-.....
- b. The vehicle that takes people to space-.....
- c. An American woman astronaut who created world record for the longest space flight by a woman-
- d. Sunita's friend who died in a spacecraft accident-.....
- e. The first man to step on the moon-.....
- f. The first Indian who had been to space-.....

2. Fill in the blanks-

- a. One who goes to space is called an
- b. Division of land on the earth is done by us into
- c.was Sunita's friend.
- d.part on the globe is ocean.
- e. Sunita Williams wentaway from the earth in spaceship.

3. Answer the following question-

a. What is a shooting star?

.....
.....
.....
.....

b. Why do we see stars mostly at night?

.....
.....
.....
.....

Padmaja HS School Class V Subject: EVS Worksheet-26

1. Name any 5 heavenly objects found in space.

- a. d.
- b. e.....
- c.

2. Answer in one word/words-

- a. Natural satellite of the earth-.....
- b. Centre of the solar system-.....
- c. The only planet having life-.....
- d. The force which pulls everything back on land-.....
- e. The hottest planet in the solar system-.....

3. Give reasons-

- a. Astronauts have to wear special suit when they go to space.
.....
.....
.....
- b. A ball thrown up comes down.
.....
.....
.....
- c. We see the blue colour most on a globe.
.....
.....
.....

4. Write names of any 5 astronauts.

.....
.....
.....

Padmaja HS School Class V Subject: EVS Worksheet-27

1. The rates of petrol and diesel in Delhi are given below. Look at the table and answer the following questions-

Oil	Rate of per litre in 2008	Rate of per litre in 2011
Petrol	₹ 50	₹ 66
Diesel	₹ 35	₹ 41

Questions

- a. In three years the rate of petrol went up by
 - b. In three years the rate of diesel increased by
 - c.was the difference in the rates of petrol and diesel in the year 2008.
 - d. The rate of petrol at present in our town isper litre.
 - e. The rate of diesel at present in our town isper litre.
2. Answer the following questions:
- a. What is the full form of CNG?
.....
 - b. What is the full form of LPG?
.....
 - c. Name the products obtained from petroleum.
.....
.....
.....
 - d. Name the minerals that are exhaustible.
.....
.....
.....

Padmaja HS School Class V Subject: EVS Worksheet-28

1. Fill in the blanks-

- a. Vehicles run on
- b. Petrol is found deep down the
- c. Vehicles stop atfor fuel.
- d. We get kerosene, diesel, petrol etc from
- e. We needto pump petrol out and clean it.

2. What is the advantage of using CNG over diesel/petrol?(write in points)

.....

.....

.....

.....

.....

3. List the different types of fuel to cook food.

- a.
- b.
- c.
- d.
- e.

4. Besides oil, what else is found deep inside the earth?

.....

.....

.....

5. Why does LPG smell so strong?

.....

.....

Padmaja HS School Class V Subject: EVS Worksheet-29

1. What kind of problems shall we face if the number of vehicles keeps on increasing on the road?

.....
.....
.....
.....
.....

2. How can we save petrol/diesel? Suggest some ways.

.....
.....
.....
.....
.....

3. What vehicle will you take if you have to go to following places-

- a. To your next door neighbour-.....
- b. To a shop in your colony-.....
- c. To market about 3 km away from your house-.....
- d. To Indore-.....
- e. To Mumbai-.....
- f. To America-.....
- g. To the moon-.....

4. What are the disadvantages of using wood as cooking fuel?

.....
.....
.....
.....

Padmaja HS School Class V Subject: EVS Worksheet-30

1. Fill in the blanks-

- a. Changpa tribes has onlypeople.
- b. Donga is a type offound in Srinagar.
- c., a cold desert, gets very little rainfall.
- d.means a place where very few people live.
- e. Theis the most important part of the people of Leh.

2. Name the following:

- a. Some old houses have a special type of window which comes out of the wall.
.....
- b. The doors and windows of old houses in Srinagar have beautiful arches called
.....
- c. The well decorated beautiful boats on the dull lake
.....

3. Fill letters to form meaningful words:

- a. C H N P S
- b. P S H I N
- c. P Z Z
- d. H O S B T
- e. S H K R

4. Write any 5 sentences on Kashmir-

.....

.....

.....

.....

.....

.....

Padmaja HS School Class V Subject: EVS Worksheet-31

Q1. Answer the following questions

- a. Why do the changphas graze their goats at higher and colder places?

- b. Why do the houses on the mountains have sloping roofs?

- c. Why do people in Leh eat dry fruits and vegetables in winter?

Q2. Name the following-

- a. Some old houses have a special type of window which comes out of the wall_____
- b. The doors and windows of old houses in Srinagar hae beautiful arches_____
- c. The well decorated beautiful boats on the Dal lake_____

Q3. Fill in the blanks-

- a. CH__N__P__S
- b. P__SH__IN__
- c. P__ZZ__
- d. HO__S__B__T

Padmaja HS School Class V Subject: EVS Worksheet-32

Q1. Fill in the blanks—

- a. One Pashmina shawl is made after almost _____ hours of weaving.
- b. The tent made of Yak hair in which Changpas live is called a _____.
- c. The beautiful and well decorated boats on the Dal lake are called _____.
- d. The door and windows of old houses have beautiful _____

Q2. Write :

- a. Two places famous for boat houses.

- b. The meaning of the word Changthang.

- c. The states does one have to pass during the journey of Mumbai from Delhi by road.

Q3. Give reasons-

- a. During winter , Tashi and his family lives on the ground floor.

- b. Weaving of Pashmina shawl take so much time.

Padmaja HS School Class V Subject: EVS Worksheet-33

Q1. Fill in the blanks

- a. If there is no rain, crops can fail and there can be a _____
- b. Shortage of water and food can result in _____
- c. Excessive rain fall can lead to _____
- d. On 26th January 2001 an earthquake occurred in the kutch area of _____

Q2. Answer the following:

- a. What is an earthquake?

- b. What is drought?

- c. What types of difficulties are forced by people during floods?

- d. What kind of damage can an earthquake cause?

Q3. Complete the blanks

- a. E_RT__ UA____E
- b. DR__UG__T
- c. F_O_D
- d. C__CL__N__
- e. ST__M

Padmaja HS School Class V Subject: EVS Worksheet-34

Q1. Name some musical instruments which are played by blowing air in them.

Q2. Write true or false.

- a. Warm air is light and rises up.
- b. We use a microscope to listen the sound of a heart beat.
- c. A popcorn seller fans the burning coal to increase the air supply.
- d. Cold air is heavy and comes down.

Q3. Tick the correct answer-

- a. Suppose you are given hot khichdi to eat. How will cool down without blowing air from your mouth?
 - 1. By mixing cold water into it.
 - 2. By spreading it over the plate.
 - 3. By putting ice cubes into it.

Q4. Answer the following-

- a. Why do people blow air on their spectacles before cleaning them?

- b. Why do we blow on hot potatoes?

Padmaja HS School Class V Subject: EVS Worksheet-35

Q1. Who is the father of the nation? Write few sentences about him.

Q2. What was Mahatma Gandhi's favourite bhajan?

Q3. Why do people do different kinds of jobs?

Q4. Tick the correct answer .

Why do you think the sweepers and scavengers need to do their work?

- a. They do not get any other work.
- b. They get good money for doing their work.
- c. They believe that work is worship and have no shame in doing any kind of work.

Q5. Who was Dr Bhim rao baba sahib Ambedkar? What did he became famous for?

Padmaja HS School Class V Subject: EVS Worksheet-36

Q1. Write names of five women player with their sports.

	PLAYER	SPORTS

Q2. Fill in the blanks-

- It is important to _____ each member of team.
- A good team is one that is _____.
- _____ was the coach of Afsana's team.
- _____ between the members is the strength of team.
- People today expect that _____ can play different games.

Q3. Name any two sports that are played as a team.

Q4. List any five benefits of playing sports.

Padmaja HS School Class V Subject: EVS Worksheet-37

Q1. Choose the correct options

- a. Why do you think girls are generally not allowed to play freely like boys?
 1. Girls are weak and not fit to play games.
 2. Parents fear for the safety of their daughter.
- b. Which is the most important requirement for winning while playing in a team?
 1. Lots of money and good equipment.
 2. Playing for the team and not for oneself.
- c. By which quality players are generally recognized?
 1. By their talent and ability to play.
 2. By their caste.

Q2. Fill in the blanks

1. Players are recognized by their _____ rather than by their caste or economic status.
2. Ranking and _____ competition should be avoided amongst players.
3. Even if every player is excellent the team can _____ a match.

Q3. Answer these questions

1. With what spirit should a person play a game?

2. Where is Nagpada?

Padmaja HS School Class V Subject: EVS Worksheet-38

Q1. Write true or false

- a. In towns there are taps but not enough water.
- b. There are plenty of trees in towns and the air is fresh and clean.
- c. Roofs made of tin keep the houses cool in summer.

Q2. Fill in the blanks

- a. _____ is the main occupation of villagers.
- b. A big wall built across the river is called a _____.
- c. Jatrya was born in _____ village.

Q3. Sort the odd one out

- a. Kho-kho, kabaddi, chess, ludo
- b. Race, lawn tennis, snake and ladder, badminton.
- c. Race, weightlifting, relay, hurdle.

Q4. Answer these

- a. How the village life is different from that of cities?

- b. Why did Jatrya and his family leave Sinduri and migrate to Mumbai?

Padmaja HS School Class V Subject: EVS Worksheet-39

Q1. Tick the correct answer

- a. Jatrya feels alone in Mumbai, even when he is surrounded by people. Why?
1. Nobody talks to him or his family.
 2. Everybody is busy in his own work.
 3. He is considered an outsider and not welcomed in Mumbai.
 4. He cannot speak the language of the local people.

Q2. Answer the following

- a. How did Jatrya suffer in Sinduri?

- b. How does displacement affect the lives of the people?

Q3. Write True or False

- a. In towns people falling sick unlike in villages.
- b. Children from villages are welcomed in school.
- c. Houses in towns have more space then houses in the villages.

Q4. Fill in the blanks

1. Empty bottles and newspapers are sold to the_____.
2. People in the village live like a_____.

Padmaja HS School Class V Subject: EVS Worksheet-40

Q1. Give three differences of Khedi village and Jatrya' village.

Q2. Answer the MCQ

1. Tick the profession adopted by Jatrya Bhai in Mumbai.
a. Gold smith b. labourer c. repair fish nets.
2. To which village Jatrya Bhai belong to ?
a. Sinduri b. Dholpur c. Khedi
3. Which village Jatrya shifted after leaving Khedi village?
a. Gopal puram b. Sundari c. Sinduri

Q3. Match the major water project(dams) with river on which they are built

DAMS	RIVER
HIRAKUD DAM	KRISHNA
KRISHNARAJA SAGAR DAM	NARMADA
AMARKANTAK	MAHANADI
BHAKRA NANGAL	KAVERI
TEHRI DAM	SATLUJ
ALAMATTI	GANGA

Padmaja H.S School, Dewas Class- 5th Subject-Hindi Worksheet no. 01

1. रिक्त स्थान भरो-

१. हमारा कर्म हो
२. हमारी आत्मा में देना
३. सदा हो सेवा
४. के वास्ते मरना
५. दिलों में का सागर

2. सही जोड़ी बनाओ-

- | | |
|-----------|------------|
| १. अँधेरा | १. सेवा |
| २. कर्म | २. शुद्धता |
| ३. आत्मा | ३. उजाला |
| ४. वतन | ४. चर |
| ५. सेवक | ५. जीना |

3. असमान शब्दों पर गोला लगाइए -

१. सागर - सरिता , जलधि , समुद्र
२. वतन - देश , स्वदेश , विदेश
३. कर्म - कार्य , काज , आलस
४. पेड़ - वनस्पति , वृक्ष , तरु
५. सूर्य - भास्कर , तरुण , रवि

4. दो-दो पर्यायवाची शब्द लिखिए

१. नेत्र -
२. प्रभु-

5. निम्नलिखित प्रश्नों के उत्तर दो-

१. प्रार्थना का अर्थ लिखिए।
२. अपने वतन का नाम लिखिए।
३. दैनिक रूप से आप किसकी आराधना करते हैं?

Padmaja H.S School, Dewas Class- 5th Subject-Hindi Worksheet no.02

1. सही विकल्प पर निशान लगाओ-

१. बहा दो गंगा- क) प्रेम की ख) घृणा की ग) लालच की
२. दिल में आकर के जगा देना- क) गुस्सा ख) ज्योति ग) डर
३. हमारा धर्म हो - क) मेवा ख) रवा ग) सेवा

2. विलोम शब्द लिखिए-

पवित्र	प्रेम
धर्म	जीना
जय	साफ़
सच	बलवान
अपने	प्रशंसा

3. शब्दार्थ लिखिए-

- वतन -
परमात्मा -
सेवक- -
घृणा- -
पवित्र- -

4. निम्नलिखित प्रश्नों के उत्तर दो-

१. सेवा से आप क्या समझते हैं?

.....
.....

२. अपने वतन पर पाँच वाक्य लिखिए।

.....
.....
.....
.....

३. अपने देश से जुड़े पाँच पड़ोसी देशों के नाम बताइए।

.....
.....

४. भारत देश की राजधानी क्या है?

५. म.प्र की राजधानी क्या है?

Padmaja H.S School, Dewas Class- 5th Subject-Hindi Worksheet no.03

1. सही जोड़ी बनाओ-

- | | |
|------------|----------|
| १. हिम्मत | १. समूह |
| २. समुदाय | २. खुशी |
| ३. उत्साह | ३. साहस |
| ४. अभाव | ४. बढ़ाई |
| ५. प्रशंसा | ५. कमी |

2. रिक्त स्थान भरो-

१. मानव की दो मूलहोती है।
२. दिल से करने पर मन खिल उठता है।
३. आपकीमाँगने पर आपका मन फूल जाता है।
४. "धनी" का विलोमहै।
५. "रात" का एक पर्यायवाची है।

3. शुद्ध वर्तनी लिखो-

- | | |
|----------|----------|
| हरदय - | उत्साह - |
| विसतरत - | परकट - |
| परान - | |

4. शब्दार्थ लिखिए-

- | | |
|---------|--------------|
| तरुण - | मोह - |
| परिधि - | प्रोत्साहन - |

5. निम्नलिखित प्रश्नों के उत्तर दो-

१. तरुण कौनसी सभा में गया था?

.....
.....

२. व्यक्ति को किस बात के लिए अपने मन को रोकना चाहिए?

.....
.....
.....

Padmaja H.S School, Dewas Class- 5th Subject-Hindi Worksheet no.04

1. सही या गलत लिखो-

१. तरुण जन्मदिन की सभा में गया था
२. तरुण भाषण में तीन वाक्य नहीं बोल पाया
३. तरुण ने अपने मित्र की हिम्मत बढ़ाई
४. मानव की दो मूल प्रवृत्तियाँ होती हैं
५. विद्यार्थी का भाषण सबको अच्छा लगा

2. एक शब्द में उत्तर दो-

१. अपने आप पर विश्वास करने वाला -
२. दुःख में डूबा हुआ -
३. जो कभी न मरे -
४. दूसरों पर उपकार करने वाला -
५. जो नाटक, फिल्मों में अभिनय करता हो -

3. विलोम शब्द लिखिए-

- | | |
|--------------|------------|
| १. प्रशंसा - | ३. संभव - |
| २. मोह - | ४. सज्जन - |

4. वाक्य पूरे कीजिए-

१. गाय घास
२. सोनू पतंग
३. बच्चे मैदान में

5. निम्नलिखित प्रश्नों के उत्तर दो-

१. साहित्यिक सभा पर पाँच वाक्य लिखिए।

.....

.....

.....

.....

.....

२. व्यवहार कुशलता के कोई पाँच गुण लिखिए।

.....

.....

.....

३. सभा कितने प्रकार की होती है? कोई पाँच के नाम लिखिए।

Padmaja H.S School, Dewas Class- 5th Subject-Hindi Worksheet no.05

1. एक शब्द में उत्तर दो-

- सुभद्रा कुमारी चौहान का जन्म कब हुआ था?
- सुभद्रा कुमारी चौहान की मित्र कौन थी?
- सुभद्रा कुमारी चौहान का विवाह किसके साथ हुआ था?
- सुभद्रा कुमारी चौहान ने किस आंदोलन में भाग लिया था?
- सुभद्रा कुमारी चौहान की पुत्री का क्या नाम था?

2. असमान शब्दों पर गोला बनाइए-

१. सुभद्रा कुमारी चौहान , महादेवी वर्मा , महेश सक्सेना
२. प्रगति , उन्नति , असफलता, सफलता
३. बुद्धि, ज्ञान, विवेक , नासमझ

3. निम्नलिखित प्रश्नों के उत्तर दो-

१. सुभद्रा जी की दो कविताओं के नाम लिखिए

.....
.....

२. सुभद्रा जी ने किसके अनुरोध पर कहानियाँ लिखी

.....
.....

4. शब्दों को उचित क्रम में जमाकर सार्थक वाक्य बनाइए-

1. रहे घोड़े है दौड़

.....

2. मेरा है घर ये

.....

3. जन्मदिन राहुल है का आज

.....

4. बहुत बरसात जोरो की हुई रात कल

.....

5. नेहा मेहमानों खाना रही परोस है को

.....

Padmaja H.S School, Dewas Class- 5th Subject-Hindi Worksheet no.06

1. रिक्त स्थान भरो-

१. सुभद्रा जी का विवाहके साथ हुआ।
२.को गांधीजी की मृत्यु का समाचार मिला।
३. ये साहस एवंकी प्रतिमूर्ति थी।
४. दूसरी बार सुभद्रा जी विधान सभा सीट के चुनी गईं।
५. सुधा का विवाहसे हुआ।

2. पंक्तियों को पूरा करो-

बुंदेलों हरबोलों के मुँह

.....

खूब लड़ी मर्दानी वह तो

.....

3. लिंग परिवर्तित कर वाक्य पुनः लिखिए-

१. मामी घर जा रही है -.....
२. यह मेरे दादा है -.....
३. लड़का चिल्ला रहा है -.....
४. मोरनी नाच रही है-.....
५. पिताजी आराम कर रहे हैं -.....

4. निम्नलिखित प्रश्नों के उत्तर दो-

जलियाँवाला बाग कांड के बारे में पाँच वाक्य लिखिए

.....
.....
.....
.....
.....

कोई पाँच महिलाओं के नाम लिखिए जिन्होंने भारत के स्वतंत्रता संग्राम में हिस्सा लिया था

.....
.....
.....

Padmaja H.S School, Dewas Class- 5th Subject-Hindi Worksheet no.07

1. सही विकल्प चुनकर लिखिए-

- क) पावन गंगा जलकहलाता है (अमृत / विष)
ख) कश्मीर तिलक लगाती है का (कुमकुम/ केशर)
ग) ताजमहल में स्थित है (श्रीलंका/भारत)
घ) भारत के उत्तर मेंपर्वत है (हिमालय / अरावली)
ड) कश्मीर की राजधानीहै (पहलगाम/ श्रीनगर)

2. निम्नलिखित वाक्यों में से विशेषण छाँटिए:

- | | |
|--------------------------|-----------------------------|
| १. आम पीले है । | ६. रजनी समझदार लड़की है। |
| २. बाल काले है । | ७. आसमान नीला है । |
| ३. यह पेड़ बहुत ऊँचा है। | ८. जामुन बहुत स्वादिष्ट है। |
| ४. तुम बहुत नटखट हो। | ९. यह कहानी रोचक है। |
| ५. यह चित्र सुंदर है । | १०. यह रास्ता पथरीला है । |

3. संज्ञा के स्थान पर सर्वनाम का उपयोग कीजिए:

१. राम पुस्तक पढ़ रहा है।
२. वीणा खेल रही है।
३. बच्चों शोर मचा रहे है।
४. राहुल को आज देवास बुला लो ।
५. राज और रानू यहाँ आ रहे है।

4. निम्नलिखित प्रश्नों के उत्तर दो-

क) कश्मीर के बारे में पांच वाक्य लिखिए ।

.....

.....

.....

.....

.....

ख) भारत देश की कोई एक ऐतिहासिक जगह के बारे में पांच वाक्य लिखिए ।

.....

.....

.....

Padmaja H.S School, Dewas Class- 5th Subject-Hindi Worksheet no.08

1. रिक्त स्थान भरो-

१. भारत में ही है
२.का जगमग दीप जलाया है
३. सत्य अहिंसा घर घर जगाती है
४. का देश यही है
५. भारत ने हीका पाठ पढ़ाया है

2. शुद्ध वर्तनी लिखो-

- | | |
|----------|-------------|
| १. रिषी | ४. सवादिष्ट |
| २. अभरत | ५. आहिनसा |
| ३. जयोति | ६. अमरित |

3. शब्दार्थ लिखिए-

१. अमृत-
२. उत्थान -
३. अलख -

4. पाँच क्रियाओं के नाम लिखिए

- | | |
|---------|---------|
| 1. | 4. |
| 2. | 5. |
| 3. | |

5. भारत के श्रेष्ठ पाँच ऋषि-मुनियों के नाम लिखिए

1.
2.
3.
4.
5.

6 संज्ञा के प्रकार लिखिए

.....

.....

.....

.....

Padmaja H.S School, Dewas Class- 5th Subject-Hindi Worksheet no.09

1. सही जोड़ी बनाओ-

- | | |
|-------------|--------------|
| १. आकाश | १. मान्यताए |
| २. बरसात | २. इंद्रधनुष |
| ३. पौराणिक | ३. मौसम |
| ४. सूर्य की | ४. जामुनी |
| ५. रंग | ५. किरणे |

2. निम्नलिखित वाक्यों में से विशेषण छाँटिए:

१. गुलाब की खुशबू मोहक है
२. वह बहुत सुंदर है
३. राजा बहुत निष्ठुर था
४. इंदौर बड़ा शहर है
५. यह घड़ा बहुत वजनी है

3. विलोम शब्द लिखिए-

- | | |
|----------|----------|
| आकाश - | भयभीत - |
| प्रकाश - | धीमा - |
| रंग - | समझदार - |

4. "उप" उपसर्ग लगाकर कोई पांच शब्द बनाइए।

5. इंद्रधनुष में कितने रंग होते हैं? सभी के नाम लिखिए

- | | | | |
|----|---|---|---|
| 1. | 3 | 5 | 7 |
| 2. | 4 | 6 | |

6. रंगों के महत्व पर पांच वाक्य लिखिए

.....

.....

.....

.....

.....

.....

Padmaja H.S School, Dewas Class- 5th Subject-Hindi Worksheet no. 10

1. सही विकल्प छाँटकर लिखिए-

१. प्राकृतिक घटना है- क) ट्रेन दुर्घटना ख) बाढ़
२. इंद्रधनुष में रंग होते हैं- क) सात ख) छः
३. विद्यार्थी को किसने उत्तर दिए- क) प्रिंसिपल ख) गुरुजी ग) सुनील घ) सुमन
४. "देव" का विलोम है- क) मानव ख) दानव
५. " जो सब कुछ जनता है" क) सर्वज्ञ ख) कृतज्ञ

2. निम्न शब्दों में से प्रत्यय छाँटिए-

- क) सफलता
- ख) मानवता
- ग) गुणत्व
- घ) महत्व
- ङ) मिठाईवाला

3. निम्न प्रकार के वाक्य बनाइए-

१. सकारात्मक -
२. नकारात्मक-
३. प्रश्नवाचक-

4. सर्वनाम की परिभाषा उदाहरण सहित लिखो।

.....

.....

.....

5. इंद्रधनुष के रंगों को किस प्रकार याद रखा जा सकता है

.....

.....

.....

6. इंद्रधनुष कब और कैसे बनता है?

.....

.....

.....

Padmaja H.S School, Dewas Class- 5th Subject-Hindi Worksheet no. 11

1. सही गलत छाँटिए-

१. कुछ करना हो तो समय का ध्यान रखो
२. श्रम ही वैभव है
३. शंकराचार्य मात्र 25 वर्ष जीवित रहे
४. पिता का प्रश्न मधुरा से था
५. एक मिनट में तो ट्रेन छूट जाती है

2. शब्दार्थ लिखिए-	3. पर्यायवाची शब्द लिखिए-
१. झल्लाना -	१. वैभव
२. आयु-	२. समय-
३. भविष्य -	३. साल-
४. वर्ष-	४. श्रम -
५. वैभव -	५. पिता -

4. पंक्तियों को पूरा करो-

"काल करे सो आज कर

पल में परले होगी ,

5. प्रश्नों के उत्तर दीजिए-

१. समय के महत्व के बारे में पाँच वाक्य लिखिए।

.....

.....

.....

.....

.....

.....

२. विवेकानंद के बारे में पाँच वाक्य लिखिए।

.....

.....

.....

.....

.....

.....

Padmaja H.S School, Dewas Class- 5th Subject-Hindi Worksheet no.12

1. रिक्त स्थान भरिए-

१. एक मिनट आया ।
२. काल करे सो कर ।
३. उस दिन सबको देखने जाना था ।
४. पिताजी बार-बारको देख रहे थे ।

2. वाक्य सही क्रम में लिखिए-

१. चूहे कूद रहे हैं पेट में

.....

२. न मिलना आनंद कार्य में

.....

३. समय पर पूरे करे अपने कार्य

.....

४. मन हमारा प्रसन्नता भर गया से

.....

3. अर्थ लिखकर वाक्यों में प्रयोग कीजिए-

१. नाक सिकोड़ना-

.....

२. मजा किरकिरा होना-

.....

4. शब्द में से उपसर्ग अलग कीजिए-

१. उदार -

२. उपकार-

5. प्रश्नों के उत्तर दीजिए-

१. इस पाठ से आपको क्या शिक्षा मिली । 20 शब्दों में लिखिए ।

.....

.....

.....

२. समय पर लिखी कोई कविता लिखिए ।

.....

.....

Padmaja H.S School, Dewas Class- 5th Subject-Hindi Worksheet no.13

1. सही जोड़ी बनाइए-

- | | |
|-----------|----------------------|
| १. नालपुर | १. जाल |
| २. चौमासा | २. खुशी |
| ३. आनंद | ३. इकट्ठा |
| ४. एकत्र | ४. गाँव |
| ५. शिकंजा | ५. चार माहों का समूह |

2. निर्देशानुसार कीजिए-

वचन बदलिए	विलोम शब्द लिखिए
गाँववाला -	उत्साह -
बीमारी -	स्वागत -
सड़क -	फायदा -
क्यारी -	विजय -
परिभाषा -	सुंदर -

3. पर्यायवाची शब्द की परिभाषा लिखिए ।

.....
.....
.....
.....

4. प्रश्नों के उत्तर दीजिए-

- पुल किसकी मदद से बना ?

.....
.....

- गाँव में पढ़ा लिखा व होशियार कौन था ?

.....
.....

- गंदे पानी के प्रभाव से कौन-कौन सी बीमारियाँ होती हैं ? नाम लिखिए ।

.....
.....
.....

Padmaja H.S School, Dewas Class- 5th Subject-Hindi Worksheet no.14

1. सही विकल्प छाँटिए-

१. उद्घाटन के दिन सजाया-

अ. पुल को आ. घर को इ. गाँव को

२. पुल का नाम था -

अ. मेहनत पुल आ. श्रम पुल इ. सहयोग पुल

३. उद्घाटन हेतु निवेदन किया -

अ. हाकिम से आ. मंत्री से इ. जिलाध्यक्ष से

2. असमान शब्द पर गोला बनाइए-

१. पुल सेतु बाँध नदी

२. बच्चा युवा बुजुर्ग महिला

३. कागज किताब कलम डमरू

3. निम्नलिखित मुहावरों का वाक्यों में प्रयोग कीजिए-

१. अकल बड़ी की भैंस-

.....

२. एक अनार सौ बीमार-

.....

३. ऊंट के मुँह में जीरा-

.....

4. प्रश्नों के उत्तर दीजिए-

१. गाँव का पुल बनाना जरूरी क्यों था?

.....
.....
.....
.....

२. पुल बनाने से क्या क्या लाभ होते हैं। पाँच वाक्यों में बताइए

.....
.....
.....
.....
.....

Padmaja H.S School, Dewas Class- 5th Subject-Hindi Worksheet no.15

1. एक वाक्य में उत्तर दीजिए-

१. गाँव में बीमारी का इलाज कौन करता था?

.....

२. नालपुर कहाँ बसा हुआ था?

.....

३. पुल का उद्घाटन करने में कौन-कौन शामिल था?

.....

४. गाँव में पढ़ा लिखा कौन था?

.....

५. हाकिम को क्या बीमारी हुई थी?

.....

2. शुद्ध वर्तनी लिखो-

शरमदान

शरमिक

स्वीकति

इस्थान

परवर्तन

आग्या

3. संज्ञा के स्थान पर सर्वनाम लिखिए-

१. सीता गाना गाती है -

२. राम खेलता है -

३. बच्चे मैदान में खड़े हैं -

४. राधा और नेहा यहीं आ रही हैं -

4. "त्व" प्रत्यय लगाकर तीन शब्द बनाइए।

.....

5. आपके मोहल्ले/ कॉलोनी / क्षेत्र में कौन-कौन सी सुविधाएँ उपलब्ध हैं? नाम लिखिए

.....

.....

.....

.....

.....

.....

Padmaja H.S School, Dewas Class- 5th Subject-Hindi Worksheet no.16

1. रिक्त स्थान भरिए-

१. मस्तक पर शुभ लगा दूँ
२. धागों का पहना दूँ
३. के कोमल धागो में
४. बहना तेरीपर आंच न आने दूँगा

2. क्रिया छाँटकर लिखिए-

१. हम खेल रहे हैं।
२. सीता नृत्य कर रही है।
३. राजू तेज दौड़ता है।
४. रानी पढ़ रही है।

3. पाँच योजक चिन्ह वाले शब्द लिखिए।

.....

4. पाठ में आए 5 संज्ञा शब्द लिखिए।

.....

5. विशेषण की परिभाषा एवं उदाहरण दीजिए।

.....

6. प्रश्नों के उत्तर दीजिए-

रक्षाबंधन कविता किसके द्वारा लिखी गई है ?

.....

रक्षाबंधन का त्यौहार आप किस तरह मनाते हैं ? बताइए।

.....

Padmaja H.S School, Dewas Class- 5th Subject-Hindi Worksheet no.17

1. सही जोड़ी बनाइए-

- | | |
|-------------------------|-----------|
| १. चित्तौड के महाराणा | भाई-बहन |
| २. दिल्ली के बादशाह | कर्मवती |
| ३. चित्तौड की रानी | साँगा |
| ४. चित्तौड पर आक्रमण | हुमायूँ |
| ५. रक्षाबंधन का त्यौहार | बहादुरशाह |

2. वाक्यांश के लिए एक शब्द लिखिए-

१. जो रक्षा करे-
२. जो कभी न डरे-
३. जिसे प्यास लगी हो-
४. जो कभी न मरे-
५. जो ईश्वर में आस्था रखे-

3. निर्देशानुसार वाक्य बदलिए-

१. रमा ने राम को राखी बाँधी । (प्रश्नवाचक)
२. श्याम कल इंदौर जाएगा । (निषेधवाचक)

4. प्रश्नों के उत्तर दीजिए-

१. रक्षाबंधन पर्व से जुड़ी कोई एक पौराणिक कथा 50 शब्दों में लिखो ।

.....

.....

.....

.....

.....

.....

.....

२. रक्षाबंधन का महत्व बताइए ।

.....

.....

.....

Padmaja H.S School, Dewas Class- 5th Subject-Hindi Worksheet no.18

1. सही अथवा गलत लिखिए-

१. बालक नरेंद्र पशु-पक्षियों से प्यार करते थे
२. विश्वनाथ दत्त कोलकाता हाई कोर्ट में वकील थे
३. विवेकानंद जी का नाम सुरेंद्र था ।
४. विवेकानंद जी की माँ का नाम कल्याणी था ।

2. निम्नलिखित शब्दों के दो अर्थ बताइए-

१. वार -
२. पास -
३. सदा -
४. कल -

3. विशेषण छाँटिए-

- | | |
|----------------|-------------------|
| १. महान पुरुष | ४. ताज़ी सब्जियाँ |
| २. सच्ची भक्ति | ५. सुंदर फूल |
| ३. कठोर वचन | ६. घना वन |

4. योजक चिन्ह लगाइए-

१. गंगा और जमुना
२. माता और पिता
३. रात और दिन

5. प्रश्नों के उत्तर दीजिए-

१. नरेंद्र को किन-किन विषयों में रुचि थी ?

.....
.....
.....
.....

३. नरेंद्र जी किस वजह से परमहंस जी से मिले?

.....
.....
.....
.....

Padmaja H.S School, Dewas Class- 5th Subject-Hindi Worksheet no.19

1. सही जोड़ी बनाइए-

- | | |
|---|------|
| १. नरेंद्र जी का जन्म - | 1893 |
| २. विवेकानंद जी की
हाई स्कूल परीक्षा - | 1888 |
| ३. उत्तराधिकारी बने - | 1878 |
| ४. भारत भ्रमण - | 1863 |
| ५. अमेरिका गए - | 1886 |

2. शब्दार्थ लिखिए-

१. रंक
२. पर्व
३. भ्रमण
४. शताब्दी
५. वर्ष

3. पर्यायवाची शब्द लिखिए-

१. खोज -
२. संकल्प -
३. साल-

4. प्रश्नों के उत्तर दीजिए-

१. नरेंद्र के माता-पिता का नाम क्या था ?

.....
.....

२. विवेकानंद जी ने किस कॉलेज में दाखिला लिया ?

.....

३. विवेकानंद जी का भारत की संस्कृति को विदेशों में प्रचारित करने में क्या योगदान था?

.....
.....
.....
.....

Padmaja H.S School, Dewas Class- 5th Subject-Hindi Worksheet no.20

1. रिक्त स्थानों की पूर्ती कीजिए-

- १.सबका कल्याणसे किया जा सकता है ।
२. नरेंद्र जी 1893 मेंगए ।
३. स्वामी जी की शिष्या का नाम था ।
४. वर्ष में नरेंद्र जी की मृत्यु हो गई ।
५. स्वामीजी ने की व्यापकता पर प्रकाश डाला ।

2. विलोम शब्द लिखिए

पूर्व	सुगम
अनुत्तीर्ण	पवित्र
प्रकाश	अपना

3. क्रिया शब्द रेखांकित कीजिए

- स्वामी समाधि पर बैठे हैं ।
श्याम खेतों को पानी दे रहा है ।
बच्चे मैदान में खेल रहे थे ।
सभी आपस में बातचीत कर रहे हैं ।

4. निम्नलिखित शब्दों का वाक्यों में प्रयोग कीजिए-

- अवस्था-
समाधि-
कल्याण-
परोपकारी-

5. प्रश्नों के उत्तर दीजिए

1. विवेकानंद जी ने अपना अपना शरीर कब त्याग दिया ?

.....

2. अमेरिका में भाषण देते हुए विवेकानंदजी ने सभा को क्या कह कर संबोधित किया

.....

.....

Padmaja H.S School, Dewas Class- 5th Subject-Hindi Worksheet no.21

रिक्त स्थान की पूर्ति कीजिए-

1. सबका कल्याण से किया जा सकता है ।
2. नरेंद्र जी सन 1893 में देश गए ।
3. स्वामी जी की शिष्या का नाम था ।
4. नरेंद्र जी की मृत्यु वर्ष में हुई ।
5. स्वामी जी नेकी व्यापकता पर प्रकाश डाला ।

विलोम शब्द लिखिए-

उत्तीर्ण -

अंतिम -

पूर्व -

ऊंचाई -

दृश्य

क्रिया शब्द को रेखांकित कीजिए-

1. स्वामी समाधि पर बैठे हैं ।
2. श्याम खेतों में पानी दे रहा है ।
3. बच्चे दौड़ रहे हैं ।
4. पंछी आकाश में उड़ते हैं ।

प्रश्नों के उत्तर दीजिए-

1. विवेकानंद जी के चरित्र के कोई तीन गुण बताइए ।

.....

.....

.....

.....

.....

2. अमेरिका में भाषण देते समय विवेकानंद जी ने सभी को क्या कहकर संबोधित किया?

.....

.....

.....

Padmaja H.S School, Dewas Class- 5th Subject-Hindi Worksheet no.22

सही विकल्प चुनिए-

- | | | |
|---|---------------|-----------|
| 1. कॉलेज की प्रिंसिपल किस दर्शन के प्रेमी थे- | 1. अमेरिका | 2. भारतीय |
| 2. नरेंद्र जी की माता का नाम था- | 1. भुवनेश्वरी | 2. शालिनी |
| 3. नरेंद्र जी के पिता हाई कोर्ट में थे- | 1. जज | 2. वकील |
| 4. नरेंद्र जी की आरंभिक शिक्षा हुई- | 1. आश्रम | 2. घर |

वाक्य बनाइए-

1. आश्रम-

.....

2. आस्था-

.....

पाठ में आए पांच संज्ञा शब्द लिखिए-

.....

.....

.....

वर्तनी शुद्ध कीजिए-

उततीरन -

प्रतयक्ष-

प्रश्नों के उत्तर दीजिए-

1. विवेकानंद जी भाषण देने कहां गए थे?

.....

.....

2. विवेकानंद जी की इच्छा क्या थी?

.....

.....

3. विवेकानंद के गुरु का नाम क्या था?

.....

Padmaja H.S School, Dewas Class- 5th Subject-Hindi Worksheet no.23

एक वाक्य में उत्तर दीजिए-

1.स्वामी जी का जन्म किस पर्व पर हुआ?

.....

2.स्वामी जी का जन्म किस शहर में हुआ?

.....

3.स्वामी जी का जन्म किस परिवार में हुआ?

.....

4.स्वामी जी के पिता को कौन-कौन सी भाषा का ज्ञान था?

.....

5.नरेंद्र जी का स्वाभाव कैसा था?

.....

“इक” प्रत्यय लगाकर 3 शब्द बनाइए-

.....

एक वाक्य में उत्तर दीजिए-

1. जो किसी से नहीं डरे

2. जो कम बोलता हो

वाक्य पढ़कर अर्थ लिखिए-

1. आज वार है ।

2. वार से बचो ।

सर्वनाम की परिभाषा उदाहरण सहित लिखिए?

.....

.....

.....

प्रश्नों के उत्तर दीजिए-

कोई दो महान ग्रंथों के नाम लिखिए ।

.....

कोई भी पांच महापुरुषों के नाम लिखिए ।

.....

.....

सही अथवा गलत लिखिए-

- 1.हमको अच्छी बातें सुनना चाहिए ।
- 2.झरना सब की प्यास बुझाता है ।
- 3.मौसम ठीक समय पर आते हैं ।
- 4.सूरज चांदनी बांटता है ।
- 5.जुगनू अंधकार मिटाता है ।

विलोम शब्द लिखिए-

बुझाना-

उजाला-

अंधकार-

वचन बदलिए-

- 1.वह पढ़ रहा है (बहुवचन)
- 2.हम खेल रहे हैं (एकवचन)

वाक्य पूर्ण कीजिए-

- 1.सदा चांद
- 2.सूरज संग

वचन की परिभाषा दीजिए ।

.....
.....
.....

प्रश्नों के उत्तर दीजिए-

गर्मी सर्दी और बरसात में खाए जाने वाले फलों की सूची बनाइए ।

सर्दी.....

गर्मी.....

बरसात.....

अंधरे को मिटाने के लिए किन किन वस्तुओं का प्रयोग किया जाता है?

.....

Padmaja H.S School, Dewas Class- 5th Subject-Hindi Worksheet no.25

एक वाक्य में उत्तर दीजिए-

- 1.पिता ने बेटे को क्या कार्य दिया ?
- 2.पहली बार लड़के को पैसे किसने दिए ?
- 3.बहन को पिताजी ने कहा भेजा ?
- 4.पिता ने सिक्का कहाँ फेंकने को कहा ?
- 5.अपनी पहली कमाई लड़के ने कैसे की ?

दो तत्सम शब्द लिखिए जो वर्कशीट में नहीं आए हो ।

पाठ में से 3 विशेषण लिखिए -

वर्तनी शुद्ध कीजिए-

1. दरबल-
2. ततपरता-

शब्दार्थ लिखिए-

1. परिश्रम
2. संध्या

तद्भव शब्द लिखिए

1. वृक्ष
2. कार्य

प्रश्नों के उत्तर दीजिए

- 1.परिश्रम का महत्व समझाइए ।

- 2.सफलता का अर्थ अपने शब्दों में लिखिए ।

- 3.सफल व्यक्ति बनने के लिए किन किन बातों का ध्यान रखना आवश्यक है?

Padmaja H.S School, Dewas Class- 5th Subject-Hindi Worksheet no.26

1. सही जोड़ी बनाइए

दुर्बल	हवाले
धनी	अग्नि
क्रोध	पतला
ज्वाला	निर्धन
सुपुर्द	गुस्सा

2. शब्दों को सही क्रम में जमा कर वाक्य बनाइए

दुर्बल लड़का था बेपरवाह
पूछा बेटे ने रात पिता से
सूरज उदय पर्वत के पीछे से हुआ

3. पर्यायवाची शब्द लिखिए

कारोबार	अभ्यास
नदी	धरती

4. विलोम शब्द लिखिए

स्त्री	सीधा
गहरा	सरल

5. प्रश्नों के उत्तर दीजिए

अपनी कमाई का अर्थ 20 शब्दों में समझाइए ।

.....

.....

.....

कोई घटना जिसने आपको परिश्रम का महत्व समझाया हो 30 शब्दों में लिखिए ।

.....

.....

.....

.....

Padmaja H.S School, Dewas Class- 5th Subject-Hindi Worksheet no.27

I. सही अथवा गलत लिखिए-

1. ध्यानचंद को हॉकी का जादूगर कहते हैं ।
2. ध्यानचंद जी का परिवार झांसी में रहता है।
3. ध्यानचंद मिलिट्री टीमों का मैच देखने गए ।
4. ध्यानचंद भारतीय टीम के कप्तान थे ।
5. ध्यानचंद को आर्मी में भर्ती किया गया ।

II. शब्दार्थ लिखिए

मेजर

आर्मी

III. रेखांकित शब्दों के पर्यायवाची शब्द लिखिए

हमें परिश्रम करना चाहिए

समय गुजर जाएगा

IV. विलोम शब्द लिखिए

स्फूर्ति

उत्साह

पराजय

V. प्रश्नों के उत्तर दीजिए

ध्यान चंद जी के खेल में कौन सी बातें महत्वपूर्ण थी पांच वाक्य लिखिए:-

.....

.....

.....

.....

.....

हॉकी के बारे में पांच वाक्य लिखिए

.....

.....

Padmaja H.S School, Dewas Class- 5th Subject-Hindi Worksheet no.28

1. सही जोड़ी बनाइए

ध्यानचंद	पद्मा भूषण
1928	ध्यानचंद का जन्म
1932	ओलंपिक प्रतियोगिता
1905	जर्मनी के बर्लिन
भारत सरकार	हाँकी का जादूगर

2. वाक्य में विलोम शब्द लिखिए

ध्यानचंद ने मैच हारा

मैच शुरू हो गया

3. तत्सम तद्भव शब्द अलग कीजिए

आँसू अश्व गज हाथी अश्रु द्वार दरवाज़ा

तत्सम	
तद्भव	

4. प्रश्नों के उत्तर दीजिए |

व्यायाम से क्या-क्या लाभ होते हैं?

.....
.....
.....

सूर्य नमस्कार में कुल कितने व्यायाम होते हैं नाम लिखिए |

.....
.....
.....

Padmaja H.S School, Dewas Class- 5th Subject-Hindi Worksheet no.29

I. एक वाक्य में उत्तर दीजिए -

1. ध्यानचंद जी किस खेल में रुचि रखते थे?

.....

2. ध्यानचंद जी का जन्म कहां हुआ?

.....

3. ध्यानचंद जी के पिताजी क्या करते थे?

.....

4. ध्यानचंद जी को गोल करने के लिए किसने कहा?

.....

5. किस मैच के बाद ध्यानचंद जी को हॉकी का जादूगर कहा गया?

.....

II. वाक्यांश के लिए एक शब्द लिखिए |

1. जिसका ध्यान एक जगह हो -

2. तपस्या करने वाला -

III. सही क्रम में जमाकर वाक्य बनाइए-

1. कहा जाता है जादूगर हॉकी का ध्यानचंद को |

.....

2. भाई ध्यानचंद जी के थे प्रसिद्ध खिलाड़ी हॉकी के |

.....

IV. प्रश्नों के उत्तर दीजिए :-

एक प्रसिद्ध खिलाड़ी के बारे में पांच वाक्य लिखिए जो इस पाठ में नहीं आया हो |

.....
.....
.....
.....
.....
.....
.....
.....

Padmaja H.S School, Dewas Class- 5th Subject-Hindi Worksheet no.30

I. रिक्त स्थानों की पूर्ति कीजिए।

1. फाइनल मैच के बीच हुआ था।
2. भारतीय टीम ने मैच खेले।
3. स्वयं मैदान में आए।
4. सेना में रहते हुए वह के पद तक पहुंचे।
5. खेल में जरूरी है।

II. असमान शब्दों पर गोला लगाइए।

हाँकी क्रिकेट बेडमिंटन नृत्य
वन जंगल कानन सरिता

III. कु और सु उपसर्ग लगा कर दो- दो शब्द बनाइए।

.....
.....
.....
.....

IV. प्रश्नों के उत्तर दीजिए

1. ओलंपिक में होने वाले 5 खेलों के नाम बताइए।

.....
.....
.....

2. तीन इंडोर और तीन आउटडोर खेलों के नाम बताइए।

.....
.....
.....
.....

प्र. १ रिक्त स्थानों की पूर्ति करो-

१. रहिमन धागा का
२. जहाँ काम आवै
३. चन्दन व्यापत नहीं
४. रहिमन देखि को
५. जुरे परिजाये

प्र. २ पंक्ति का अर्थ लिखिए-

रहिमन धागा प्रेम का, मत तोरो चटकाय

प्र. ३ असमान शब्द पर गोला लगाइए-

१. दीर्घ	बड़ा	विशाल	नजदीक
२. खामोश	चुप	शांत	उमंग
३. पेड़	जंगल	वन	कानन
४. पानी	अग्नि	जल	अम्बु

प्र. ४ पाठ में आये कोई दो तद्भव शब्द लिखिए-

.....

प्र.५. कवि रहीम की पाँच कविताओं के नाम लिखिए

.....

.....

.....

प्र. ६ रहीम जी का जन्म कब व कहाँ हुआ था?

.....

.....

प्र. १ सही जोड़ी मिलाइए-

- | | |
|----------------|-------------------|
| १. कुम्भमेला | पुराणों के अनुरूप |
| २. समुद्र-मंथन | गौरवपूर्ण |
| ३. मेला | अमृत |
| ४. संस्कृति | सांस्कृतिक कप |

प्र. २ शब्दार्थ लिखिए-

१. विस्तृत -
२. अर्चना -
३. मंथन -
४. पर्व -

प्र. ३ लिंग बदलिए-

१. राम मेले में गया
२. रीना घूमने गई
३. मोर नाचने लगा
४. लड़के खेल रहे हैं
५. बालक रोता है

प्र. ४ "इक" प्रत्यय लगाकर तीन शब्द बनाइए-

.....

प्र. ५ "अभि" उपसर्ग लगाकर तीन शब्द बनाइए-

.....

प्र. ६ समुद्र-मंथन की कथा संक्षेप में लिखिए

.....
.....
.....
.....
.....
.....
.....

प्र. १ रिक्त स्थानों की पूर्ति कीजिए-

१. मेले में देशभर के प्रसिद्ध आते हैं
२. मेले हमारी एकता के प्रतिक है
३. हमारे यहाँ से मेले लगते लगते हैं
४. विभिन्न के अपने-अपने मेले लगते हैं

प्र २ पाठ में से पाँच-पाँच संज्ञा और विशेषण शब्द लिखिए

संज्ञा	विशेषण

प्र.३ शब्दों के बीच योजक चिन्ह लगाइए

१. पुण्य और लाभ
२. प्यार और स्नेह

प्र. ४ वाक्य बनाइए-

१. मेला-.....
२. रौनक-.....

प्र. ५. कुम्भ-मेला कब और किन-किन शहरों में लगता है?

.....

.....

.....

.....

प्र. ६. हमारे देश में मनाये जाने वाले दस पर्वों की सूची बनाइए-

.....

.....

.....

.....

प्र. १ एक वाक्य में उत्तर दीजिए-

१. अमृत पाने की लड़ाई किन-किन के बीच हुई?

.....

२. कुंभ के मेले में कितनी जगह लगते हैं?

.....

३. मेले में किनके उपदेश सुनने को मिलते हैं?

.....

४. कौन-कौन सी नदियाँ नर्मदा में मिलती हैं? कोई दो के नाम बताइए

.....

५. भगोरिया पर्व पर कौनसा ढोल बजाते हैं?

.....

प्र. २ "प्रयाग" को किस नाम से जाना जाता है?

.....

प्र. ३ वाक्य में वचन बदलकर पुनः लिखिए-

१. हम सब मेला घूमने गए ।

२. जंगल में मोर नाच रहा है ।

३. वह कुछ बोल रहा है ।

४. जानवर घाट पर पानी पी रहा है ।

प्र. ४ मध्य प्रदेश में व्यावसायिक मेले किन-किन शहरों में लगते हैं? पाँच नाम लिखिए ।

.....

.....

.....

.....

.....

प्र. ५ भगोरिया मेला क्या होता है? यह किन-किन शहरों में लगता है?

.....

.....

.....

.....

.....

.....

.....

प्र. १ सही अथवा गलत लिखो-

१. कुम्भ-मेले को 'सिंहस्थ' कहते हैं
२. कुम्भ-मेला 12 वर्ष में लगता है
३. सांस्कृतिक मेले प्रायः नदियों के किनारे होते हैं
४. नदियों में स्नान करने से पाप लगता है
५. मध्य प्रदेश सुक्ष्म रूप में फैला है

प्र. २ वचन बदलिए-

१. महात्मा -
२. विद्वान -
३. नदी -
४. मेला -
५. शहर -

प्र. ३ लिंग बदलकर लिखिए-

१. दादा -
२. माता -
३. कवि -
४. दूल्हा -
५. नर -

प्र. ४ क्षिप्रा नदी मध्य प्रदेश के किन-किन शहरों में बहती है?

.....

.....

.....

प्र. ५ जिन स्थानों पर कुम्भ-मेला लगता है वहां की नदियों के नाम लिखिए ।

.....

.....

.....

प्र. ६ निम्नलिखित शब्दों का वाक्यों में प्रयोग करे

१. आलसी -
२. परिश्रम
३. ऋतू -
४. स्नान -
५. सुहावना -

प्र. 1 सही जोड़ी-

- | | |
|------------|---------|
| १. सुगंध | स्वच्छ |
| २. घड़ियाल | महक |
| ३. त्यागी | सौंपना |
| ४. अर्पण | बलिदानी |
| ५. अमल | घंटा |

प्र. २ पाँच ऐसे शब्द लिखिए जिनमे चन्द्रबिन्दु लगाया जाता है ।

.....
.....

प्र. ३ शुद्ध वर्तनी लिखिए-

१. उजवल -
२. प्रतयक्ष -
३. निरमल -
४. अध्यनन -
५. परयास -

प्र. ४ "वान" प्रत्यय लगाकर 4 शब्द बनाइए-

.....
.....

प्र. ५ "सु" उपसर्ग लगाकर 4 शब्द बनाइए-

.....
.....

प्र. ६ निम्नलिखित पंक्तियों का भावार्थ लिखिए-

केवल कुछ मतवाले त्यागी छोड़ सुनहला
सुख-संसार, अर्पण करने आए हैं
इन चरणों पर जीवन सार

.....
.....
.....
.....
.....
.....
.....
.....

प्र. १ रिक्त स्थानों की पूर्ति कीजिए-

- १ मदरसे में शिक्षा देते थे।
- २मदरसे पहुँचे।
- ३ पुड़िया में है।
- ४ मिठाई पर रख दी।
- ५ मिठाई में मिला है।

प्र. २ उर्दू व विदेशी शब्द अलग करे -

मदरसे, स्कूल, हाकिम, कसूर, डॉक्टर

1. उर्दू शब्द -
2. विदेशी शब्द

प्र. ३ "अ" उपसर्ग लगाकर पाँच शब्द बनाइए-

.....
.....
.....

प्र. ४ "हीन" प्रत्यय लगाकर पाँच शब्द बनाइए-

.....
.....
.....

प्र. ५ प्रश्नों के उत्तर दीजिए-

1. चतुराई कब काम आती है?

.....
.....
.....

2. पाँच मदरसों के नाम लिखिए।

.....
.....

3. मदरसों में क्या शिक्षा दी जाती है?

.....
.....

प्र. १ सही अथवा गलत लिखिए-

१. मदरसे में धार्मिक शिक्षा दी जाती है
२. मुल्ला नसरुद्दीन का एक भतीजा था
३. भतीजे के हाथ से चाकू टूट गया था
४. चाचा जी ने भतीजे को माफ़ कर दिया
५. मिठाई में जहर मिला था

प्र. २ विशेषण रेखांकित कीजिये-

१. मिठाई स्वादिष्ट है
२. भतीजा चतुर था
३. राहुल मेहनती बच्चा है
४. यह भवन बहुत विशाल है
५. मेरी कहानी बहुत मनोरंजक है

प्र. ३ इस पाठ में आए कोई 08 सर्वनाम शब्द लिखो-

.....
.....

प्र. ४ इस पाठ के आधार पर मदरसे के बारे में आप जो जानते हैं उसे 5 वाक्यों में बताइए ।

.....
.....
.....
.....
.....
.....
.....

प्र. ५ भारतीय गुरुकुल शिक्षा पद्धति के विषय में आप क्या जानते हैं? बताइए ।

.....
.....
.....
.....
.....
.....
.....

प्र. १ सही जोड़ी मिलाइए-

१. दुर्लभ सम्भवतः
२. सांयकाल कीमती
३. प्रवेश शाम का समय
४. चैन आना
५. शायद राहत

प्र २ कोई पाँच तत्सम शब्द लिखिए-

.....

.....

प्र.३ असमान शब्दों पर गोला लगाइए-

१. कीमती दुर्लभ आसान कठिन
२. उत्कृष्ट श्रेष्ठ मामूली महान
३. प्रवेश प्रस्थान आना आगमन
४. शायद कदाचित निश्चित संभवतः

प्र. ४ विशेषण की परिभाषा उदाहरण सहित दीजिए-

.....

.....

प्र. ५ निम्नलिखित प्रश्नों के उत्तर दीजिए -

१. हमें सबसे कैसा व्यवहार करना चाहिए?

.....

.....

२. सदाचरण क्या होता है? समझाइए ।

.....

.....

३. सदाचरण पर पाँच वाक्य बनाइए ।

.....

.....

.....

.....

प्र.१ सही अथवा गलत लिखो-

१. नौकर के हाथ से कमलदान टूटा था
२. साहब ने उसे बहुत डाँटा
३. नौकर घर छोड़कर चला गया
४. साहब को अपनी गलती पर दुःख हुआ
५. गमला बहुत मामूली था

प्र २ रेखांकित शब्दों के विलोम लिखकर वाक्य पुनः बनाइए-

१. नौकर बूढ़ा था ।
२. साहब प्रसन्न हुए ।
३. तौलिया गीला था ।
४. मिठाई स्वादहीन थी ।
५. नेहा बहुत परिश्रमी है ।

प्र ३ जातिवाचक संज्ञा कौनसी है? पाठ के आधार पर कोई तीन बताइए

.....

.....

.....

प्र ४ निम्नलिखित प्रश्नों के उत्तर दीजिए-

१. वृक्ष हमें क्या देते हैं?

.....

.....

.....

२. तीन ऐसे पेड़-पौधों के नाम बताइए जो पूजा में काम आते हैं।

.....

.....

.....

३. औषधि(दवाई) के रूप में काम आने वाले पाँच पेड़-पौधों के नाम लिखिए ।

.....

.....

.....

PADMAJA HS SCHOOL CLASS V /SUB- MATHS WORK SHEET -1

1. Try to use a rectangle ,circle and a triangle to draw a fish.

2. Write the number one thousand. Now write one hundred thousand. So how many zeroes are there in the number one lakh?

.....
.....
.....

3. Write the smallest number and the largest number.

a. 5321789, 5321889,5421789,5531987

.....

b. 3721089,3721088,3425789,3707089

.....

4. Fill in the missing digits

$$\begin{array}{r} \text{a. } 4 \quad 6 \quad 9 \quad \square \quad 2 \quad \square \\ + 3 \quad \square \quad \square \quad 1 \quad 4 \quad 3 \\ \hline \end{array}$$

$$\begin{array}{r} \text{b. } 6 \quad \square \quad 1 \quad 7 \\ - 3 \quad 2 \quad \square \quad 5 \\ \hline \end{array}$$

$$\begin{array}{r} 8 \quad 2 \quad 2 \quad 9 \quad \square \quad 7 \\ \hline \end{array}$$

$$\begin{array}{r} 2 \quad 8 \quad 1 \quad \square \\ \hline \end{array}$$

5. Choose the correct options

a. Which is an odd number, 17 or 18?

.....

b. Which is the Multiple of 5, 25 or 52?

PADMAJA HS SCHOOL CLASS V /SUB- MATHS WORK SHEET -2

1. Draw two open curve and two closed curve.

2. Draw a circle of radius 3cm and cut it out in to four equal parts.

3. Make statement true by filling \times or \div

a. $8 \square 7 = 56$

c. $505 \square 5 = 101$


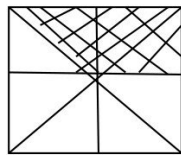
b. $84 \square 7 = 12$

d. $81 \square 9 = 729$

4. Draw all the even numbers between 15 and 31.

.....
.....

5. Write the fraction for the shaded part.



6. Draw the watch and draw the hands of the clock when they make an angle which is less than a right angle. Also write the time.

PADMAJA HS SCHOOL CLASS V /SUB- MATHS WORK SHEET -3

1. Insert the appropriate sign (> , < or =)

a. $\frac{2}{5}$ $\frac{3}{8}$ b. $\frac{5}{9}$ $\frac{10}{18}$ c. $\frac{5}{7}$ $\frac{3}{7}$

2. Write yes or no

- a. HCF of every number is always 1.
- b. An angle measuring 180° is complete angle.
- c. A curve which starts and ends at the same point is closed curve.

3. Answer the questions

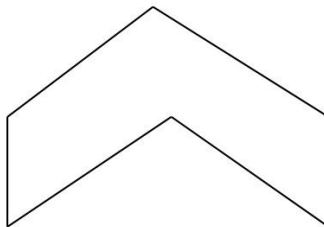
a. How many one fourth will make a half?

.....

b. Look at a 10 rupee – note is its area more than hundred sq.cm ?

.....

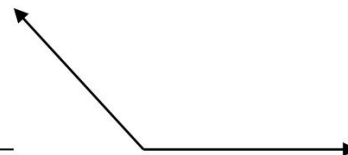
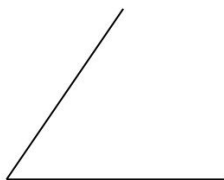
c. How many sides are there ?



d. Find $\frac{1}{4}$ of 24.

.....

e. Identify the angles , measures them and name them .



PADMAJA HS SCHOOL CLASS V /SUB- MATHS WORK SHEET -4

1. Convert these mixed fraction in to improper.

- a. $3\frac{1}{2}$
- b. $6\frac{7}{10}$
- c. $3\frac{9}{11}$

2. Write any ten multiples of 5.

.....
.....

3. Draw a factor tree of 24.

4. Choose the correct options

- a. Angle more than 90° is (acute / obtuse)
- b. The place value of 7 in 20749121 is
.....(7000000/700000).
- c. The improper fraction of $10\frac{1}{3}$ is ($31/3$, $30/3$).
- d. The prime factors of 125 are
(5 and 25/ only 5).
- e. The LCM of 12 , 36 and 60 is (180/60)

5. Evaluate $(3\frac{1}{2} - 4\frac{1}{4}) + (1\frac{1}{8} + \frac{3}{10})$.

.....
.....
.....

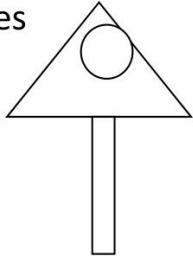
6. Write nest two numbers in the sequence

- a. 2 , 5 , 10 , 17 , _____ , _____
- b. 7, 17 , 27 , 37, _____ , _____.

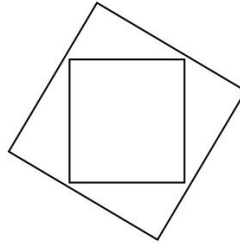
PADMAJA HS SCHOOL CLASS V /SUB- MATHS WORK SHEET -5

1. Draw and write number of lines of symmetry of the following figures

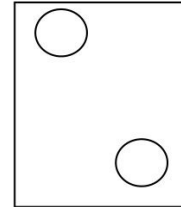
a.



b.



c.



2. Fill in the blanks

a. All even numbers are divisible by _____.

b. $\frac{41}{9}$ is an _____ fraction.

c. 35° is an _____ angle.

3. A box contains 72 apples. Eight apples in each dozen are good and the rest are rotten. What fraction of the total apples are rotten?

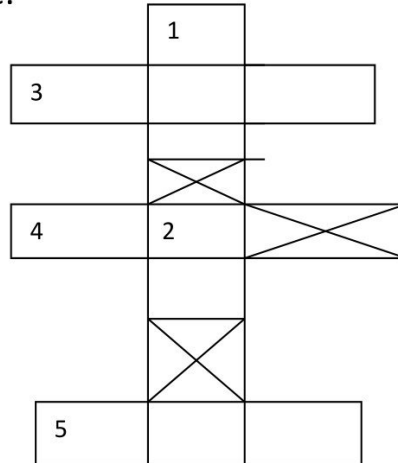
.....
.....
.....
.....
.....

4. I am the smallest five – digit number which when divided by 11 leaves 5 as remainder . Who am I? What number should be added to me to make me exactly divisible by 13?

.....
.....
.....
.....
.....
.....

PADMAJA HS SCHOOL CLASS V /SUB- MATHS WORK SHEET -6

1. Solve this puzzle.



Top to bottom 1- LCM of 25 and 30. , 2- HCF of 100 and 175.

Left to right 3- LCM of 64 and 256 , 4- HCF of 66 and 110 , 5 HCF of two numbers is 3 and their LCM is 36. What is the product of the two numbers.

.....

.....

.....

.....

.....

.....

.....

2. The cost of a silk saree is Rs 3445 and the cost of a shirt is RS 345. What is the total cost of 121 sarries and 245 shirts?

.....

.....

.....

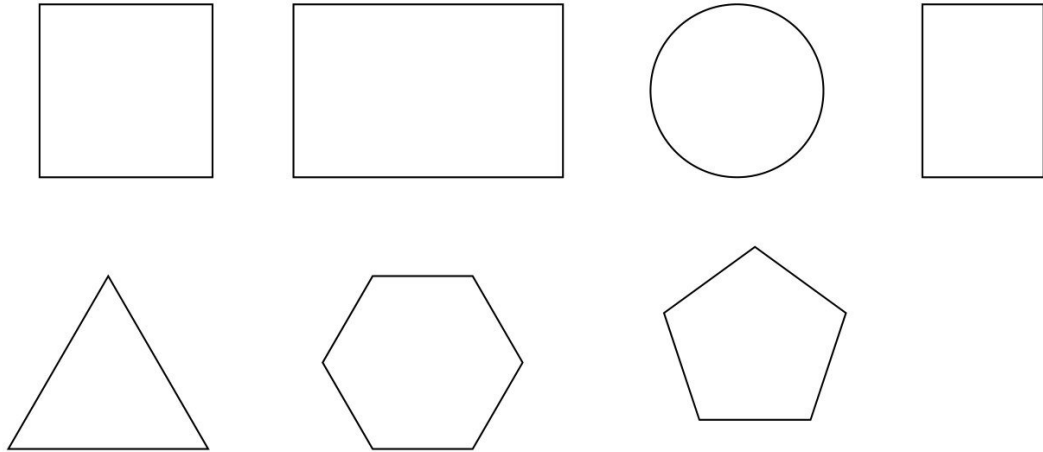
.....

.....

.....

PADMAJA HS SCHOOL CLASS V /SUB- MATHS WORK SHEET -7

1. Which of the shapes below would look the same after half a turn.



2. The hungry cat is trying to catch Kunjan the mouse. Kunjan is now on the 14th step and it can jump 2 steps at a time. The cat is on the third step. She can jump 3 steps at a time. If the mouse reaches 28 it can hide in the hole .

Find out whether the mouse can get away safely.

- a. The steps on which the mouse jumps.
- b. The steps on which the cat jumps.
- c. The steps on which both the cat and the mouse jump.
- d. Can the mouse get away?

.....

.....

.....

.....

.....

.....

PADMAJA HS SCHOOL CLASS V /SUB- MATHS WORK SHEET -8

1. Various digits are shown in the following place value chart. Read the numbers and then answer the questions given below.

LAKH	TEN THOUSANDS	ONE THOUSAND	HUNDREDS	TENS	ONE

- a. The place value of 5 in 4503.
- b. The place value of 6 in 56.832.
- c. The place value of 9 in 98105.
- d. The place value of 3 in 667637.

2. Fill in the blanks –

- a. ____ tens = 1 thousand
- b. 10 tens = ____ hundreds.
- c. ____ lakh = 100 thousand
- d. 10 ten thousands = ____ lakh.

3. Find the place value of 0 in the following numbers.

- a. 201
- b. 3210
- c. 3405
- d. 33045698
- e. 3478056987.

.....

PADMAJA HS SCHOOL CLASS V /SUB- MATHS WORK SHEET -9

1. Write in standard form

- a. $70000 + 6000 + 800 + 50 + 2$
- b. $50000 + 400 + 10 + 7$
- c. $(4 \times 100000) + (1 \times 1000) + (3 \times 100) + 4$
- d. $(6 \times 100000) + (8 \times 10) + 9$

2. Solve the puzzle.

- a. The numbers in each row across add up to the total in the box on the right .
- b. The numbers in each column down add up to the total in the box at the bottom.

	10		8
		4	7
	4	5	
5	10		2

25
17
15
20

12	26	18	21
----	----	----	----

.....

.....

.....

.....

.....

PADMAJA HS SCHOOL CLASS V /SUB- MATHS WORK SHEET -10

1. Find the product

- a. $13 \times 4000 = \dots\dots\dots$
- b. $2000 \times 119 = \dots\dots\dots$
- c. $128 \times 3000 = \dots\dots\dots$
- d. $123 \times 4000 = \dots\dots\dots$
- e. $452 \times 4500 = \dots\dots\dots$

2. Do as directed

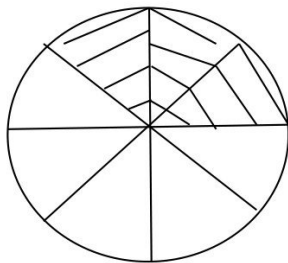
a. Complete the series

2, 4, 8, 16, 32, 64,,,

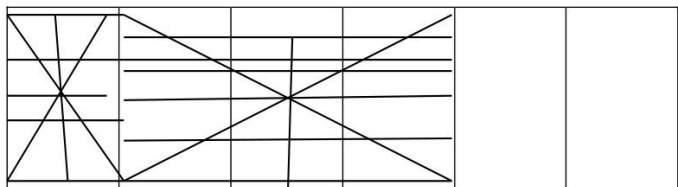
b. If \square means addition, \diamond means division then...

$30 \diamond 5 \square 2 \diamond 4 = \dots\dots\dots$

3. Write the shaded and un shaded parts of the following figures.



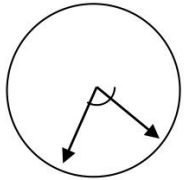
Shaded part =
 Un shaded part =

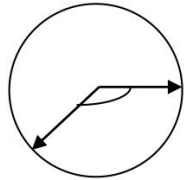


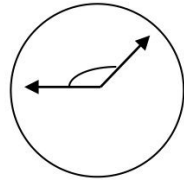
Shaded part =
 Un shaded part =

PADMAJA HS SCHOOL CLASS V /SUB- MATHS WORK SHEET -11

1. Write what kind of angle is made by the hands at these times.
Also write the time.







2. There are 18 bangles on the rod meena is trying to group them.
She can put them in groups of 2 ,3 6, 9 and 18 without any
bangles being left. How many groups will she have if she makes
froups of 1 bangle each?

Now complete the table , for different numbers of bangles for
each number see what different groups can be made.

NUMBER OF BANGLES	DIFFERENT GROUPS WE CAN MAKE
18	1 , 2, 3 , 6, 9, 18
24	
20	
9	
13	
21	

PADMAJA HS SCHOOL CLASS V /SUB- MATHS WORK SHEET -12.

1. Fill in the missing numerator or denominator in these equivalent fractions.

a. $\frac{2}{3} = \frac{12}{\square}$

b. $\frac{\square}{7} = \frac{3}{21}$

c. $\frac{3}{5} = \frac{12}{\square}$

d. $\frac{21}{28} = \frac{3}{\square}$

2. Write in ascending order

a. 10111 ; 100100 ; 11108; 11 011

.....

b. 888 ; 4444 ; 6 ; 88 ; 99909

.....

3. Write the smallest 6- digit number in which no digit is repeated.

.....

4. Write the largest 6- digit number and subtract the smallest 5 digit number from it.

.....

.....

.....

5. Write YES / NO

a. 62 thousand is equal to 6200.

b. The successor of 3899 is 3900.

c. Answer of an addition operation is called sum.

d. A zero added to a number does not change the value of the number.

PADMAJA HS SCHOOL CLASS V /SUB- MATHS WORK SHEET -13

1. State true or false .

- a. A number divisible by 12 must be divisible by 3 and 4.
- b. A number divisible by 9 is also divisible by 18.
- c. A number divisible by 4 is always even.
- d. A number divisible by 30 is also divisible by 2 , 3 , and 5.

2. Write definition with examples of the following.

- a. Prime number
- b. Composite number

.....

.....

.....

.....

.....

.....

3. There are three drums containing 42 liters , 70 liters and 98 liters of water. Find the capacity of the largest three drums by the exact number of times.

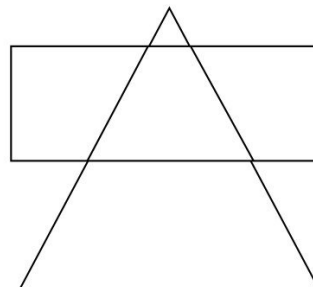
.....

.....

.....

.....

4. Identify the right angles , acute angles and the obtuse angles in the given figure.

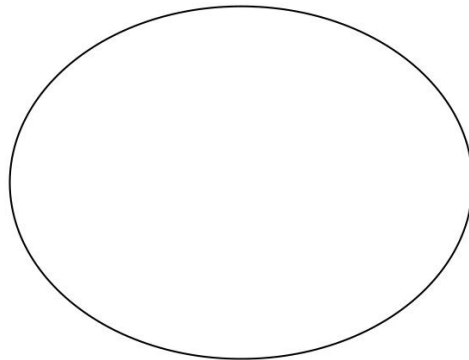


PADMAJA HS SCHOOL CLASS V /SUB- MATHS WORK SHEET -14

1. Fill in the blanks

- a. A line is a collection of
- b. Ahas a starting point and an end point.
- c. A right angle measures
- d. An acute angle isthan a right angle.
- e. An obtuse angle measures than 90° and less than
- f. An angle whose measure is 20° is anangle.
- g. An angle whose measure is 120° is anangle.
- h. Sum of two right angles is a
- i. 150° is anangle.
- j. 65° is anangle.

2. Join 1 to 2 , 2 to 3 , 3 to 4, and 4 to 1. Then join 5 to 6 , 6 to 7 , 7 to 8 and 8 to 5. Similarly join rest of the points taking four numbers at a time. How many line segments will be drawn?



.....

.....

.....

.....

.....

PADMAJA HS SCHOOL CLASS V /SUB- MATHS WORK SHEET -15

1. If a number is divisible by 6 than it is also divisible by
2. 753215 is divisible by
3. The angle between two perpendicular lines is
4. The angle between two parallel lines is
5. 1331 is divisible by
6. By using divisibility rules check the following numbers are divisible by which numbers. Also write the divisibility rules.
 - a. 4256
 - b. 327
 - c. 4500
 - d. 3999
 - e. 110

.....

.....

.....

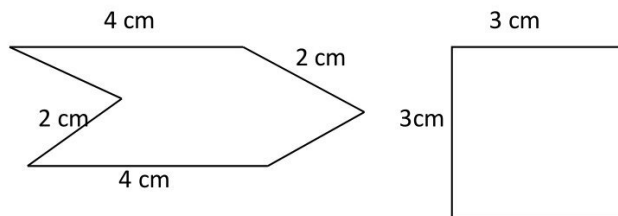
.....

.....

.....

7. Round of the numbers to the nearest.
 - a. 10 :
 - b. 100 :
 - c. 1000 :.....

8. Find the perimeter of the following diagram



PADMAJA HS SCHOOL CLASS V /SUB- MATHS WORK SHEET -16

1. Does it look the same?

a. Find out which letters in the English alphabet look the same after half a turn.

.....

b. Which of these English words reads the same on half a turn.
ZOOM , MOW , SWIMS , SIS , NOON

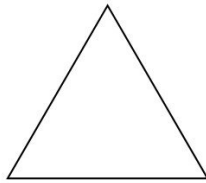
.....

c. Give half a turn to the numbers 0 to 9 find which of them still looks the same.

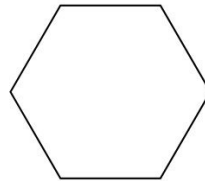
.....
.....

2. Draw what shapes would look like on $\frac{1}{4}$ turn and half turn

a.



d.




b.



.....
.....
.....

c.



PADMAJA HS SCHOOL CLASS V /SUB- MATHS WORK SHEET -17

1. Write true or false.

- a. 6×10 is a multiple of 10.
- b. 44 has only 2 factors -1 and 44 itself.
- c. All the prime numbers are odd.
- d. All the even numbers are composite.
- e. 1 is the least prime number.

2. Write the fraction for the part mentioned in the question.

- a. Jyoti ate 3 toffees out of 5 toffees. What fraction of the toffees she eat?
- b. A rose garden has 200 rose plants out of which , 40 plants bear white roses. What fraction of white rose plants are there in the garden?

.....
.....
.....
.....

3. Find the product of the followings

- a. 76 and 86
- b. 450 and 29
- c. 360 and 45
- d. 14587 and 345
- e. 43216 and 245

.....
.....
.....
.....
.....

PADMAJA HS SCHOOL CLASS V /SUB- MATHS WORK SHEET -18

1. Replace # by the correct digit in each of the followings

		7	2	#	8
	#	#	#	2	5
		4	2	9	#
+		8	2	6	6
1	0	0	0	0	0

	2	7	4	#	#
--		4	9	4	5
	2	2	#	7	5

2. Fill in the blanks

a. $63710 - \dots = 63710$

b. $\dots - 36941 = 0$

c. $0 + \dots = 7895$

d. Smallest 6 digits number $-1 = \dots$

3. Think of all 2, 3 and 4 digit numbers which look the same on half a turn.

.....

.....

.....

.....

4. One bundle of notebooks costs Rs 216. What is the cost of 1825 such bundles of note books?

.....

.....

.....

.....

.....

.....

PADMAJA HS SCHOOL CLASS V /SUB- MATHS WORK SHEET -19

1. Find the prime factorizations of the following numbers.

- a. 112 b. 125 c. 96

.....
.....
.....
.....
.....
.....

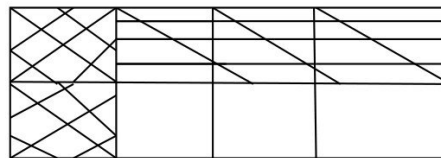
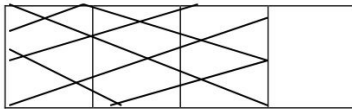
2. Draw factor tree of the following numbers.

- a. 98 b. 100 c. 56

3. Fill in the boxes

a. $\frac{3}{4} = \square / 12 = \square / 16 = 21 / \square$

4. Express the shaded regions as fractions.



PADMAJA HS SCHOOL CLASS V /SUB- MATHS WORK SHEET -20

1. A motor boat travels 20km in 1 hour . How many distance it covers in 6 hours.

.....
.....
.....
.....
.....

2. Find the fraction of area covered by water to the total area of land in India.

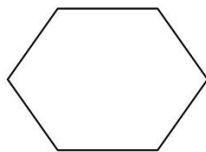
.....
.....
.....
.....

3. Draw the face of a clock when the angle between the minute hand and hour hand is 30° , 60° , 90° and 120° and write corresponding time.

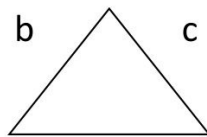
.....
.....
.....
.....
.....

4. Identify and write the names of the following regular polygons.

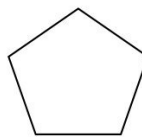
a.



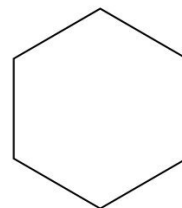
b.



c.



d.



PADMAJA HS SCHOOL CLASS V /SUB- MATHS WORK SHEET -21

1. Kailash was born on 1st April 2010. How many days old will he be on 2 February 2011?

.....
.....
.....
.....
.....

2. Fill in the table below

OBJECTS	TALLY MARKS	NUMBER
BALLS		20
BATS		11
BUCKETS		17
SPATULA		32
CAPS		23

3. Fill in the blanks

- a. The place value of 3 in 921.13 is
- b. $7.921 \times 0 = \dots\dots\dots$
- c. $0.008 \times 1 = \dots\dots\dots$
- d. $42.7 \times \dots\dots\dots = 4270.$

4. Write in decimals.

- a. $2/100 \dots\dots\dots$
- b. $162/10 \dots\dots\dots$

PADMAJA HS SCHOOL CLASS V /SUB- MATHS WORK SHEET -22.

1. Complete each of the following

a. $0.812 = 8/ \square + 1/ \square + \square / 1000$

b. $416.305400 + \square + 60 + \square / 10 + \square / 1000$

c. In 36.25 ----- 3 is inplace and its place value is.....

d. In 603.025 ----- 2 is in Place and its place value is

2. Running sums

a. $\frac{1}{2}$ a dozen =

b. $\frac{1}{2}$ a day is = Hours.

c. 0.25 day is =..... hours.

d. $\frac{1}{2}$ a month =fortnight .

3. Multiply

a. Rs 4.80 by 6

b. 6.778 by 6.6

c. 3.25 by 6.3

d. 2.225 by 14.5

e. 5.254 by 4.25

.....
.....
.....
.....
.....
.....
.....
.....

PADMAJA HS SCHOOL CLASS V /SUB- MATHS WORK SHEET -23.

1. Solve.

- a. How many grams are there in 9 kg?
- b. How many meters are there in 11 km?

.....
.....
.....

2. Running sums

- a. Rita went to market with Rs 1000. She bought a saree for Rs 375, a pair of shoes for Rs 555. How much money is left with her?

.....
.....
.....
.....

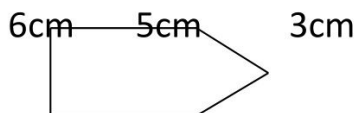
- b. Santosh bought goods of Rs 5500. If he has total Rs 10500 then how much money is left?

.....
.....
.....
.....

3. State true / false

- a. Two different lines can be drawn through two given points.
- b. A point has size and it indicates position.
- c. Only one line can be drawn through a point.

4. Find the perimeter.



PADMAJA HS SCHOOL CLASS V /SUB- MATHS WORK SHEET -24.

1. Solve.

- a. $240 \div 60 = \dots\dots\dots Q; \dots\dots\dots R$
- b. $345 \div 7 = \dots\dots\dots Q; \dots\dots\dots R$
- c. $478 \div 15 = \dots\dots\dots Q; \dots\dots\dots R$
- d. $1654 \div 47 = \dots\dots\dots Q; \dots\dots\dots R$
- e. $1457 \div 54 = \dots\dots\dots Q; \dots\dots\dots R$

2. Solve the following

a. How many seconds are there in 32 minutes?

.....
.....

b. How many seconds are there in 10 minutes?

.....
.....

c. How many minutes are there in 24 hours?

.....
.....

3. Fill in the blanks using am or pm

a. Yesterday it rained at 5in the evening.

b. My mother goes to bed at 10.30.....

c. Everyday, I go to play at 4:00.....

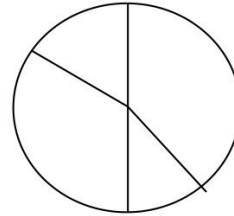
d. My father goes to office at 9 : 00

4. Cost of 12 dozens of mangoes is Rs 980. Find the cost of only one mangoe.

.....
.....
.....
.....

PADMAJA HS SCHOOL CLASS V /SUB- MATHS WORK SHEET -25

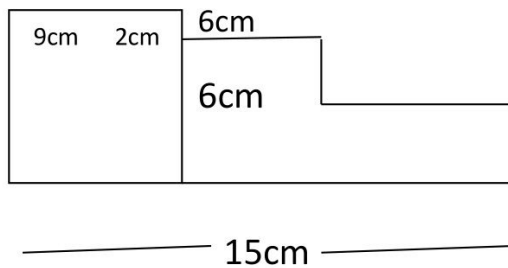
1. In the circle below are the details of transport of 100 students of Ryan School .



- a. Which mode of transport is used by the least number of students?
- b. How many students do walk to school?
- c. How many more students do travel by bus than a car to school?

.....
.....
.....
.....

2. Find the perimeter of the given figure.



3. A can contains 15 liters of oil. 12.18 liters of oil is used for cooking. How many deciliters of oil is left in the can?

.....
.....

PADMAJA HS SCHOOL CLASS V /SUB- MATHS WORK SHEET -26.

- 1. Change in to special number
 - a. 197
 - b. 132
- 2. Take a number double it again double your answer,now add the number you took in it then again double the answer after addition and divide it by 10. What is your answer?

.....

.....

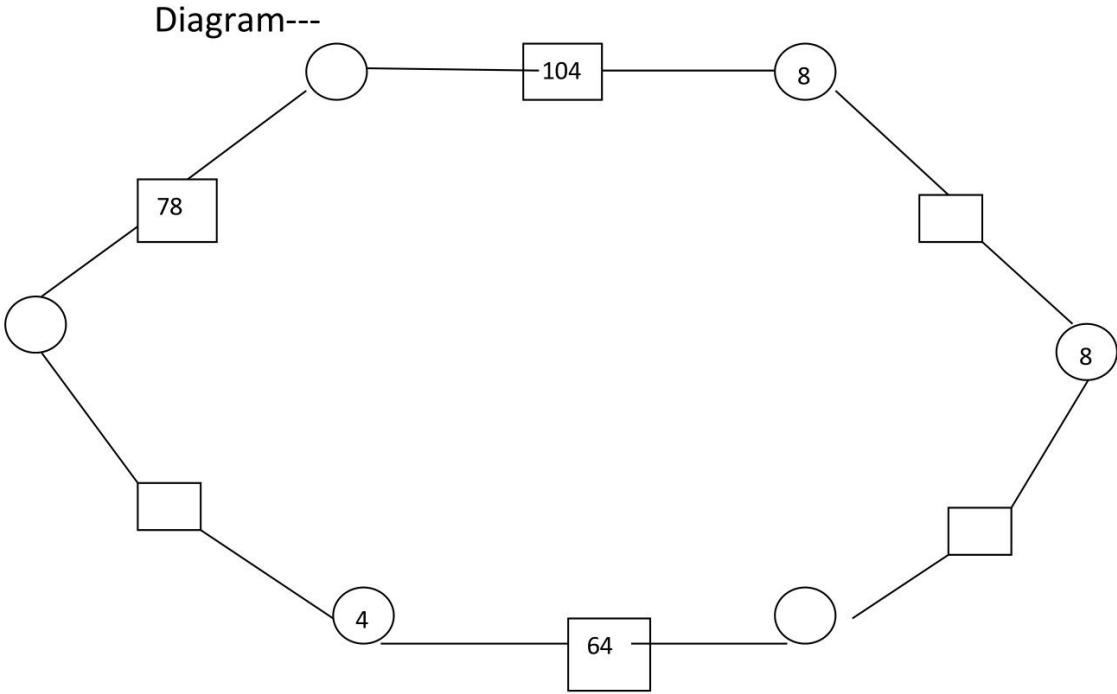
.....

.....

.....

.....

3. Fill the hexagon



PADMAJA HS SCHOOL CLASS V /SUB- MATHS WORK SHEET -27

- Now guess the length and width of many other things. Measure and find the difference between your measure and your guess.

SIZE OF THING	YOUR GUESS		YOUR MEASURE	
	LENGTH	WIDTH	LENGTH	WIDTH
100 RS NOTE				
10 RS NOTE				
20 RS NOTE				
50RS NOTE				

- Fill in the blanks

- $0.428 \text{ cm} = \dots\dots\dots\text{m}$
- $4028 \text{ cm} = \dots\dots\dots\text{m}$
- $0.428 \text{ dl} = \dots\dots\dots\text{kl}$
- $121 \text{ l} = \dots\dots\dots\text{kl}$
- $0.121 \text{ l} = \dots\dots\dots\text{kl}$
- $1.21 \text{ l} = \dots\dots\dots\text{kl}$.

- Multiply the followings

- 4562×150
- 1746×160
- 1478×345
- 3256×4623
- 3256×1325

.....

.....


.....

.....

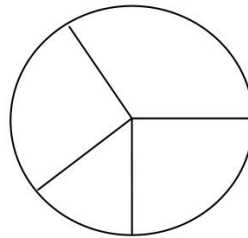
.....

PADMAJA HS SCHOOL CLASS V /SUB- MATHS WORK SHEET -29.

1. Find the perimeter of the given figure



2. The given pie chart shows the favourite dress of all ladies in a colony. Answer the following questions based on the pie chart.



- a. Which is the most popular dress?
- b. One fourth of the ladies like sari. (true /false)
- c. Which two dresses are equally popular?
- d. More ladies like sari than skirt and top. (true / false)

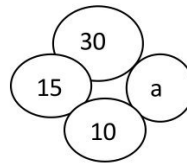
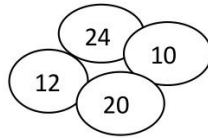
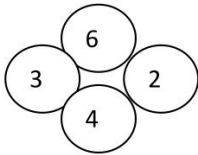
3. Find perimeters of the following

- a. Length = 6m breadth 500cm
- b. Length =300m width =65 cm
- c. Length = 400 cm width = 50 m
- d. Length = 4000 m width =45 cm
- e. Length = 125 cm width = 65 m

.....
.....
.....

PADMAJA HS SCHOOL CLASS V /SUB- MATHS WORK SHEET -30

1. Find the value of a in the third figure , by studying the patterns in the first two figures.



2. Solve

- a. $11/12 + 13/18$
- b. $31/3 - 1/2$
- c. $14/2 + 15/3$
- d. $16/2 - 17/10$
- e. $13/3 - 18/5$

.....

.....

.....

.....

.....

.....

.....

3. Find the perimeter of rectangle of length 2.82 cm and breadth 1.27 cm.

.....

.....

.....

.....

.....

PADMAJA HS SCHOOL CLASS V /SUB- MATHS WORK SHEET -31

1. A cat is chasing a rabbit.

a. The cat starts at 5 m and jumps 3m every time.

b. The rabbit starts at 8m and jumps 2m every time

If they both starts the same time, after how many jumps would the cat would reach the rabbit?

.....
.....
.....
.....
.....

2. List any 4 symmetrical objects from your home or school.

Also draw there diagrams.

.....
.....
.....
.....
.....

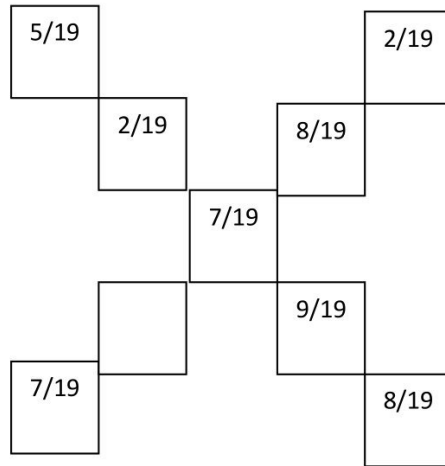
3. Alisha walked 20kms to the east, then turned left and walked 15kms. She then turned west and walked 45kms. She again turned left and walked 15kms. How far is she from her house?

.....
.....
.....
.....

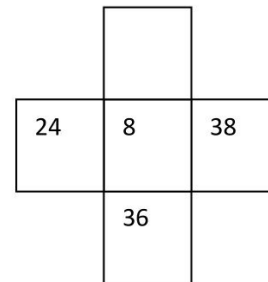
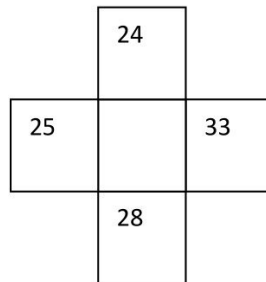
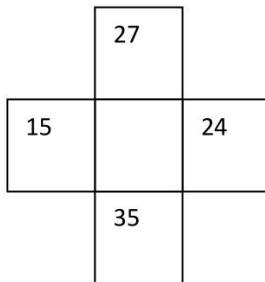
4. A boat is sailing towards east for 36kms after then it turns the direction towards south for 45kms. Draw the diagram and find the total distance covered by boat?

PADMAJA HS SCHOOL CLASS V /SUB- MATHS WORK SHEET -32

1. If sum of the both diagonals are same then find the missing value.



2. Find the missing number.



3. Find the decimal form of $223/1000$.

.....

4. The radius of a circle is 7cm. Find its diameter?

.....

PADMAJA HS SCHOOL CLASS V /SUB- MATHS WORK SHEET -33

1. Fill in the blanks

- a. 1.64 expressed as a mixed number is
- b. Half of a circle is called a
- c. There aredecimal places in 63.9.
- d. Fraction form of 3.124 is
- e. Decimal form of $124/39$ is.....

2. Do as directed :

- a. Written in expanded form of 2605.634.
.....
- b. Subtract 41.6 from 80.
.....
- c. Multiply 0.941×306 .
.....
- d. Divide 3456.25 by 15
.....
- e. Multiply 365.248 by 3.25
.....

3. Draw line segment of

- a. 3.5cm
- b. 4.7cm
- c. 6.9cm
- d. 10.2cm
- e. 3.6cm

.....
.....
.....

PADMAJA HS SCHOOL CLASS V /SUB- MATHS WORK SHEET -34

1. Write true or false

- a. Length of a door is about 4 m.
- b. Capacity of a drop of water is almost 2l.
- c. Weight of an apple is approximately 600gm
- d. Width of a thumb is about 1cm.
- e. Your weight is about to 45kg.

2. Find the area of the followings.

- a. Square of side 15cm.
- b. Rectangle of dimensions 52cm × 38cm
- c. Area of carpet of dimensions 12m × 45 m
- d. Area of ground with length 200m and width 100m.
- e. Area of plot with length 20m and width 15m.

.....

.....

.....

.....

.....

.....

.....

.....

3. Fill in the blanks

- a. The weight of a book is about(500gm/500kg)
- b. The weight of a bike is about(200g/200kg)
- c. The height of a building is about(100cm/100m)
- d. The length of a saree is about(5.5km/5.5m)

PADMAJA HS SCHOOL CLASS V /SUB- MATHS WORK SHEET -35

1. Complete the table-

	Cost price	Selling price	Profit	loss
Pen	8	10		
Water bottle	20		5	
Pencils	2	2		
Pencil box	58	66		
Socks	35		5	
Ice cream		14	7	
chocolates		12		4

2. Rhauls mother made a list of items to be bought for Rahul's birthday party. Represent the following data using tally marks.

Items	Birthday cap	Pastry	Samosa	Chocolate	candy
Number of items	12	15	20	30	25

3. Find profit or loss.

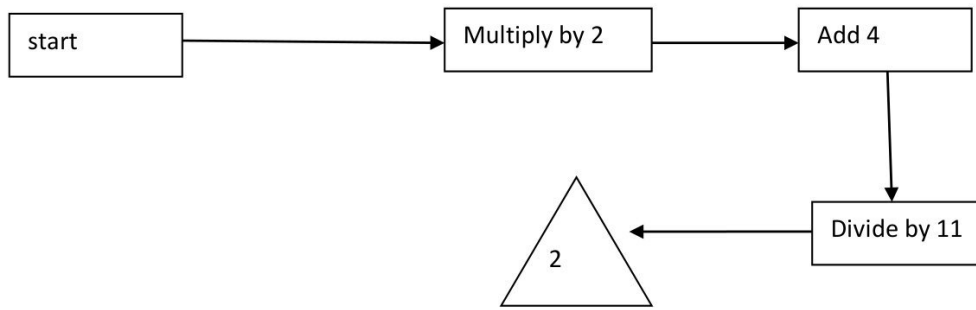
a. C.P = 1545 , S.P = 1667

b. Cost price = 2456 and Selling price = 1256.

.....

PADMAJA HS SCHOOL CLASS V /SUB- MATHS WORK SHEET -36.

1. What number belongs to the start box?



2. A man gives $\frac{1}{2}$ of his property to his son and the remaining half is shared equally between his two daughters. What is the share of each daughters?

.....
.....
.....
.....
.....

3. How many cans of capacity 1.2l are needed to fill 12dal of oil?

.....
.....
.....
.....
.....

4. How many box needed to put 500 dozens of mangoes if one box contains 24 mangoes?

.....

PADMAJA HS SCHOOL CLASS V /SUB- MATHS WORK SHEET -37.

1. If the area of a square is 49sqm. What is the length of its side?

.....
.....
.....
.....

2. Draw a square of area 9sqcm. Name it ABCD and then draw another square whose area is double of it.

a. Find perimeter of square ABCD and another square PQRS.

3. The kangaroo can cover a distance of 15.25m in one leap. How many hectometer will it cover in 15leaps?

.....
.....
.....
.....

4. Fill in the blanks

a. 5455kl =lit= cl

b. 3498 lit =hk =kl

PADMAJA HS SCHOOL CLASS V /SUB- MATHS WORK SHEET -38

1. Convert the following
 - a. 247 mm into meters.
 - b. 121cm into kilometers.
 - c. 3552cg into grams.
 - d. 18.2kg into gram.
 - e. .523m into cm.

.....

.....



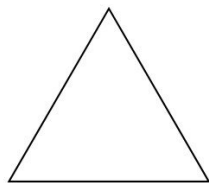

.....

.....

.....

.....

2. What measurement unit will you use to measure the following
 - a. Length of a pin.
 - b. Weight of a book.
 - c. Height of a girl.
 - d. Capacity of a bucket.
3. Draw the lines of symmetry for the following figure.



PADMAJA HS SCHOOL CLASS V /SUB- MATHS WORK SHEET -39.

1. Answer the followings

- a. What is the smallest and largest unit of length?
- b. What is the basic unit of liquid?
- c. How many liters are there in 15kl?
- d. How many minutes make 5 hours?
- e. How many grams are there in 8kg?

.....
.....
.....
.....
.....

2. Fill in the blanks

- a. $1\text{kg} = \dots\dots\dots\text{gm}$
- b. $1000\text{m} = 1\dots\dots\dots$
- c. $1\text{cm} = \frac{1}{10} \dots\dots\dots$
- d. $1\text{m} = \frac{1}{1000}\dots\dots\dots$
- e. $1\text{g} = \frac{1}{1000}\dots\dots\dots$
- f. $100\text{cm} = \dots\dots\dots\text{m}$

3. Converts the following

- a. 5km into cm
- b. 54kl into liters.
- c. 1350lit into kl
- d. 1540kg into decigram.
- e. 1650gram into kilogram.


.....
.....
.....

PADMAJA HS SCHOOL CLASS V /SUB- MATHS WORK SHEET -40.

1. A plane takes off from Chennai at 13:40 hrs. it lands at Delhi after 2:12 hrs. At what time does it land at Delhi?

.....
.....
.....
.....
.....

2. How many straight lines are there in each of the following figure



14

3. Fill in the blanks

- a. Ahas 3 vertices.
- b. In a rectangle , thesides have the same length.
- c. A square hasvertices.
- d. A rectangle hasvertices.
- e. A rhombus has.....vertices.