

PADMAJA H.S.SCHOOL /CLASS-2nd/SUBJECT-ENGLISH /WORK SHEET- 01

Q.1 Correct the spellings:-

- 1. PMJU - 2. AIFRY -
- 3. CDAEN - 4. DGO -
- 5. GRDNAE - 6. EUBL -
- 7. PAEL - 8. HUALG -
- 9. HCWTA -

Q.2 Write the plurals of:-

- 1. Toy 6. Bag
- 2. Ball 7. Dress
- 3. Player 8. Girl
- 4. Glass 9. Box
- 5. Bench 10. Table

Q.3 Write 10 nouns from your home:-

.....
.....

Q.4 Underline the nouns from in each sentences:-

- 1. Sita is a good girl.
- 2. Boys are playing in the garden.
- 3. Bombay is a big city.

PADMAJA H.S.SCHOOL /CLASS-2nd/SUBJECT-ENGLISH /**WORK SHEET- 02**

Q.1 Write two rhyming words of each:-

1. Sun - ,

2. Jump - ,

3. Cat - ,

4. Hen - ,

Q.2 Arrange the fruits name in alphabetical order:-

Orange , Mango, Apple , Grapes , Guava , Peas , Banana ,
Custard apple , Pomegranate , Pineapple , papaya.

.....
.....
.....

Q.3 Write the vowels:-

.....

Q.4 How many consonant are there?

.....

Q.5 Encircle the correct word in each group:-

1. Garden , Gadren , Gadern
2. Medicine , Medecine , Medcine
3. Peincl , Pecnil , Pencil

PADMAJA H.S.SCHOOL /CLASS-2nd/SUBJECT-ENGLISH /WORK SHEET- 03

Q.1 Correct the sentence:-

- A. Is a sita beautiful girl.
- B. Big elephant a animal is.
- C. Tall sohan is a boy.
- D. East the rises sun in.
- E. Milk the full of jug.

Q.2 Change the genders :-

- 1. Boy
- 2. Horse
- 3. Tiger
- 4. Father
- 5. Brother
- 6. Lion
- 7. Dog
- 8. Bull

Q.3 Circle the words in each row that have the same long vowel rhyming
Sound as the word in the box:-

Feet	Meet , Seat , Heat , Head
Take	Leak , Bake , Cake, Lake
Flute	Cute , Toot , Suit , Cut
Pine	Tin , Mine , Line , Fine

Q.4 Write 4 flower name that you like the most:-

- 1.
- 2.
- 3.
- 4.

PADMAJA H.S.SCHOOL /CLASS-2nd/SUBJECT-ENGLISH /WORK SHEET- 04

Q.1 Read Each row of words and circle the two words that are antonyms:-

1. Fast , Quick , Slow , Angry
2. Tall , Fast , Quick , Short
3. Fast , Upset , Big , happy
4. Go , Slow , Come , Short
5. No, Nod , Yes , Hot
6. Old , New , Cry , Fun
7. Fast , Right , Quick , Left

Q.2 Use the correct word from the word bank to complete the sentence:-

(Going , Honey , Turtle , Roaring , Dolls , Paacock , Come , Table)

1. The red roses in the
2. I can see a little in the sea.
3. Girls love playing with
4. Kate is with her bag.
5. A big lion is in the cage.
6. The bear loves
7. Look at the on the tree.
8. John will late.

Q.3 Underline the noun in each sentence:-

1. A cat is on the table.
2. Delhi is the capital of india.
3. The girl sings a song.
4. Indore is a big city.
5. Bunty is a good boy.

Q.1 Arrange the vegetables name in alphabetical order:-

Carrot , Radish , Brinjal , Peas , Potato , Tomato , Onion , Cabbage
Pumpkin , Cauliflower , Lady’s finger , Capsium , Bitter guard

.....
.....
.....
.....

Q.2 Pickout some new words from these words:-

- | | |
|---------------|-------------|
| 1. Cupboard - | 2. Orange – |
| 3. Leap - | 4. Yellow – |
| 5. playing - | 6. Mango – |

Q.3 Write 5 lines of your favourite animal:-

.....
.....
.....
.....
.....

Q.4 Write 10 noun form your school:-

- | | | |
|----------|---------|---------|
| 1. | 2. | 3. |
| 4. | 5. | 6. |
| 7. | 8. | 9. |
| 10. | | |

PADMAJA H.S.SCHOOL /CLASS-2nd/SUBJECT-ENGLISH /WORK SHEET- 06

Q.1 Find out things which belongs to a teacher from followings:-

Pen , Duster , Thermometer , Bat , Marker , Knife , Book , Medicine

.....
.....

Q.2 Use the following words and make sentence:-

1. How -

2. What -

3. Where -

4. Who -

Q.3 Write antonyms of:-

1. Fast -

2. Big –

3. Rich -

4. Warm –

5. Hot -

6. Long –

7. True -

8. Day –

9. Weak -

10. Low –

Q.4 Write 3 places that you visit with your parents that you lik most:-

1.

2.

3.

Q.5 Write 5 common gender:-

1. 2.

3. 4.

PADMAJA H.S.SCHOOL /CLASS-2nd/SUBJECT-ENGLISH /WORK SHEET- 07

Q.1 Find out nouns and write it in proper column:-

Indore , Ram , Table , Dog , Ujjain , Toy , Sita , Chair , Bhopal , Rahul
Gourav , Delhi , Riya , Pencil , Cat , Lion , Hammer , Chapati , Rat
Aayush.

Name	Place	Animal	Thing

Q.2 Hidden in this crossword puzzel are the names of 6 birds . Find out them going left to right or up to down:-

D	G	E	I	T	P	A	R	R	O	T
E	A	G	L	E	C	B	G	W	C	J
B	R	L	P	L	E	H	K	S	L	Y
A	P	M	E	E	F	D	E	X	I	Z
D	E	O	G	P	E	N	G	U	I	N
K	I	W	I	H	H	M	Q	V	G	T
V	G	T	O	A	Y	S	M	Y	O	B
X	N	U	N	N	B	H	D	T	R	Q
A	W	B	Z	T	X	N	L	U	M	C

Q.3 Write 5 common gender:-

1. 2. 3.
4. 5.

PADMAJA H.S.SCHOOL /CLASS-2nd/SUBJECT-ENGLISH /WORK SHEET- 08

Q.1 Write the action of following animals:-

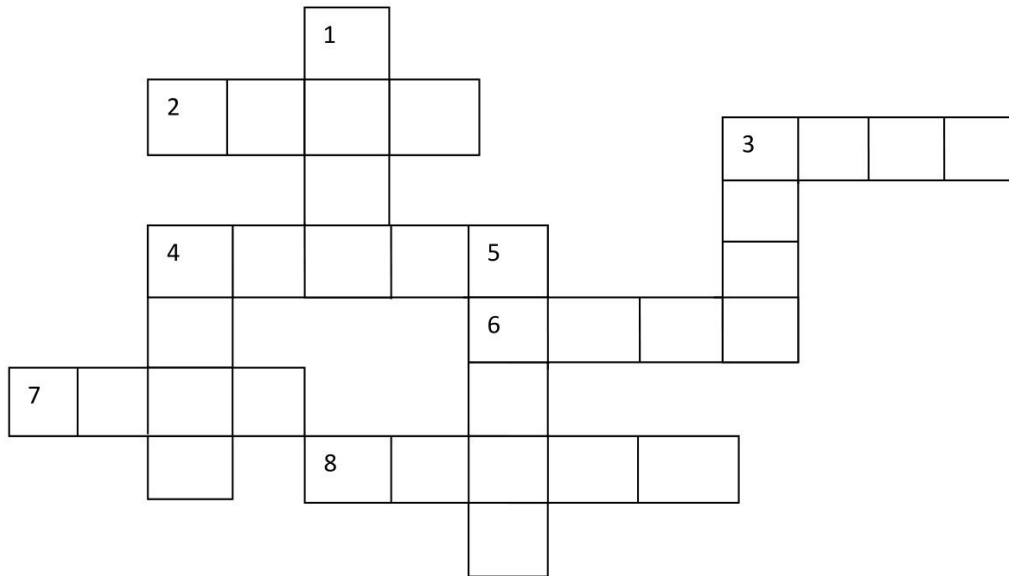
- 1. Dog -
- 2. Frog -
- 3. Lamb-
- 4. Rabbit -
- 5. Cat -
- 6. Horse -

Q.2 Write the name of flavour that you like most of the following things:-

- 1. Cake -
- 2. Biscuit -
- 3. Pastry -
- 4. Ice – cream -

Q.3 Vocabulary:-

‘ Using the across \ down clues. Write the matching words in the numbered grid below’:-



Across – 2. Commented , 6. City , 3. Stain , 7. Record , 4. Frock , 8. Batch

Down – 1. Donate , 5. Rock , 3. Shortly , 4. Rush

Hint- a. List , b. Dress , c. Town , d. Give , e. Spot , f. Bunch , g. Soon , h. Dash , i. Said

PADMAJA H.S.SCHOOL /CLASS-2nd/SUBJECT-ENGLISH /WORK SHEET- 09

Q.1 Imagine that, ' A robot come to your home so what should it do for you. Write 10 work that you want to do the robot:-

- 1.
- 2.
- 3.
- 4.
- 5.
- 6.
- 7.
- 8.
- 9.
- 10.

Q.2 Identify the questions and statement write Q in front of question and S in front of statement:-

- 1. Riya is a lazy girl ()
- 2. What is your name? ()
- 3. He is a tall boy. ()
- 4. Where do you live? ()
- 5. She is strong girl. ()
- 6. Who are you? ()

Q.3 Make sentense using following words:-

- 1. Cat -
- 2. Sour -
- 3. Garden -
- 4. Fairy -
- 5. Boy -
- 6. Mother -
- 7. Beautiful -

Q.1 Write 5 games that you like most:-

- 1.
- 2.
- 3.
- 4.
- 5.

Q.2 Write 3 games each :-

- 1. Indoor games -
- 2. Outdoor games -

Q.3 Write the name of game in which there are 11 players:-

- 1.
- 2.

Q.4 Write the name of game in which you need any device or things:

-
-
-
-
-

Q.5 What is our national game?

-

Q.6 Make sentence using following words:-

- 1. Ugly -
- 2. Friend -
- 3. Slow -
- 4. Girl -

Q.1 Write the singular form of each plural:-

- 1. Ladies -
- 2. Toys -
- 3. Boys -
- 4. Glasses -
- 5. Chairs -
- 6. Oxen -
- 7. Foxes -
- 8. Tables -

Q.2 Arrange the jumbld word:-

- a. EKCA -
- b. OEHUS -
- c. TOBRO -
- d. IOLN -
- e. TAN -
- f. MEOH -
- g. PMUJ -
- h. BEKA -

Q.3 Write 10 action words:-

- 1.
- 2.
- 3.
- 4.
- 5.
- 6.
- 7.
- 8.
- 9.
- 10.

Q.4 Circle the words that have similar meanings:-

1.	Tiny	Big	Small
2.	True	Correct	False
3.	Preeety	Big	Beautiful
4.	Cold	Hot	Cool
5.	Power	True	Real

PADMAJA H.S.SCHOOL /CLASS-2nd/SUBJECT-ENGLISH /WORK SHEET- 12

Q.1 Fill the correct vowel and complete the word:

- 1. C k 2. G rl 3. Tr
- 4. G t 5. W k 6. Ra N

Q.2 Complete the sentences. The first one has been done for you:-

- 1. One glass , but many glasses .
- 2. One box , but many
- 3. One foot , but many
- 4. One boy , but many
- 5. One Child , but many

Q.3 Write 10 nouns from your classroom:-

Q.4 Circle the noun in each sentences:-

- 1. Boy , Tall , Hop
- 2. Jump , Short , Bhopal
- 3. Indore , Climb , Tiny

Q.1 Write 5 birds name that starts with vowel:

A -

E -

I -

O -

Q.2 Match animals with their actions:-

- | | |
|-----------|---------|
| 1. Stings | Birds |
| 2. Crawls | Rabbit |
| 3. Hop | Bee |
| 4. Chirps | Rooster |
| 5. Crows | Lizard |

Q.3 Look for the undrlined nouns in each sentence. Tell if the noun is a person, place or things:-

1. The doctors uses a sethescope.
2. Bhopal is a big city.
3. Strawberry ice – cream is my favourite.
4. Rina is a beautiful girl.
5. The cat is on the table.
6. Houses are made from bricks

Q.1 Write 5 question words starting with “Wh”:-

- 1.
- 2.
- 3.
- 4.
- 5.

Q.2 Change into negative sentence:-

- 1. She is a beautiful girl.
- 2. The boys are playing in the ground.
- 3. Rina is lazy girl.
- 4. Rahul is tall boy.

Q.3 Write 5 collective noun :-

- 1.
- 2.
- 3.
- 4.
- 5.

Q.4 Write 5 lines on bird that you like most:-

.....

.....

.....

.....

.....

Q.5 Write 2 birds name with its colour:-

- 1.
- 2.

Q.1 Circle the proper noun in each sentence:-

1. Mumbai is also known as 'Bollywood of india'.
2. Diwali is called festival of light.
3. March comes after February.
4. M.S. Dhoni is a great cricket player.
5. Mahatma Gandhi is a great indian leader.

Q.2 Make some question using some question word:-

1. What -
2. Where -
3. How -
4. Who -
5. Whom -
6. When -
7. Whose -

Q.3 Arrange the colours name in alphabetical order:-

Yellow, Red, Blue, Black , Green , Orange, Purple , White, Brown,
Voilet, Pink.

.....
.....

Q.1 Imagine that you are going to a zoo. What animals you see in the zoo name it:-

- 1. 2. 3.
- 4. 5. 6.
- 7. 8. 9.
- 10. 11. 12.

Q.2 Write Favourite fruit of the following animals:-

- 1. Monkey - 2. Rabbit

Q.3 Write the young one's name of the following animals:-

- 1. Sheep - 2. Lion -
- 3. Cat - 4. Dog -
- 5. Goat - 6. Cow -

Q.4 Write 4 insect name:-

- 1. 2.
- 3. 4.
- 5. 6.

Q.1 Circle the best way to combine the two sentences:-

1. The dog is hungry. The cat is hungry.
 - a. The dog is hungry and the cat.
 - b. The dog and cat is hungry.
 - c. The dog and cat are hungry.
2. Lexi likes to eat pizza. I like to eat pizza.
 - a. Lexi and I like to eat pizza.
 - b. Lexi likes to eat pizza and I like to eat pizza.
 - c. Lexi and I at pizza.

Q.2 Identify the subject and predicate in each sentence:-

1. The children played in the mud.
2. Ben likes to draw pictures of dolphins.
3. The bicycle needs new tires.
4. We had a picnic in the park.
5. My favourite colour is orange.
6. Rina and radha wnt bowling.
7. The sun rises in the east.
8. John is reading a book.


Q.3 Write two rhyming words:-

1. Wall -
2. Take


Q.1 Write the names of your classmates and teacher to answer the question being each name with capital letter:-

- 1. Who is your class teacher?
- 2. Who sits next to you?
- 3. What is your name?
- 4. Who likes to play at recess?
- 5. Who is your best friend?
- 6. Who has long hair?
- 7. Who has short hair?
- 8. Who likes to read books?

Q.2 Write each noun in a star on the correct side. Remember to begin each proper noun with a capital letter:-



- 1. Atlantic ocean
- 2. Library
- 3. Diwali
- 4. September
- 5. Student
- 6. Santa Claus
- 7. Car
- 8. Desk
- 9. Table
- 10. January



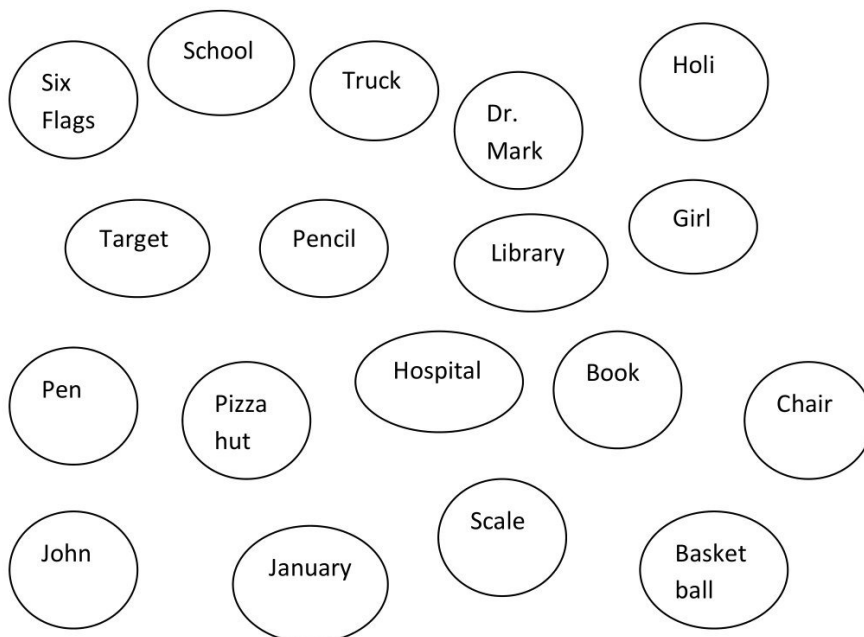
Q.1 Answer the question below. Begin the name of specific places with capital letter:-

1. What is your school name?
2. What is your favourite restaurant ?
3. What is your favourite park?
4. What state do you live in?
5. what city or town do you live in?

Q.2 Find odd one out:-

1. Uncle , Son , Dad , Grandad.
2. Mom , Nephew , Sister , Grandma.
3. Sister , Brother , Sibling , Mom.
4. Wife , Mom , Groom , Bride.

Q.3 Circle the bubble if it contains a proper noun. Put an X through the bubble to pop it if it contains a common noun:-



Q.1

Day	No. of letters delivered
Monday	☒☒☒☒☒☒☒☒☒☒
Tuesday	☒☒☒☒☒☒
Wednesday	☒☒☒
Thursday	☒☒
Friday	☒☒☒☒☒☒☒☒☒

A. How many letters did Mr. Postman deliver on Tuesday?

Ans.

B. On what days did Mr. Postman deliver the same no. of letters and how many?

Ans.

C. If Mr. Postman delivered 6 letters. How would you draw the symbols?

Ans.

Q.2 Match the man with picture:-

1. Fireman



2. Postman



3. Farmer



4. Policeman



PADMAJA H.S.SCHOOL /CLASS-2nd/SUBJECT-ENGLISH /WORK SHEET- 21

Q.1 Let's do fun. Prepare a list of your favourite fruits:-

1. Favourite Fruits :-
2. Bunch fruit name :-
3. Juice fruits :-
4. Your best friends for fruit :-

Q.2 Write 5 wild animals:-

1.
2.
3.
4.
5.

Q.3 Write the names:-

1. Punit loved to eat
2. Rabbit loved to eat.....
3. Monkey loved to eat

Q.4 Write Masculine noun:-

1. Women -
2. Girl -
3. Mother -
4. Bite -
5. Tigress -
6. Mare -
7. Gandmother -
8. Lioness -

Q.5 Write 5 neuter gender:-

1.
2.
3.
4.
5.

Q.1 Write 10 naming words form hospital:-

- | | |
|---------|----------|
| 1. | 2. |
| 3. | 4. |
| 5. | 6. |
| 7. | 8. |
| 9. | 10. |

Q.2 Write opposite words:-

- | | |
|-----------------|------------------|
| 1. Fast - | 2. Big - |
| 3. Low - | 4. Top - |
| 5. Hard - | 6. Hot - |
| 7. Up - | 8. Day - |
| 9. Warm - | 10. True - |

Q.3 Write 10 countable noun:-

- | | |
|---------|----------|
| 1. | 2. |
| 3. | 4. |
| 5. | 6. |
| 7. | 8. |
| 9. | 10. |

Q.4 Put A or An :-

- | | | |
|-------------------|----------------|----------------|
| 1. Chair | 2. Apple | 3. Boy |
| 4. Egg | 5. Mobile | 6. Ant |
| 7. Umbrella | 8. Orange | 9. Pencil |
| 10. Elephant | | |

Q.1 Write 5 uncountable noun:-

- 1.
- 2.
- 3.
- 4.
- 5.

Q.2 Arrange the city in alphabetical order:-

Indore , Bhopal , Mumbai , Jaipur , Dewas , Jabalpur , Shajapur ,
Amritsar , Chennai , Kolkata , Delhi , Sehore , Agra , Pune , Bangalore

.....
.....
.....
.....

Q.3 Put ' A , An or The ' :-

- a. Satluj
- b. Inkpot
- c. Pen
- d. Sun
- e. Mango
- f. Donkey
- g. Egg
- h. Pacific ocean
- i. Car
- j. Ganga
- k. Ice cream
- l. Red flower

Q.4 Write two rhyming words:-

- 1. Boy -
- 2. Cat -
- 3. Try -
- 4. Care -
- 5. Cup -
- 6. Way -
- 7. Wall -
- 8. Take -

PADMAJA H.S.SCHOOL /CLASS-2nd/SUBJECT-ENGLISH /WORK SHEET- 24

Q.1 Circle the words that rhyme with the first word:-

Face	Place , Nose , Race
Boat	Fold , Coat , Float
All	Ball , Call , Will
Cave	Gave , Share , Save
Jump	Happy , Bump , Lump
Day	Stay , Friend , Hay
Hole	Mole , Stole , Pick
Hot	For , Not , Cot
Cook	Hook , Look , Tall
Seed	Feed , Brick , Weed

Q.2 Use the correct word from the word bank to complete the sentence:-

Very , Going , Hair , Bike , New , Look , Rhino , Tree

1. It is hot.
2. Can you ride a
3. I have a dress.
4. at that big boy.
5. Hi ! I am to my school.
6. Can you tie your
7. The pigeon is on the
8. The has a sharp horn.

Q.1 Complete each sequence using a word from the box:-

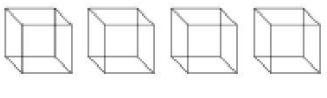
December , Third , Tuesday , four , large , year

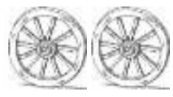
1. Small , Medium
2. Day , Month
3. October , November
4. Sunday , Monday
5. First , Second

Q.2 Write the singular form of each noun using picture :-

1.  -

2.  -

3.  -

4.  -

5.  -

Q.1 Write 5 interrogative sentence:-

Q.2 Prepare a list of your birthday party:-

Menu	Decoration Materials

Q.3 Write the name of female animal:-

- 1. Gander -
- 2. Stallion -
- 3. Cock -
- 4. Tiger -
- 5. Lion -
- 6. Bull -
- 7. Drake -
- 8. Dog -

Q.4 Write the name of animal that starts with following vowel:-

- A -
- E -

PADMAJA H.S.SCHOOL /CLASS-2nd/SUBJECT-ENGLISH /WORK SHEET- 27

Q.1 Add predicate to complete the sentence:-

1. Birds -
2. Plants -
3. Stars -
4. Mother -
5. Friend -
6. Peacock -
7. Dog -
8. Brother -
9. Boys -
10. Lotus -

Q.2 Write 5 electronic item from your home:-

1.
2.
3.
4.
5.

Q.3 Add 'ing' to following words:-

1. Shop -
2. Hit -
3. Fit -
4. Draw -
5. Like -
6. Read -
7. Share -
8. Hang -
9. Play -
10. Close -
11. Dance -
12. Yet -
13. Sing -
14. Jog -
15. Kick -
16. Run -

Q.1 Underline the words which are not noun:-

1. Mother , Eat , Brother , Sister
2. Sibling , Father , jump , grandpa
3. Table , Tall , Boy , Indore
4. Tiny , Chair , Pen , Marker
5. Book , Scale , Copy , Short

Q.2 Which are the names of people who help us:-

1. Who stitches our clothes -
2. Who brings our letter -
3. Who mends our shoes -
4. Who goes to the sea in a ship -
5. Who sells paper, pens and writing material -

Q.3 Write your favourite following things:-

1. Chocolate -
2. Food -
3. Cakes -
4. Ice cream -
5. Biscuits -
6. Chips -

Q. 4 Find out countable and uncountable and write in correct column:-
(Juice, Ink, Ball, Bench, Classroom, Chair, Book, Copy, Milk, Water,
Teacher, Advice, Mobile, Knowledge)

Countable

Uncountable



Q.1 Circle the odd one out:-

1. Apple , Mango , Banana , Capsicum
2. Red , Yellow , Green , Orange
3. Cabbage , Carrot , Radish , Grapes
4. Book , Copy , Doctor , Pen
5. Lawyer , Court , Stethoscope , Judge
6. Boy , Grandfather , Brother , Sister
7. Pink , Red , Yellow , Tiny
8. Jump , Eat , Short , Play
9. Radha , Sita , Small , Jaipur
10. White , Tiles , Brown , Black

Q.2 Name favourite food items that eat at:-

1. Breakfast -
2. Lunch -
3. Dinner -

Q.3 Write 5 pulses name:-

1.
2.
3.
4.
5.

Q.4 Write 3 Salad:-

1.
2.
3.

Q.1 Fill in the blanks using 'is' , 'am' or ' are':-

1. Rahul reading a book.
2. I a good girl.
3. You my Cute friend.
4. We friends.
5. Pooja a beautiful girl.
6. Ram dancing very well.
7. Priya a bad girl.
8. Aman a short boy.

Q.2 Add 'Ly' to the words:-

1. Dead -
2. Important -
3. Precious -
4. Actual -
5. Affecionate -
6. Great -
7. Proper -
8. Anxious -

Q.3 Write 5 lines about your favourite teacher:-

.....

.....

.....

.....

.....

Q.4 Make some sentence using following pronoun:-

1. He -
2. It -
3. She -
4. They -

Q.1 Circle the adjective in each sentence.

1. Tiny , Eat , Play
2. Rahul , Short , Naman
3. Pen , Jump , Beautiful
4. Green , Learn , Watch
5. Read , Active , Write
6. Pencil , Cat , Red
7. Tall , Cow , Box
8. Dog , Long , Fox

Q.2 Underline adjective:

1. She is a strong girl.
2. Neha is a tall girl.
3. He is a brave boy.
4. Cow has big tail.
5. Shivani is a lovely girl.
6. Elephant has tiny tail.
7. Khushi wears blue jeans.

Q.3 Underline the common noun:

1. Delhi is a big city.
2. Put all the books in your bag.
3. Shalu fell down the road.
4. Jaipur is called a 'Pink City'.

Q.4 Write each words abbreviation on the line:

[No. , mt. , wt. , inc. , Ave. , F. , etc. , Lt.]

1. Weight -
2. Number -
3. Fahreheit -
4. Incorporated -
5. Leiutenant -
6. Average -
7. Mountain -

PADMAJA H.S.SCHOOL /CLASS-2nd/SUBJECT-ENGLISH /WORK SHEET- 32

Q.1 Match the phrases to their contractions:

- | | |
|-------------|-------|
| 1. Will not | Don't |
| 2. I am | I've |
| 3. Do not | I'm |
| 4. It is | Won't |
| 5. I have | It's |

Q.2 Hidden in this crossword puzzle are the name of 8 colour name find out them going left to right and top to bottom:

N	U	R	S	E	B	A	P	N
A	G	O	R	M	B	L	U	E
B	N	M	H	Q	R	S	R	G
Y	E	L	L	O	W	Y	P	V
C	G	P	E	R	H	M	L	I
D	I	E	F	A	I	U	E	O
R	H	B	O	N	T	X	Y	L
E	J	C	U	G	E	Z	T	E
D	K	G	R	E	E	N	W	T

Q.3 Write the colour of rainbow:

- | | | |
|---------|---------|---------|
| 1. | 2. | 3. |
| 4. | 5. | 6. |
| 7. | | |

Q.4 Write fruits name of :

1. Red colour -
2. Green colour -
3. Yellow colour -

Q.5 Write vegetable of :

1. Red colour -
2. Green colour -

PADMAJA H.S.SCHOOL /CLASS-2nd/SUBJECT-ENGLISH /WORK SHEET- 33

Q.1 Underline the verb:

- 1. Riya jump into the well.
- 2. Rahul eat an ice-cream.
- 3. Children like to play with toys.
- 4. Rina reads a story book.
- 5. Punit loved to eat cherries.
- 6. Ankit write a story for magazine.
- 7. A thief runs after a policeman.
- 8. Rabbit like to eat carrot.
- 9. Priya sings very well.
- 10. Rina like to play football.

Q.2 Circle the verb :

- a. Dance , Table , Pen
- b. Priya , Eat , Ball
- c. Short , Tall , Jump
- d. Play , Copy , Comb
- e. Ball , Cook , Book
- f. Scale , Stool , Learn

Q.3 Write similar meaning of following:

- a. Beautiful :
- b. Old :
- c. Short :
- d. True :
- e. Big :
- f. Hard :

Q.4 Write the tense in each sentence:

- a. Rahul dance very well.
- b. Piyush loved to eat banana.
- c. Sita is reading a book.
- d. Ansh will sing a song.
- e. The children played in the mud.
- f. The sun sets in the west.

Q.5 Write two sentence of each:

- 1. Present Tense
 - a. a.
- 2. Past Tense
 - a. b.
- 3. Future Tense
 - a. b.

Q.6 Underline the verb and write tense of sentence:

- 1. Priya will sing a song.
- 2. Boys are playing in the park.
- 3. Snow covered the group.
- 4. The girl dance.
- 5. The boy laughs.
- 6. Aman is playing football.

PADMAJA H.S.SCHOOL /CLASS-2nd/SUBJECT-ENGLISH /WORK SHEET- 34

Q.1 Fill in the missing letters for the synonym words below:

- 1. ADORABLE LO.....AB.....E.
- 2. AGO PA.....T.
- 3. ANGRY A.....N.....Y.....D.
- 4. BEAUTIFUL P EY.
- 5. BEGIN S A T.
- 6. BIG H E.
- 7. CENTER M D LE

Q.2 Follow each direction :

Underline all the words that are instruments.

Circle all the words that are seasons.

Put a box around all the words that can be ingredients.

Cross out all things that can be used to magnify.

- Winter Trumpet Binoculars Piano Autumn Flour
- Fall Chocolate Telescope Chicken Violin Summer

Q.3 Use the word in the preposition bank below to complete the sentences:

About , At , In , Under , From , Until , Up

- 1. The dog was hidden the table.
- 2. Ram climbedthe tree.
- 3. The book was frogs.
- 4. We walked homethe store.
- 5. Marry was the only one the park.
- 6. Shital can't wait the weekend.
- 7. My mom is going to pick me from school.

PADMAJA H.S.SCHOOL /CLASS-2nd/SUBJECT-ENGLISH /WORK SHEET- 35

Q.1 Fill in the blanks with the correct conjunction. (And / Or)

1. Orange Yellow are both colors.
2. Circles Squares are both shapes.
3. You can use a pen a pencil.
4. Are you a boy a girl.
5. Lizards can swim walk.
6. Put on your shoes socks.
7. He will get chocolate milk white milk for lunch.

Q.2 Use the word bank below to fill in the blank with correct homophone :

Road , Tail , Hare , Roll , Blue , Two , Wait , Sea , Hole , Cot
Sum , Bean , Peace , Ad

- | | | |
|---------------------------|----------------------------|----------------------------|
| 1. Caught – Ct | 2. Role - o l | 3. Some - u |
| 4. Been – B a | 5. Piece – P c | 6. Whole -o.....e |
| 7. To – T.....o | 8. Weight – W t | 9. Hair – Hr..... |
| 10. Add -d | 11. See – S e | 12. Blew – B U |
| 13. Rod – R.....d | 14. Tale – Ti | |

Q.3 Fill in the blanks with correct preposition from the box:

At , On , In , Near , Behind , Under

1. The cat is the table.
2. The mouse is the table.
3. There is a bowl the table.
4. The mouse the bowl.
5. There is a cheese the bowl.
6. The dog is the door.
7. The dog is hiding the door.

Q.4 Add 's' or 'es':

- | | | |
|-----------------|------------------|-------------------|
| 1. Pod - | 2. Box - | 3. Top - |
| 4. Bus - | 5. Want - | 6. Class - |
| 7. Ball - | 8. Glass - | 9. Splash - |
| 10. Toy - | | |

PADMAJA H.S.SCHOOL /CLASS-2nd/SUBJECT-ENGLISH /WORK SHEET- 36

Q.1 Write 10 instrument name :

1.	6.
2.	7.
3.	8.
4.	9.
5.	10.

Q.2 Write 10 examples of each :

Noun	Verb	Adjective	Pronoun

Q.3 Imagine that you organize a birthday party , what gift you got? Prepare a list.

PADMAJA H.S.SCHOOL /CLASS-2nd/SUBJECT-ENGLISH /WORK SHEET- 37

Q.1 Underline the interjection:

1. Thanks! For the gift.
2. Wow! It's so beautiful.
3. Hurray! We won the match.
4. Alas! We have lost the match.
5. Hey! What's up?
6. Thanks! For your precious time.

Q.2 Circle the words in each row that have same type of rhyme.

Cow	Now , How , Can
Wish	Dish , Cash , Fish
Band	Hand , Sand , Bend
Ring	King , Sing , Bang
Saw	Raw , Paw , Pat

Q.3 Write related word: (For example :- Drink – water)

Cook	
Drive	
Wash	
Fly	
Eat	

Q.4 Draw a beautiful picture of car and colour it:

PADMAJA H.S.SCHOOL /CLASS-2nd/SUBJECT-ENGLISH /WORK SHEET- 38

Q.1 Pick out some new word from following words:

- a. Sibling -
- b. Groom -
- c. Bride -
- d. Pencil -
- e. Orange -
- f. Bicycle -
- g. Indore -
- h. Underline -
- i. Bhopal -
- J. Outdoor -

Q.2 Write 2 related word for following words: (For example :- Write – Story , Essay)

- a. Read - ,
- b. Play - ,
- c. Learn - ,
- d. Fly - ,
- e. Drive - ,
- f. Wash - ,

Q.3 Write 5 healthy food:

- 1.
- 2.
- 3.
- 4.
- 5.

Q.4 Find out noun and verb and write it in correct column:

Ball , Table , Chair , Jump , Dog , Cook , M.S. Dhoni , Delhi , Horse
Mumbai , Play , Cat , Read , Rahul , Dance , Run , Kolkata , Bath ,
Rat , Drive , Bench , Wash , Sofa , Fly , Sing , Learn , Desk , Fan
Speak , Watch , Blanket , Trophy , Suitcase , Bark , Cry , Bat

Noun

Verb



PADMAJA H.S.SCHOOL /CLASS-2nd/SUBJECT-ENGLISH /WORK SHEET- 39

Q.1 Write 5 cities name that you visit in future.

1. 2. 3.
 4. 5.

Q.2 Word Search:

E	H	D	F	A	S	T	T	O	W	L	U
B	A	L	L	B	M	R	A	B	B	I	T
D	J	U	O	F	A	U	L	O	N	G	I
H	K	W	V	A	N	R	L	S	C	T	G
I	M	X	E	Z	G	R	A	P	E	S	E
C	A	L	L	Y	O	C	A	N	T	G	R
M	A	N	T	S	H	O	R	T	U	N	B

[Ball , Call , Tiger , Van , Rabbit , Grapes , Owl , Love , Tall , Fast , Short , Long]

Q.3 Write 5 great leader’s name ?

1. 2. 3.
 4. 5.

Q.4 Make some sentences of tense on following verbs:

Verbs : Eat , Play , Read

Present Tense : 1.Eat :

2. Play :

3. Read :

Past Tense : 1.Eat :

2. Play :

3. Read :

Future Tense : 1.Eat :

2. Play :

3. Read :

PADMAJA H.S.SCHOOL /CLASS-2nd/SUBJECT-ENGLISH /WORK SHEET- 40

Q.1 Make some sentences of tense on following verbs:

Verbs : Cook , Drive , Write

Present Tense : 1.Cook :

2. Drive :

3. Write :

Past Tense : 1.Cook :

2. Drive :

3. Write :

Future Tense : 1.Cook :

2. Drive :

3. Write :

Q.2 Write the form of verbs:

Verb	V1	V2	V3
Cook			
Play			
Eat			
Read			
Walk			
Write			
Drive			
Fly			
Wash			
Sing			
Dance			
Look			

Q.3 Colour the picture :



PADMAJA H.S.SCHOOL /CLASS-2nd/SUBJECT-E.V.S. /**WORK SHEET-01**

Q.1 Go for a walk in any park or garden. Find out and write the names of the plants you see there , put them in the correct columns:-

S.no	Tree shrubs	Herbs	Creepers	Climber
1				
2				
3				
4				

Q.2 Draw a beautiful rose (shrubs) flower:-

Q.3 Draw a beautiful water plant:-

Q.4 Write T for tree, S for shrubs and H for herbs:-



PADMAJA H.S.SCHOOL /CLASS-2nd/SUBJECT-E.V.S. /WORK SHEET-02

- Q.1
- a) Write the two fruits name
 - b) Write the two oil seeds name
 - c) Write the two plants used in decoration
 - d) Write the two plants giving perfume
 - e) Write two plants giving food grains
 - f) Write two plants giving fibers
 - g) Write the two medicinal plants
 - h) Write the two vegetables name
 - i) Write the two dry fruits name
 - j) Write the two shrubs
 - k) Write the two climbers
 - l) Write the two creepers

Q.2 Draw a beautiful water plant:-

PADMAJA H.S.SCHOOL /CLASS-2nd/SUBJECT-E.V.S. /WORK SHEET-03

Q1 Pick out the odd one:-

- 1) Dates, Almonds, Sunflower, Walnuts
- 2) Grapes, Banana, Tomato, Mango
- 3) Sugar, Tea, Coffee, Table
- 4) Rose, Jasmine, Neem, Mangolia
- 5) Oxygen, Tulsi, Neem, Eucalyptus

Q.2 Write the 5 uses of plants:-

- 1)
- 2)
- 3)
- 4)
- 5)

Q.3 Write:-

a. Water Plant	1. 2.
b. Herbs	1. 2.
c. Shrubs	1. 2.
d. Wild Plant	1. 2.
e. Roots we eat	1. 2.
f. Stem as a food	1. 2.
g. Uses of Basil	1. 2.
h. Oil Seeds	1. 2.

Q.1 Fill in the blanks :-

(Herbs, Spinach, Lotus, Wood, Coffee, Paper, Hydrilla)

1. Is an example of water plant.
2. We eat leaves of Plant.
3. Plants also give us and
4. Turmeric and mint are the example of
5. Is the plant which grows completely in water.

Q.2 True and False:-

1. Wood is the plant that grows where it is not needed.
2. Wild plants are planted by a farmer.
3. Creeper grows along the ground.
4. We should pluck flower at public garden.

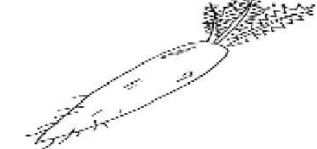
Q.3 Write one difference and one similarity between creeper and climber:-


	Creeper	Climber
Difference		
Similarity		


PADMAJA H.S.SCHOOL /CLASS-2nd/SUBJECT-E.V.S. /WORK SHEET-05

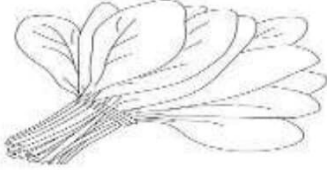
Q.1 Recognize the picture given below and find out which part of plant is


This:-

	Name of vegetable	
	Part of plant	

	Name of vegetable	
	Part of plant	

	Name of vegetable	
	Part of plant	

	Name of vegetable	
	Part of plant	

 <small>© Can Stock Photo</small>	Name of vegetable	
	Part of plant	

PADMAJA H.S.SCHOOL /CLASS-2nd/SUBJECT-E.V.S. /WORK SHEET-06

Q.1 Name the following:-

1. Two roots we eat

2. Two stems we eat

3. Two flower we eat

4. Two vegetables we eat

5. Two fruits we eat

Q.2 Multiple choice question:-


a. Roots grow

1. In the air

2. Under the ground

3. Above the ground

Q.3 Identify the types of plant:-



Q.1 Match the following:-




Hen



Honey Bee



Woolen



Meat

Q.2 Find the circle these words:-

(Stem, Shrubs, Trees, Creeper, Herbs, Water Plant, Climbers)

W	N	M	Z	X	Y	B	Z	M	N	S
A	S	H	R	U	B	S	D	E	R	C
T	C	T	D	N	B	A	C	E	O	L
E	R	A	E	L	N	O	B	N	M	I
R	T	D	N	M	P	M	O	O	T	M
P	U	C	O	O	C	L	P	P	R	B
L	B	H	E	R	B	S	A	C	E	E
A	C	L	M	R	P	N	C	N	S	R
N	C	R	E	E	P	E	R	O	S	S
T	F	A	C	D	B	N	O	P	A	C

Q.1 Draw a beautiful picture of any pet animal in your worksheet:-

Q.2 a) Write milk giving animals.

.....

b) Write egg giving animals.

.....

c) Write animals that give leather.

.....

d) Write animals used in farming.

.....

e) Write animals that carry our loads.

.....

f) Write the names of pet animals.

.....

g) Write the name of wool giving animals.

.....

PADMAJA H.S.SCHOOL /CLASS-2nd/SUBJECT-E.V.S. /WORK SHEET-09



Q.1 Pick out the odd one:-

1. Monkey, Rabbit, Deer, Apple.
2. Mosquito, Ant, Giraffe, butterfly.
3. Monkey, Bear, Lion, Eagle.
4. Fox, Vulture, Jackal, Ant.
5. Herbivorous, Carnivorous, Pet , Omnivorous.

Q.2 Visit a zoo with your family and watch different animals:-

Q.3 Draw scene of a jungle in your worksheet:-

Q.1 Name the domestic animal:-



Q.2 Fill in the blanks with the help of given words:-

(Bird, Reptile, Insect, Butterfly, Sea, Lizard, Parrot, Lion)

- 1) Snake is a
- 2) is a wild animal.
- 3) Whale is a animal.
- 4) is a bird.
- 5) is an insect.
- 6) is a reptile.
- 7) Mosquito is an
- 8) Crow is a

Q.1 Give three examples of each:-

Animals who eat plants only	1. 2. 3.
Animals who eat Only meat or Other animals.	1. 2. 3.
Animal is that Eat both plants And animals.	1. 2. 3.

Q.2 List the common features for given animals:-

a) Cat and Dog	1. 2. 3. 4. 5.
b) Snail and Tortoise	1. 2. 3. 4. 5.

Q.3 Write the name of reptiles:-

.....

PADMAJA H.S.SCHOOL /CLASS-2nd/SUBJECT-E.V.S. /WORK SHEET- 12

Q.1 Write the name of insects:-

1. 2. 3.

Q.2 Write the name of reptiles:-

1. 2. 3.

Q.3 Write the name of big sized wild animals:-

1. 2. 3.

Q.4 Write the name of small sized wild animal:-

1. 2. 3.

Q.5 Write the name of medium sized animal:-

1. 2. 3.

Q.6 Put the tick (✓) mark in the front of the right option:-

1. Which animal are gangrenous?

Wild Pet Domestic

2. Which of these animals is a reptile?

Rat Snake Peacock

3. Which of these is a herbivore?

Fox Elephant Tiger

4. Which of these is an insect?

Dog Deer Mosquito

PADMAJA H.S.SCHOOL /CLASS-2nd/SUBJECT-E.V.S. /WORK SHEET- 13

Q.1 Write the appropriate answer from given word at front of following pictures:-

1. Herbivorous 2. Carnivorous 3. Omnivorous 4. Scavengers
5. Reptiles 6. Insects



.....



.....



.....



.....



.....



.....



.....



.....



.....



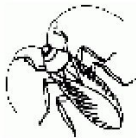
.....



.....



.....



.....



.....



.....



.....

Q.1 With the help of picture answer the given questions:-

1. is a reptile.



2. What is the colour of cap?

a. Red b.Green c. Blue



3. live in jungle and forest.

a. Pet animals b. Wild animals c. Domestic animals

4. Wolf is a

a. Pet animal b. Wild animal c. Domestic animal

5. Where do birds make their nests?

a. On tree b. In the water c. In the air

6. Lizard is a

a. Insect b. Reptile c. Big sized animal

7. Butterfly is a

a. Reptile b. Bird c. Insect


8. Zebra is a

a. Small size animal b. Medium size animal c. Big size animal

Q.1 Write 5 example of means of communication:-

1. 2. 3.
4. 5.

Q.2 Here are given some picture of means of communication. Write the correct name under each picture:-



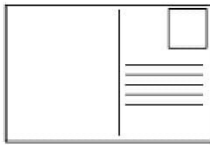
.....



.....



.....



.....



.....



.....



.....

Q.3 Draw a computer with parts of name:-

Q.1 Which means of communication you will use to:-

1. To watch the news
2. To send an e-mail
3. Talk to your friend
4. To read news

Q.2 Name some modern means of communication:-

- 1.
- 2.
- 3.
- 4.
- 5.

Q.3 Match the column:-



Read



Talk



Hear

Q.1 What is the place called where an aero plane lands:-

.....

Q.2 Name any two means of transport used in village:-

a..... b.

Q.3 Write the name of means of transport:-

a..... b.

c. d.

Q.4 Pick out the odd one:-

1. Train 2. Ship 3. Boat

1. Aero plane 2. Helicopter 3. Motorcycle

1. Boat 2. Ship 3. Truck

1. Cycle 2. Motorcycle 3. Aero plane

Q.5 Give some examples of of ach type of transport:-

Land transport

Water tansport

Air transport

PADMAJA H.S.SCHOOL /CLASS-2nd/SUBJECT-E.V.S. /WORK SHEET- 18

Q.1 Find the circle these words:-

N	M	S	A	M	M	N	A	I	A
C	B	C	C	N	C	O	S	Z	E
A	B	O	A	T	A	B	H	O	B
N	O	O	R	Z	B	C	I	N	T
C	P	T	S	X	B	P	P	M	R
T	O	E	N	A	N	I	N	O	A
I	E	R	O	C	D	C	M	C	I
M	O	T	E	R	B	O	A	T	N
T	V	W	M	O	Q	P	N	A	D
H	E	L	I	C	O	P	T	E	R

Boat, Scooter, Motorboat, Helicopter, Ship, Train

Q.2 Pick out the odd one:-

1. Car, truck, train, Helicopter
2. Train, Boat, Ship, Steamer
3. Aroplane, Moterboat, Helicopter, Jetplane
4. Bus, Train, Motercycle, Jetplane

Q.3 Here are given some picture of means of transport write the correct name under each picture:-



.....

Q.1 How do you think transport will be different in the future?

.....
.....

Q.2 If you could invent a new means of transportation, What would you invent:-

.....
.....

Q.3 What is your favourite means of transport and why?

.....
.....

Q.4 Draw a beautiful of picture of means of transport and fill colour:

Q.1 In each of these group one is not like the otherS, circle the things that doesn't belong:-

A) Car , Cycle , Truck , Tree

B) House , Car , banglow , Building

C) Aroplane , Bucket , Ball , Broom

D) Tent , Truck , Table , Basket

Q.2 Join these words and make a meaning full words:-

Air + plane =

Motor + cycle =

Taxi + cab =

Rail + way =

Motor + boat =

Q.3 Draw a beautiful of picture of Aroplane and fill colour:-

Q.1 Write the diseases caused by breathing in impure air:-

- 1)
- 2)
- 3)

Q.2 How to get air polluted?

- 1)
- 2)
- 3)

Q.3 How to reduce air pollution:-

- 1)
- 2)
- 3)

Q.4 Write the properties of wind:-

- 1)
- 2)
- 3)

Q.5 Write the types of pollution:-

- 1)
- 2)
- 3)

Q.1 Match the following:-

- | | |
|-------------------|--------------|
| Gren plant | Storm |
| Air pollution | Wind |
| Gently moving air | Breeze |
| Fast moving air | Fresh air |
| Very fast moving | Polluted air |



Q.2 Write the types of pollution:-

- 1)
- 2)
- 3)

Q.3 What is air pollution?

- 1)
- 2)
- 3)

Q.4 Look at the picture carefully they all need To move:-



Q.1 Select the words and fill in th blanks:-

(Windy, Cloudy, Snowy , Weather , Sunny)

1. The temprature is very low in a day
2. It was blowing very much yesterday. It was
3. We can't see the sun in a day
4. It's today. Why don't we go to the beach.
5. The is terrible today, It's an awful rainy day.

Q.2 Which type of pollution:-



.....



.....

Q.1 Multiple choice question:-

a. water is not used to drinking



Well



Handpump



Sea

b. Carrot is a

Root

Stem

Flower

c. Which of the following is a seed:-

Corn

Potato

Tomato

Q.2 Identify the flower in the picture:-



Q.3 Where should we keep clean water:-

- a. In the dirty container.
- b. In the clean and close container.
- c. In an open container.

Q.1 Water uses:-

(Brushing teeth , Drinking , Bathing , Washing hand , Flushing toilet)



.....



.....



.....



.....



.....

Q.2 What happened:-



+



=

.....



+



=

.....



+



=

.....



+



=


.....

Q.1 True and false:-

1. We get water from the rain. ()
2. Snow on mountain melts and flow into the ponds. ()
3. We built wells to use rain water. ()
4. We can collect the rain water in the drums. ()
5. Drinking dirty water can make us ill. ()

Q.2 Name the following:-

(Sea , Glacier , Lake , Pond , Handpump , River , Well , Waterfall)



.....



.....



.....

Q.1 Choose the correct words from the help box and fill in the blanks:-

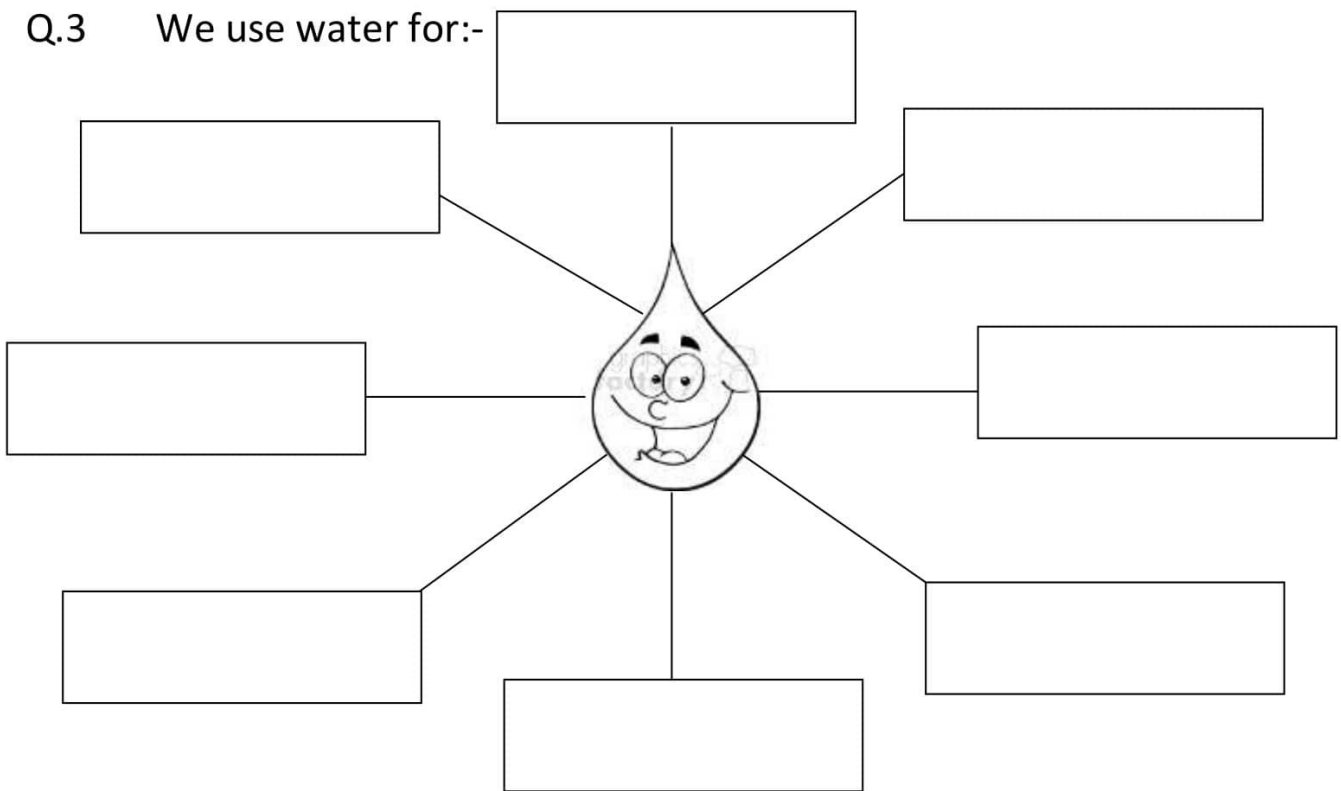
Wash , Meals , Health , Chew

1. We should our food properly.
2. Toffess , chips and cold drinks ar not good for
3. We should have our at fixed time.
4. We should our hands before and after meal.

Q.2 True and false:-

- a. We should buy food from road venders. ()
- b. Milk is a complete food. ()
- c. We have two meals a day. ()

Q.3 We use water for:-



Q.1 Why is water so important on earth:-

.....

.....

.....

.....

Q.2 is the basic need of our life:-

Stones Water Rock

Q.3 Which of the following is used as source of drinking water:-



Puddle water



Tab water



River water

Q.4 Identify the figure:-

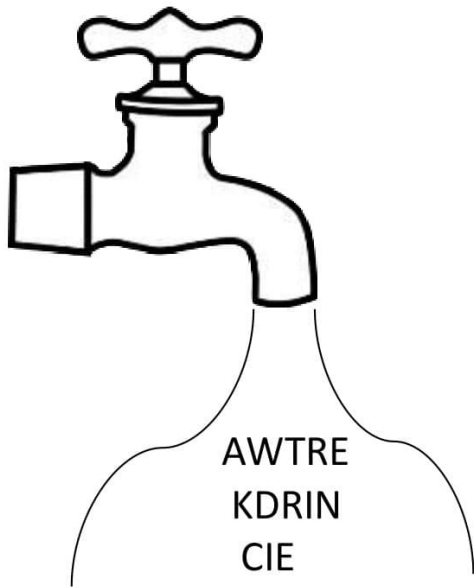


.....

.....

.....

Q.1 Unscramble the letters:-



AWTRE
KDRIN
CIE
VPAOR
RVIER
ELAK

1.
2.
3.
4.
5.
6.


Q.2 My water sources:-



.....

.....

.....



.....

.....

PADMAJA H.S.SCHOOL /CLASS-2nd/SUBJECT-E.V.S. /**WORK SHEET- 30**

Q.1 Write the name of three of your friends who lives in your neighbour:-

1. 2. 3.

Q.2 Write the names of four things made by a carpenter in your class:-

1. 2.
3. 4.

Q.3 Write one word for each of the following:-

1. A person who looks after a patient
2. mends our shoes.
3. grows food grains and vegetable.
4. stitches our clothes.
5. A maintain law and order in the city.

Q.4 Write the names of 'Our Helpers':-

(The people who do many types of work for us)

.....
.....
.....
.....

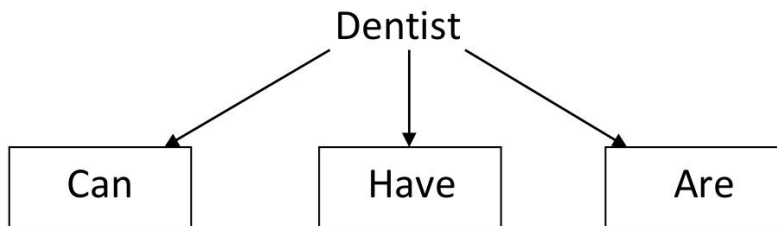
Q.1 Match work with what they are called:-

Work	What they are called
1. Cooking food	Doctor
2. Selling fruits	Shopkeeper
3. Building a home	Mechanic
4. Treating patients	Fruit seller
5. Repair scooters and cars	Builder

Q.2 Write two work name that you do at your home:-

1. 2.

Q.3



.....

.....

.....

.....

Q.4 What special clothes wear following:-

Proffesion	Clothes
1. Doctors	
2. Soldiers	
3. Police man	
4. Students	
5. Lawer	

PADMAJA H.S.SCHOOL /CLASS-2nd/SUBJECT-E.V.S. /WORK SHEET- 32

Q.1 Write the name of three of your friends who live in your Neighborhood?

1. , 2. , 3.

Q.2 Write the names of four things made by a carpenter in your class?

1. , 2. , 3. , 4.

Q.3 Write one word for each of the followings:

1. A person who after a patient

2.mends our shoes.

3.grows food grains and vegetables.

4.stitches our clothes.

5. Amaintain law and order in the city.

Q.4 Write the names of " Our Helpers".

[The people who do many types of work for us]

.....

.....

.....

.....

Q.5 Draw a letter box and fill the colour it :

PADMAJA H.S.SCHOOL /CLASS-2nd/SUBJECT- E.V.S. /WORK SHEET- 33

Q.1 Write the name of some useful neighborhood services. :

.....
.....
.....
.....
.....
.....

Q.2 Write the colour of letter box.

.....

Q.3 Where would you go if . :

1. Your stomach is aching
2. You want to post a letter
3. You want to report a stolen cycle
4. You want to withdraw money from your account in the night
5. You want to buy some fruits
6. You want to open a saving account

Q.4 Match the following :

- | | |
|--------------------|------------|
| 1. Postman | Train |
| 2. Market | Letter Box |
| 3. Police station | Shops |
| 4. Fire station | Police |
| 5. Doctor | Fireman |
| 6. Railway station | Hospital |

PADMAJA H.S.SCHOOL /CLASS-2nd/SUBJECT- E.V.S./WORK SHEET- 34

Q.1 Fill in the blanks with the help of suitable picture from below:

1. The gives us medicines.
2. We drop our letters in the
3. The grows crops for us.
4. The cuts our hairs.
5. The catches thieves.



Q.2 Community helpers word search:

N	U	R	S	E	C	D	Z	X	T	H
Z	U	R	U	H	W	Z	P	O	T	E
P	W	B	U	I	L	D	E	R	V	M
L	Q	L	L	C	C	J	U	P	O	I
U	V	R	Y	R	Y	X	D	V	P	L
M	K	Y	J	W	U	K	Y	J	Q	K
B	R	F	I	R	E	M	A	N	U	M
E	Q	A	E	J	H	Q	E	U	R	A
R	R	F	A	R	M	E	R	E	X	N

Word clues: Plumber, Nurse, Builder, Milkman, Farmer, Fireman

Q.3 Identify the clothes and name the season.



PADMAJA H.S.SCHOOL /CLASS-2nd/SUBJECT- E.V.S./WORK SHEET- 35

Q.1 Fill in the blanks with the given words:

[Warm , Protect , Cotton , Raincoat , Gumboots]

1. Clothesus from heat , cold and rain.
2. We wear clothes in summer.
3. Woolen clothes keep us
4. We use a andwhen it rain.

Q.2 What comes after winter?

.....

Q.3 You need an umbrella when its ?

.....

Q.4 Dog are often afraid when its ?

.....

Q.5 When leaves turn red its ?

.....

Q.6 See the picture and name the four seasons:



.....



.....



.....



.....

PADMAJA H.S.SCHOOL /CLASS-2nd/SUBJECT- E.V.S./WORK SHEET- 36

Q.1 Name two kinds of permanent houses:

1. 2.

Q.2 Name four materials used for building a houses:

1. , 2. , 3. , 4.

Q.3 What is an igloo?

.....

Q.4 What kinds of roofs do houses on mountains have?

.....

Q.5 What kinds of roofs do houses on plains have?

.....

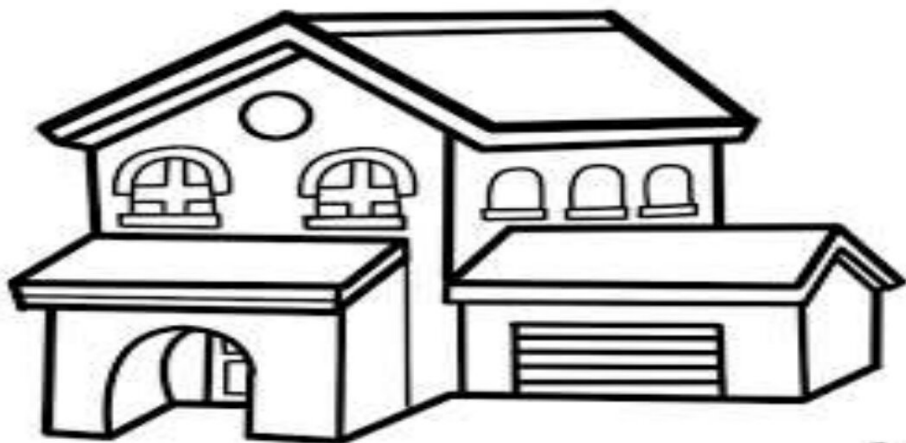
Q.6 Name the following :

1. A house that can float on a river
2. A house that can be folded and carried along

Q.7 What is Bungalow:

.....

Q.8 Colour the picture:



h

PADMAJA H.S.SCHOOL /CLASS-2nd/SUBJECT- E.V.S./WORK SHEET- 37

Q.1 When are igloos constructed?

.....

Q.2 What kind of people live in bungalow?

.....

Q.3 Where are bungalow mostly found?

.....

Q.4 What is bungalow ?

.....

Q.5 What kind of house is an igloo?

.....

Q.6 A house built over a river or lake.

.....

Q.7 A kind of home in a building in cities.

.....

Q.8 A home made with mud and dirt.

.....

Q.9 A movable house with mud and dirt.

.....

Q.10 A home for kings and queens.

.....

Q.11 Make a beautiful picture of 'Houseboat' and colour it.

PADMAJA H.S.SCHOOL /CLASS-2nd/SUBJECT- E.V.S./WORK SHEET- 38

1. Where do I live ?

My favourite place in :
.....
.....
.....
.....

My address is :
.....
.....
.....
.....

I live in :
.....
I like living here because;
.....
.....

2. Look at the following items write their names in the correct boxes where they are to be kept at home:

Television , Bed , Table , Dining Table , Utenensils , sofa , Chair , Refrigerator , Gas stove , Soap , Bookshelf , Bucket , Tea mug , Night lamp Pen holder , Computer .

i) Drawing Room

.....
.....
.....
.....

ii) Bed Room

.....
.....
.....
.....

iii) Dining Room

.....
.....
.....
.....

iv) Study Room

.....
.....
.....
.....

v) Kitchen

.....
.....
.....
.....

vi) Bath Room

.....
.....
.....
.....

PADMAJA H.S.SCHOOL /CLASS-2nd/SUBJECT- E.V.S./WORK SHEET- 39

Q.1 Write True or False:

- i) Food helps us to grow
- ii) We see with our ears
- iii) We must eat healthy food.
- iv) Junk food makes us healthy.
- v) We feel things with our skin.

Q.2 Name the following :

1. Food eatable made from milk.

- i.
- ii.
- iii.
- iv.

2. Food vegetables you like to eat.

- i.
- ii.
- iii.
- iv.

3. Four parts of our body.

- i.
- ii.
- iii.
- iv.

4. Four food items we get from animals.

- i.
- ii.
- iii.
- iv.

Q.3 Give answer:

1. Foods that help us to grow.

2. Foods that give us energy.

3. Foods that keep us healthy.

4. We get food from which of the following. i. Air ii. Water iii. Plants

5. which of these food gives us energy. i. Wheat ii. Fish iii. Fruits

6. Which type of the following food item if consumed more can make us sick.

- i. Milk & Green vegetables
- ii. Fruits & Dry fruits
- iii. Cold drinks & Pizza ,burger

PADMAJA H.S.SCHOOL /CLASS-2nd/SUBJECT- E.V.S./WORK SHEET- 40

Q.1 Complete the following :

1. We eat food because it.
2. Animals gives us.
3. Plants give us food like.

Q.2 Circle the correct answer:

1. We have dinner in the. a) Morning b) Night
2. We get fruits and vegetables from. a) Animals b) Plants
3.is used to make chapattis.
a) Pulses b) Wheat flour

Q.3 Name and draw two food item of each other kind:

Food from plants	Food from animals

PADMAJA H.S.SCHOOL /CLASS-2nd /SUBJECT- HINDI/WORK SHEET-1

प्र.१ स्वर लिखिए ।

.....
.....

प्र.२ व्यंजन लिखिए ।

.....
.....
.....
.....

प्र.३ बिना मात्रा के ३० शब्द बनाइये ।

.....
.....
.....
.....

प्र.४ 'आ' की मात्रा वाले २० शब्द लिखिए ।

.....
.....

प्र.५ आम व घर का चित्र बना कर रंग भरिये ।

PADMAJA H.S.SCHOOL /CLASS-2nd /SUBJECT- HINDI/WORK SHEET-2

प्र.१ 'घ','च','ज','ट',त, अक्षर से शुरू होने वाले 10-10 शब्द बनाइये ।

घ -

च -

ज -

त -

प्र.२ ई, ऊ, ऋ, ऐ, औ, की मात्रा से शब्द बनाइये ।

ई -

ऊ -

ऋ -

ऐ -

औ -

प्र.३ संयुक्त व्यंजन लिखिए ।

.....

प्र.४ अक्षरों को जोड़ कर शब्द बनाइये ।

१. क + म + ल = २. प + न + घ + ट =

३. स + इ + क = ४. अ + ज + ग + र =

५. ब + र + ग + द = ६. थ + र + म + स =

७. क + ल + श = ८. ख + ट + म + ल =

९. श + ल + ग + म = १०. अ + द + र + क =

PADMAJA H.S.SCHOOL /CLASS-2nd /SUBJECT- HINDI/WORK SHEET-3

प्र.१ अनुस्वार (◌ं) और विसर्ग (:) की मात्रा लगा कर शब्द बनाइये ।

.....
.....

प्र.२ संयुक्त व्यंजन से 10-10 शब्द बनाइये ।

क्ष -

त्र -

ज्ञ -

श्र -

प्र.३ चित्र देख कर नाम लिखिए ।



.....



.....



.....



.....



.....



.....

प्र.४ 'त्रिशूल' का चित्र बना कर रंग भरो ।

PADMAJA H.S.SCHOOL /CLASS-2nd /SUBJECT- HINDI/WORK SHEET-4

प्र.१ निम्न लिखित शब्दों से मिलते जुलते 10-10 शब्द लिखों ।

आम -

अमन -

धोना -

दरी -

गाजर -

खटिया -

प्र.२ भिन्न शब्दों को छाँट कर लिखिए ।

सांप , अजगर , शेर ,मगर -

शेर , चीता , भालू , बकरी -

तोता , मैना , कोयल , कुत्ता -

कम्पास , स्केल , रबर , गेंद -

क्रिकेट , फुटबॉल , हॉकी . कैरम बोर्ड -

प्र.३ घर के बाहर खेले जाने खेलो के नाम लिखों ।

.....

.....

प्र.४ गर्मियों की छुट्टियों में आपने घर में बैठ कर कौन कौन से खेल खेलें ?

.....

.....

PADMAJA H.S.SCHOOL /CLASS-2nd /SUBJECT- HINDI/WORK SHEET-5

प्र.१ सही जोड़ी मिलाइये ।

ताकत	विद्यालय
दौड़	पहला
स्कूल	सुबह
प्रथम	रौशनी
प्रातः काल	भागना
प्रकाश	शक्ति

प्र.२ निम्न लिखित अशुद्ध वाक्यों को शुद्ध वाक्यों में लिखिए ।

१. आज मैंने नहीं किया गृह कार्य ।

.....

२. गाय का ताकतवर दूध होता है ।

.....

३. मुझे चाय चाहिए एक कप ।

.....

४. आप कब लौटेंगे घर ?

.....

५. परीक्षा हिंदी की कब है ?

.....

६. वह पहुंचा नहीं समय पर ।

.....

PADMAJA H.S.SCHOOL /CLASS-2nd /SUBJECT- HINDI/WORK SHEET-6

प्र.१ पांच जंगली जानवरो के नाम लिखों ।

.....

प्र.२ जीव जंतु की आवाजें मिलाइये ।

- | | |
|-----------|---------------|
| १. तोता | म्याऊ - म्याऊ |
| २. कोयल | रैंकता |
| ३. मेंढक | टे - टे |
| ४. मुर्गा | कुहू - कुहू |
| ५. बन्दर | टर्र - टर्र |
| ६. बिल्ली | कुकडू - कू |
| ७. गधा | हुप्प - हुप्प |

प्र.३ क्या आपने चिड़िया घर देखा है ? वहां पर आपने कौन कौन से जानवर , पक्षी देखे ?

.....
.....
.....

प्र.४ मोर कब नाचता है ?

.....

प्र.५ मोर का चित्र बनाकर रंग भरिये ।

PADMAJA H.S.SCHOOL /CLASS-2nd /SUBJECT- HINDI/WORK SHEET-7

प्र.१ आपके परिवार में कितने सदस्य हैं ?

.....

प्र.२ आप कितने भाई बहिन हैं ?

.....

प्र.३ आपके पिताजी क्या करते हैं ?

.....

प्र.४ आपकी माताजी क्या करती हैं ?

.....

प्र.५ आप गर्मियों की छुट्टियों में कहाँ कहाँ घूमने गए थे ?

.....

प्र.६ कौन से मौसम में आप छाता लगते हो ?

.....

प्र.७ कौन से मौसम में आप ऊनी कपड़े पहनते हो ?

.....

प्र.८ कौन से मौसम में आप सूती व हलके रंग के कपड़े पहनते हो ?

.....

प्र.९ आपको कौन सा मौसम अच्छा लगता है ?

.....

प्र.१० छाते का चित्र बनाकर उसे कलर पेपर से सजाइये ।

PADMAJA H.S.SCHOOL /CLASS-2nd /SUBJECT- HINDI/WORK SHEET-8

प्र.१ आप सुबह कितने बजे उठते हो ?

.....

प्र.२ क्या आपको कोई सुबह उठता है या आप खुद उठते हो ?

.....

प्र.३ सुबह उठने पर सबसे पहला कार्य कौन सा करते हो ?

.....

प्र.४ दिशाएँ कितने प्रकार की होती हैं ?

.....

प्र.५ सूर्य कौन सी दिशा से निकलता है ?

.....

प्र.६ सूर्य कौन सी दिशा में अस्त होता है ?

.....

प्र.७ सवेरे जल्दी उठने से क्या होता है ?

.....

प्र.८ सूरज का चित्र बनाकर रंग भरिये ।

PADMAJA H.S.SCHOOL /CLASS-2nd /SUBJECT- HINDI/WORK SHEET-9

प्र.१ माँ पर पांच लाईने लिखिए ।

.....
.....
.....
.....
.....

प्र.२ आप की माँ आपके लिए कौन कौन सा कार्य करती है ?

.....
.....

प्र.३ आप की मम्मी की मम्मी आपकी क्या लगती है ?

.....

प्र.४ क्या आप अपनी मम्मी के लिए कोई कभी कार्य करते हों ?

.....
.....

प्र.५ जब आप अपने स्कूल से वापस जाते हो तो इसके बाद कौन कौन से कार्य करते हो ?

.....

प्र.६ घर में आप अपने से बड़ो का आदर की प्रकार करते हों ?

.....
.....

प्र.७ चिड़िया का चित्र बना कर उसमे रंग भरों ।

PADMAJA H.S.SCHOOL /CLASS-2nd /SUBJECT- HINDI/WORK SHEET-10

प्र.१ क्या आपके घर पर पेड़ पौधे लगे हुए हैं ? यदि लगे हैं तो उनके नाम लिखिए ।

.....

प्र.२ पांच सुगन्धित फूलों के नाम लिखिए ।

.....

प्र.३ कमल का फूल कहाँ खिलता है ?

.....

प्र.४ हम घर में कमल का फूल कौन से त्यौहार पर लाते हैं ?

.....

प्र.५ पांच रंगों के गुलाबों के नाम लिखिए ।

.....

प्र.६ आपको कौन से रंग का गुलाब अच्छा लगता है ?

.....

प्र.७ फूलों के क्या क्या उपयोग हैं ?

.....

.....

प्र.८ पांच फूलों के चित्र चिपकाइये ।

PADMAJA H.S.SCHOOL /CLASS-2nd /SUBJECT- HINDI/WORK SHEET-11

प्र.१ पांच छायादार वृक्षों के नाम लिखो ।

.....

प्र.२ पेड़ों से हमें क्या क्या मिलता है ?

.....

प्र.३ कौन सा पेड़ पुरे २४ घंटे हमें जीवनदायक वायु (ऑक्सीजन)प्रदान करता है ?

.....

प्र.४ आपके घर में लकड़ी से बानी हुई कौन कौन सी वस्तुएँ हैं ?

.....

प्र.५ नीम की पट्टी का स्वाद कैसा होता है ?

.....

प्र.६ कौन सा वृक्ष औषधि बनाने के काम में आता है ?

.....

प्र.७ आम के पेड़ पर कौन सा पक्षी कूकता है ?

.....

प्र.८ आपके घर में पूजन के समय कौन से पेड़ की पत्तियाँ उपयोग में लायी जाती हैं ?

.....

प्र.९ वृक्ष का चित्र कलर पेपर को काट कर चिपका कर बनाए ।

PADMAJA H.S.SCHOOL /CLASS-2nd /SUBJECT- HINDI/WORK SHEET-12

प्र.१ पांच फलो के नाम लिखकर उनके चित्र चिपकाये ।

प्र.२ आपको कौन सा फल पसंद है उसका चित्र बनाइये ।

प्र.३ अमृत फल कौन से फल को कहा जाता है ?

.....

प्र.४ फलो को खाने से हमें क्या क्या लाभ है ?

.....

प्र.५ कौन कौन से फल पकने के बाद पीले रंग के हो जाते है ?

.....

.....

प्र.६ आम का चित्र बना कर कलर करिए ।

PADMAJA H.S.SCHOOL /CLASS-2nd /SUBJECT- HINDI/**WORK SHEET-13**

प्र.१ निचे दिए गए शब्दों में से प्राणी , स्थान तथा वस्तु के नाम छाँटकर लिखिए ।

(शेर , मेज , दिल्ली , स्कूल , मैना , गुड़िया , राजा , पार्क , बाजार , फूल , रोहित , सड़क , थैला ,
गिलास ,तितली , मच्छर , आगरा , पुस्तक , टी.वी. , देवास , टेकरी , शिवानी , चिड़ियाघर ,
भोपाल , सोफा , पलंग ।)

प्राणी	स्थान	वस्तु

प्र.२ कोई पांच स्थान और वस्तु के चित्र काट कर चिपकाएं ।

PADMAJA H.S.SCHOOL /CLASS-2nd /SUBJECT- HINDI/**WORK SHEET-14**

प्र.१ नीचे लिखे शब्दों में से पुल्लिंग शब्द पर गोला बनाइये ।

कुत्ता नदी शेर नौकरानी बाघिन

माता घोड़ी चूहा पति गाय

लड़का बकरी शेरनी किसान चिड़िया

चुहिया शिकारी भैंस बैल गुड़िया तोता

मोर बकरा हिरन लोमड़ी मोरनी

प्र.२ नीचे लिखे शब्दों के लिंग बदल कर लिखिए ।

मामा राजा

बिल्ला नर

बन्दर पिता

छात्र मुर्गा

प्र.३ निम्न शब्दों के लिंग पहचान कर इनके आगे पुल्लिंग या स्त्रीलिंग लिखिए ।

गुड्डा बेटा

राजकुमारी वधु

घोडा बैल

नेत्री डिबिया

नायक पाठक

कवयित्री गिलकी

प्र.१ ऋतुएँ कितने प्रकार की होती है ?

.....

.....

प्र.२ निचे दिए गए शब्दों को उचित स्थान पर लिखिए ।

“ मफलर , रेनकोट , सुराही , ठिठुरना , बादल , पसीना , धूप , लू , बाढ़ , कूलर ,
मोर का नाचना , सूतीवस्त्र , स्वेटर , छाता , कोट , झूला , आइसक्रीम” ।

गर्मी	वर्षा	जाड़ा

प्र.३ "ता" जोड़ कर नए शब्द बनाइए ।

महान + ता =

सरल + ता =

स्वच्छ + ता =

निर्मल + ता =

कर्मठ + ता =

कठोर + ता =

दुर्बल + ता =

निकट + ता =

प्र.१ कीट पतंगों के नाम लिखिए ।

.....
.....

प्र.२ मच्छर के काटने से किस प्रकार बचा जा सकता है ?

.....
.....

प्र.३ मक्खी किस प्रकार से बीमारिया फैलाती है ?

.....
.....

प्र.४ तितली क्या पीती है ?

.....
.....

प्र.५ तितली का चित्र बना कर उसमे रंग भरें ।

PADMAJA H.S.SCHOOL /CLASS-2nd /SUBJECT- HINDI/WORK SHEET-17

प्र.१ एक संख्या बताने वाले नामों के बॉक्स में हरा रंग और अनेक संख्या बताने

वाले शब्दों में नीला रंग करें ।

किताब	पतंगे	लड़का	नदियाँ
चीटियां	चिड़िया	कहानी	बच्चे
गेंद	बच्चियाँ	तोते	संतरे
सब्जियां	पेंसिल	औरतें	गाय

प्र.२ निम्न लिखित शब्दों के बहुवचन लिखिए ।

कुत्ता पौधा बिल्ली

घर नदी पुस्तक

राखी पेंसिल लड़का

रोटी घोड़ा थाली

कली साइकिल जाड़ा

PADMAJA H.S.SCHOOL /CLASS-2nd /SUBJECT- HINDI/WORK SHEET-18

प्र.१ सर्वनाम किसे कहते हैं ?

.....

प्र.२ सर्वनाम के भेद लिखिए ।

.....

प्र.३ सर्वनाम पर गोला बनाइए ।

१. मैं कल स्कूल जाऊंगा ।
२. हम सब चिड़ियाघर जा रहे हैं ।
३. वे कल का मैच हार गए ।
४. तुम टेबल पर मत बैठो ।
५. वह कल नानी के घर गया है ।

प्र.४ दिए गए वाक्यों में कौन सा सर्वनाम है बताइए ।

१. यह गेंद किसकी है ? ()
२. सब्जी में कुछ गिर गया । ()
३. मुझे उसने भेजा है । ()
४. घर में कोई आया है । ()

प्र.५ संज्ञा पर गोला बनाइए ।

१. परी की फ्रॉक सुन्दर है ।
२. कल हम वेद के घर गए थे ।
३. मम्मी मंदिर गई है ।
४. यह टेबल टूटी हुई है ।
५. रीचा कल सोफे पर से गिर गई ।

PADMAJA H.S.SCHOOL /CLASS-2nd /SUBJECT- HINDI/WORK SHEET-19

प्र.१ गांव में किस प्रकार के घर होते हैं ?

.....

प्र.२ कच्चे घर किन किन चीजों से बनाए जाते हैं ?

.....

प्र.३ शहर में किस प्रकार के घर होते हैं ?

.....

प्र.४ आप कहाँ रहना पसंद करोगे गांव या शहर ? और क्यों ?

.....

प्र.५ नारियल के पेड़ अधिक मात्रा में कहाँ लगाए जाते हैं ?

.....

प्र.६ नारियल का उपयोग कहाँ कहाँ किया जाता है ?

.....

.....

प्र.७ नारियल का चित्र बना कर रंग भरिये ।

प्र.१ चाँद कौन सी तिथि को दिखाई नहीं देता ?

.....

प्र.२ चाँद पर जाने वाले प्रथम व्यक्ति कौन थे ?

.....

प्र.३ चाँद की रौशनी क्या प्रदान करती है ?

.....

प्र.४ चाँद और सूरज में क्या अंतर है ?

.....

प्र.५ क्या चन्द्रमा हमेशा एक ही आकर में रहता है ?

.....

प्र.६ चाँद पर कविता की चार पंक्तियाँ लिखिए ।

.....

.....

.....

.....

PADMAJA H.S.SCHOOL /CLASS-2nd /SUBJECT- HINDI/WORK SHEET-21

प्र.१ दस सब्जियों के नाम लिखिए और उनके चित्र बना कर या चित्र काट कर चिपकाइये ।

प्र.२ आप को कौन सी सब्जी पसंद है और क्यों ?

.....

प्र.३ अगर हम सब्जियां नहीं खाएंगे तो क्या हमारा शरीर स्वस्थ रहेगा ?

.....

प्र.४ चार सब्जियों के नाम लिखों जो कि फलियों के रूप में मिलती है ।

.....

प्र.५ बैंगन और हरी पत्तेदार सब्जियों से हमारे शरीर को कौन से तत्व मिलते हैं ?

.....

प्र.६ हरी पत्ते के रूप में मिलने वाली सब्जियों के नाम लिखों ।

.....

प्र.७ बैंगन का चित्र बनाकर उसमें रंग भरिये ।

PADMAJA H.S.SCHOOL /CLASS-2nd /SUBJECT- HINDI/WORK SHEET-22

प्र.१ रंगों के नाम लिखिए ।

.....
.....

प्र.२ रंगों का त्यौहार कौन सा होता है ?

.....

प्र.३ रंगों का त्यौहार कब मनाया जाता है ?

.....

प्र.४ आपको कौन सा रंग पसंद है ?

.....

प्र.५ आपके पसंद के रंगों की कौन कौन सी चीज़ें हैं आपके पास उनके नाम लिखिए ।

.....

प्र.६ होली के त्यौहार पर आप कौन कौन से रंगों से होली खेलते हैं ?

.....

प्र.७ होली पानी के रंगों से खेलना चाहिए या सूखे रंगों से ? और क्यों ?

.....

प्र.८ पिचकारी का सुन्दर चित्र बना कर उसमें रंग भरिये ।

PADMAJA H.S.SCHOOL /CLASS-2nd /SUBJECT- HINDI/WORK SHEET-23

प्र.१ भारत में कौन कौन से त्यौहार मनाये जाते है ?

.....
.....

प्र.२ आपको कौन सा त्यौहार पसंद है ?

.....

प्र.३ राखी का पर्व कब मनाया जाता है ?

.....

प्र.४ राखी पर आपकी बहन आप को किस प्रकार से राखी बांधती है ?

.....

प्र.५ राखी का त्यौहार कौन सी ऋतु में आता है ?

.....

प्र.६ राखी के त्यौहार पर आप अपनी बहन को क्या तोहफा देते हो एवं किस बात का वचन देते हो ?

.....

प्र.७ राखी का चित्र बनाइये या बनी हुई राखी चिपकाइये ।

PADMAJA H.S.SCHOOL /CLASS-2nd /SUBJECT- HINDI/WORK SHEET-24

प्र.१ आपके के परिवार का मुखिया कौन है ?

.....

प्र.२ आपके परिवार के मुखिया का नाम क्या है ?

.....

प्र.३ आपके परिवार के मुखिया कितने वर्ष के है ?

.....

प्र.४ वे क्या करते है ?

.....

प्र.५ आपका नाम क्या है ?

.....

प्र.६ आप कितने वर्ष के हो ?

.....

प्र.७ आपके पिताजी का नाम क्या है ?

.....

प्र.८ आपकी माता का क्या नाम है ?

.....

प्र.९ आपके पिताजी क्या काम करते है ?


.....

प्र.१० आप बड़े हो कर क्या बनना चाहते हो ?

.....

प्र.११ आपके घर का पता व फ़ोन नंबर लिखिए ।

प्र.१ चित्र देख कर रिक्त स्थानों की पूर्ति कीजिये सही शब्दों से ।



१. यह एक है ।
२. गाय एक पशु है ।
३. गाय की टाँगे होती है ।
४. गाय के सींग होते हैं ।
५. इसकी पूँछ है ।
६. गाय के कान होते हैं ।
७. गाय खाती है ।

प्र.२ आपके विद्यालय का नाम क्या है ?

.....

प्र.३ आपके विद्यालय की प्राचार्या का नाम क्या है ?

.....

प्र.४ एक विद्यालय का सुन्दर चित्र बनाइये या चिपकाइये ।

PADMAJA H.S.SCHOOL /CLASS-2nd /SUBJECT- HINDI/WORK SHEET-26

प्र.१ सही जोड़ी मिलाइये ।

कपूत	मृत्यु
असली	निर्जीव
आदान	सौभाग्य
अनुकूल	सपूत
उपस्थित	नकली
सजीव	प्रदान
लोक	अवनति
उन्नति	प्रतिकूल
जन्म	परलोक
दुर्भाग्य	अनुपस्थित

प्र.२ विलोम शब्द ।

गरम - हँसना - खट्टा - काला -
लम्बा - अंदर - अमीर - दिन -
अच्छा - शाम - धरती - सुर -

प्र.३ स्वर व्यंजन छाँटिए ।

ट, ख, ए, ज, इ, ऋ, ग, न, प, आ, उ, ऐ, ष, म, य, व, छ, ण,

अ, क, औ, ड, ढ, ध, द

स्वर

व्यंजन

PADMAJA H.S.SCHOOL /CLASS-2nd /SUBJECT- HINDI/WORK SHEET-27

प्र.१ हमारे लिए अनाज कौन उगता है ? उत्तर बताते हुए उसका चित्र बनाइये / चिपकाइये ।

प्र.२ मध्यप्रदेश को सोया प्रदेश क्यों कहा जाता है ?

.....

प्र.३ मध्यप्रदेश की मिट्टी का रंग कौन सा है ?

.....

प्र.४ रबी की फसलें किसे कहते हैं ? नाम बताइये ।

.....

प्र.५ खरीफ की फसलों के नाम बताइये ?

.....

प्र.६ रुई हमें किस चीज़ से प्राप्त होती है ?

.....

प्र.७ शक्कर किससे बनाई जाती है ?

.....

प्र.८ शक्कर का उपयोग हम किस किस चीज़ों को बनाने में करते हैं ?

.....

.....

PADMAJA H.S.SCHOOL /CLASS-2nd /SUBJECT- HINDI/WORK SHEET-28

प्र.१ पानी हमें कहाँ कहाँ से मिलता है ?

.....
.....

प्र.२ पानी के क्या क्या उपयोग हैं ?

.....
.....

प्र.३ हमें कैसा पानी पीना चाहिए ?

.....

प्र.४ पीने के लिए नल का पानी उपयुक्त है या बोरिंग का ? और क्यों ?

.....
.....

प्र.५ गाँवों में खेतों की सिंचाई किन किन साधनों से होती है ?

.....
.....

प्र.६ व्यर्थ में ढुलने वाले पानी को हम किस तरह बचा सकते हैं ?

.....
.....

प्र.७ कुँए या तालाब का चित्र बनाइये ।

PADMAJA H.S.SCHOOL /CLASS-2nd /SUBJECT- HINDI/WORK SHEET-29

प्र.१ आपका जन्मदिन कब आता है ?

.....

प्र.२ आपके पापा का जन्मदिन कब आता है ?

.....

प्र.३ आपकी मम्मी का जन्मदिन कब आता है ?

.....

प्र.४ आप अपना जन्मदिन किस तरह से मानते हैं ?

.....

प्र.५ क्या आप अपने जन्मदिन पर अपने दोस्तों को बुलाते हो ? और क्यों ?

.....

.....

प्र.६ आप अपना जन्मदिन स्कूल में किस तरह मनाते हो ?

.....

प्र.७ जन्मदिन से सम्बंधित चीज़े जैसे केक , कैंडल , बर्थडे कैप , गुब्बारे , का चित्र बनाकर रंग भरिये ।

PADMAJA H.S.SCHOOL /CLASS-2nd /SUBJECT- HINDI/WORK SHEET-30

प्र.१ निम्न लिखित वाक्यों में आए विशेषण शब्दों पर गोला बनाइये ।

- | | |
|------------------------------|------------------------------|
| १. कौआ काले रंग का होता है । | ६. रानू की लिखावट सुंदर है । |
| २. गाय हरी घास कहती है । | ७. इमली खट्टी होती है । |
| ३. फूल पीले रंग का है । | ८. अमरुद मीठे है । |
| ४. वह लड़का मोटा है । | ९. वह लड़की बुद्धिमान है । |
| ५. वह लड़की बहुत आलसी है । | १०. यह औरत लड़ाकु है । |

प्र.२ क्रिया बताने वाले शब्दों पर रंग भरिये ।

- | | |
|-------------------------------------|----------------------------|
| १. बच्चा रो रहा है । | ६. मोर नाच रहा है । |
| २. चौकीदार सो रहा है । | ९. चीता तेज दौड़ता है । |
| ३. चोर भाग रहा है । | ८. मम्मी खाना बना रही है । |
| ४. हम गार्डन में घूमने जा रहे हैं । | ७. चाँद निकल गया । |
| ५. रीना रानू से झगड़ रही है । | १०. शेर मांस खाता है । |

प्र.३ अपने राष्ट्रीय ध्वज का सुन्दर चित्र बना कर उसमें रंग भरो ।

PADMAJA H.S.SCHOOL /CLASS-2nd /SUBJECT- HINDI/WORK SHEET-31

प्र.१ आसमान में चाँद सितारे कब दिखते हैं?

.....

प्र.२ आसमान में बिजली कब चमकती है ?

.....

प्र.३ आसमान का रंग कैसा है ?

.....

प्र.४ क्या आपने आसमान में उड़ती हुई चीज़े देखी है ?

.....

प्र.५ आसमान में कौन उड़ते हैं ?

.....

प्र.६ इंद्रधनुष में कितने रंग होते हैं ?

.....

प्र.७ इंद्रधनुष कब दिखाई देता है ?

.....

प्र.८ सूरज कब निकलता है ?

.....

प्र.८ इंद्रधनुष का चित्र बना कर रंग भरिये ।

PADMAJA H.S.SCHOOL /CLASS-2nd /SUBJECT- HINDI/WORK SHEET-32

प्र.१ कौन सा व्यक्ति क्या कार्य करता है ?

दर्जी -

लोहार -

कुम्हार -

सुनार -

किसान -

डॉक्टर -

चौकीदार -

सैनिक -

सुतार -

अध्यापक -

ड्राइवर -

वैज्ञानिक -

प्र.२ हमारे राष्ट्रीय प्रतिक की जोड़ी मिलाइये ।

- | | |
|--------------------------|------------|
| १. हमारा राष्ट्रीय पुष्प | आम |
| २. हमारा राष्ट्रीय चिन्ह | मोर |
| ३. हमारा राष्ट्रीय पक्षी | जलेबी |
| ४. हमारा राष्ट्रीय पशु | तिरंगा |
| ५. हमारा राष्ट्रीय फल | बाघ |
| ६. हमारा राष्ट्रीय वृक्ष | अशोक स्तंभ |
| ७. हमारी राष्ट्रीय मिठाई | कमल |
| ८. हमारा राष्ट्रीय झंडा | बरगद |

PADMAJA H.S.SCHOOL /CLASS-2nd /SUBJECT- HINDI/WORK SHEET-33

प्र.१ दीपावली का त्यौहार कब मनाया जाता है ?

.....

प्र.२ दीपावली का त्यौहार आने के पहले आप क्या करते है ?

.....

प्र.३ दीपावली का त्यौहार कितने दिनों का होता है ?

.....

प्र.४ धनतेरस के दिन आप क्या करते हो ?

.....

प्र.५ नरक चौदस के दिन आपकी मम्मी क्या करती है ?

.....

प्र.६ दीपावली के दिन आप क्या करते हो ?

.....

प्र.७ दीपावली के दिन किसकी पूजा होती है ?

.....

प्र.८ भाईदूज के दिन आपकी बहिन क्या करती है ?

.....

प्र.९ दीपावली का चित्र बनाकर उसे सजाये |

PADMAJA H.S.SCHOOL /CLASS-2nd /SUBJECT- HINDI/WORK SHEET-34

प्र.१ हम राष्ट्रीय ध्वज कब फहराते है ?

.....

प्र.२ हमारे राष्ट्रीय ध्वज में कितने रंग है ?

.....

प्र.३ हमारे राष्ट्रीय ध्वज के बीच में जो चक्र होता है उसमे कितनी तीलियाँ होती है ?

.....

प्र.४ चक्र किस रंग का होता है ?

.....

प्र.५ हमारे देश के प्रधान मंत्री कौन है ?

.....

प्र.६ म.प्र. के मुख्य मंत्री कौन है ?

.....

प्र.७ तिरंगे के तीन रंग हमें क्या शिक्षा देते है ?

.....

प्र.८ तिरंगा बनाइये और उसमे रंग भरिये ।

PADMAJA H.S.SCHOOL /CLASS-2nd /SUBJECT- HINDI/WORK SHEET-35

प्र.१ दस ऐसी चीज़ों की सूची बनाओ जो पुराने ज़माने में नहीं थी ।

प्र.२ दस ऐसी वस्तुओं के नाम लिखों जो आपके घरों में बिजली से चलते हैं ।

प्र.३ दस ऐसी वस्तुओं के नाम लिखों जो आपके घर में लोहे से बनी हुई हैं ।

प्र.४ दस मसालों के नाम लिखों ।

.....
.....

प्र.५ आप घर में कौन कौनसी दालें खाते हो उनके नाम लिखों ।

.....
.....

प्र.६ आपके किचन में उपयोग में आने वाले दस बर्तनों के नाम लिखों ।

.....
.....

PADMAJA H.S.SCHOOL /CLASS-2nd /SUBJECT- HINDI/WORK SHEET-37

प्र.१ हिंदी में सप्ताह के सात दिनों के नाम लिखिए ।

.....
.....

प्र.२ हिंदी में बारह महीनो के नाम लिखिए ।

.....
.....

प्र.३ देवास में लगने वाले मीना बाजार के बारे में दस पंक्तियाँ लिखिए ।

.....
.....
.....
.....
.....
.....
.....
.....
.....
.....
.....

प्र.४ मीना बाजार के दृश्य का सुन्दर चित्र बनाइये ।

PADMAJA H.S.SCHOOL /CLASS-2nd /SUBJECT- HINDI/WORK SHEET-38

प्र.१ वाक्यांश के लिए एक शब्द लिखिए ।

१. जिसके माता पिता न हो ।

२. जो हमेशा सत्य बोलता हो ।

३. जो किसी से न डरता हो ।

४. जो ज्यादा बोलता हो ।

५. जो बहुत हँसता हो ।

६. जो बहुत गुस्सा करता हो ।

७. जो बात बात पर रोता हो ।

८. जल में रहने वाला ।

९. गांव में रहने वाला ।

१०. जो साग सब्जी खाता हो ।

प्र.२ निम्न लिखित शब्दों से वाक्य बनाइये ।

१. घर -

२. किसान -

३. मंदिर -

४. सूरज -

५. महल -

६. वर्षा -

७. नदी -

८. सैनिक -

९. ईश्वर -

PADMAJA H.S.SCHOOL /CLASS-2nd /SUBJECT- HINDI/WORK SHEET-39

प्र.१ चार प्रमुख धर्मों के नाम बताइये ।

.....

प्र.२ चर्च में प्रार्थना करने कौन कौन से धर्म के लोग जाते हैं ?

.....

प्र.३ मंदिर में पूजा करने कौन कौन से धर्म के लोग जाते हैं ?

.....

प्र.४ मस्जिद में नमाज़ पढ़ने कौन से धर्म के लोग जाते हैं ?

.....

प्र.५ गुरुद्वारे में अरदास करने कौन से धर्म के लोग जाते हैं ?

.....

प्र.६ हिन्दुओं का पवित्र ग्रन्थ कौन सा है ?

.....

प्र.७ मुस्लिमों का पवित्र ग्रन्थ कौन सा है ?

.....

प्र.८ ईसाइयों का पवित्र ग्रन्थ कौन सा है ?

.....

प्र.९ चारों धर्मों के प्रमुख त्यौहारों का एक एक चित्र चिपकाइये ।

PADMAJA H.S.SCHOOL /CLASS-2nd /SUBJECT- HINDI/WORK SHEET-40

प्र.१ प्रतिवर्ष हम १ जनवरी को नए साल के रूप में मानते हैं। निम्न महत्वपूर्ण दिवस कब मानते हैं।

- | | |
|-------------------------|----------------------------|
| १. शिक्षक दिवस - | २. बाल दिवस - |
| ३. गणतंत्र दिवस - | ४. स्वतंत्रता दिवस - |
| ५. शहीद दिवस - | ६. पर्यावरण दिवस - |

प्र.२ जमीन में पाए जाने वाले निम्नलिखित पदार्थ किस काम में आते हैं ? लिखिए।

१. लोहा -
२. ग्रेफाइट -
३. सोना -
४. संगमरमर -

प्र.३ जोड़ी मिलाइये।

- | | |
|--|------------|
| १. हमें माता पिता और बड़ों की करना चाहिए | ध्यान से |
| २. हमें जीवन जीना चाहिए | सेवा |
| ३. हमें व्यर्थ नहीं गँवाना चाहिए | कद्र |
| ४. हमें अपने समय की करना चाहिए | सादगीपूर्ण |
| ५. हमें अपने शिक्षकों की बातें सुननी चाहिए | समय |

प्र.४ कच्चे घर और पक्के घर को बनाने में किन किन सामग्रियों की आवश्यकता होती है लिखिए।
कच्चे और पक्के घर के चित्र बनाकर रंग भरे या चिपकाये।

कच्चे घर

पक्के घर

PADMAJA H.S.SCHOOL /CLASS-2nd/SUBJECT-Maths /**WORK SHEET-01**

Q.1 Write the missing numbers:-

50 54 57
58 61 63 65
..... 67 69 71 73
..... 75 77 79 81
82 85 89
90 93 96
98

Q.2 Write the numbers:-

- a) 4 tens + 3 ones =
- b) 3 tens + 2 ones =
- b) 8 tens + 4 ones =
- c) 1 tens + 0 ones =
- d) 3 tens + 2 ones =
- e) 6 tens + 8 ones =
- f) 9 tens + 9 ones =
- g) 5 tens + 2 ones =
- h) 3 hundreds + 4 tens + 6 ones =
- i) 8 hundreds + 4 tens + 0 ones =
- j) 2 hundreds + 1 tens + 8 ones =
- k) 1 hundreds + 6 tens + 2 ones =
- l) 3 hundreds + 9 tens + 2 ones =
- m) 6 hundreds + 7 tens + 8 ones =

PADMAJA H.S.SCHOOL /CLASS-2nd/SUBJECT-Maths /**WORK SHEET-02**

Q.1 Put the sign $>$, $<$ or $=$:-

- | | | |
|----------------|----------------|----------------|
| a) 85 93 | b) 96 80 | c) 45 45 |
| d) 53 62 | e) 65 70 | f) 73 61 |
| g) 82 82 | h) 25 38 | i) 32 20 |
| j) 42 48 | k) 58 69 | l) 93 62 |
| m) 43 78 | n) 63 36 | o) 64 90 |

Q.2 Ring the smallest number :-

- | | | |
|----------------------|----------------------|----------------------|
| a) 16 , 10 , 25 , 30 | b) 29 , 30 , 21 , 26 | c) 53 , 48 , 55 , 40 |
| d) 45 , 32 , 50 , 29 | e) 53 , 48 , 55 , 40 | f) 93 , 63 , 55 , 47 |
| g) 53 , 50 , 63 , 41 | h) 32 , 26 , 13 , 2 | i) 55 , 25 , 35 , 93 |
| j) 21 , 8 , 19 , 25 | k) 32 , 81 , 39 , 42 | l) 98 , 96 , 23 , 32 |
| m) 56 , 65 , 84 , 67 | n) 38 , 76 , 91 , 96 | o) 76 , 96 , 46 , 35 |

Q.3 Ring the largest number:-

- | | | |
|----------------------|----------------------|----------------------|
| a) 23 , 58 , 46 , 98 | b) 87 , 47 , 69 , 35 | c) 10 , 14 , 65 , 87 |
| d) 45 , 25 , 36 , 98 | e) 78 , 65 , 28 , 45 | f) 52 , 85 , 45 , 96 |
| g) 74 , 54 , 67 , 88 | h) 85 , 65 , 56 , 36 | i) 14 , 21 , 32 , 23 |
| j) 17 , 71 , 81 , 91 | k) 28 , 82 , 65 , 56 | l) 57 , 79 , 86 , 68 |
| m) 29 , 35 , 46 , 73 | n) 19 , 35 , 62 , 68 | o) 10 , 33 , 55 , 99 |

PADMAJA H.S.SCHOOL /CLASS-2nd/SUBJECT-Maths /WORK SHEET-03

Q.1 Put the sign (+ , - , x):-

1) 9 2 = 11

2) 8 4 = 4

3) 7 5 = 2

4) 7 2 = 9

5) 5 3 = 8

6) 6 4 = 2

7) 2 3 = 6

8) 4 3 = 12

9) 10 8 = 2




10) 5 2 = 10

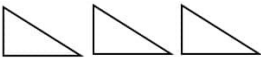


11) 8 5 = 13


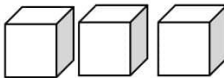

12) 6 3 = 18

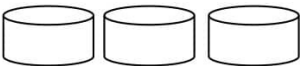
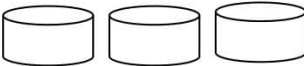
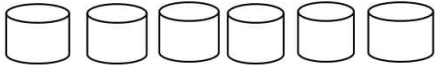
Q.2 Count and write:-

1)  +  = 
 + =

2)  +  = 
 + =

3)  -  = 
 - =

4)  -  = 
 - =

5)  +  = 
 + =

PADMAJA H.S.SCHOOL /CLASS-2nd/SUBJECT-Maths /WORK SHEET-05

Q.1 Write in expanded form:-

- 1) $135 = \square \text{ hundred} + \square \text{ tens} + \square \text{ ones}$
- 2) $248 = \square \text{ hundred} + \square \text{ tens} + \square \text{ ones}$
- 3) $341 = \square \text{ hundred} + \square \text{ tens} + \square \text{ ones}$
- 4) $426 = \square \text{ hundred} + \square \text{ tens} + \square \text{ ones}$
- 5) $548 = \square \text{ hundred} + \square \text{ tens} + \square \text{ ones}$
- 6) $403 = \square \text{ hundred} + \square \text{ tens} + \square \text{ ones}$
- 7) $108 = \square \text{ hundred} + \square \text{ tens} + \square \text{ ones}$
- 8) $600 = \square \text{ hundred} + \square \text{ tens} + \square \text{ ones}$
- 9) $305 = \square \text{ hundred} + \square \text{ tens} + \square \text{ ones}$
- 10) $205 = \square \text{ hundred} + \square \text{ tens} + \square \text{ ones}$

Q.2 Write the number names:-

- 1) $105 = \dots\dots\dots$
- 2) $128 = \dots\dots\dots$
- 3) $150 = \dots\dots\dots$
- 4) $221 = \dots\dots\dots$
- 5) $249 = \dots\dots\dots$
- 6) $327 = \dots\dots\dots$
- 7) $420 = \dots\dots\dots$
- 8) $372 = \dots\dots\dots$

PADMAJA H.S.SCHOOL /CLASS-2nd/SUBJECT-Maths /**WORK SHEET-06**

Q.1 What comes before number?

- | | | |
|---------------|---------------|---------------|
| 1) 158 | 2) 248 | 3) 327 |
| 4) 255 | 5) 369 | 6) 210 |
| 7) 188 | 8) 630 | 9) 190 |
| 10) 200 | 11) 151 | 12) 161 |
| 13) 356 | 14) 193 | 15) 478 |

Q.2 What comes between number?

- | | | |
|-------------------|-------------------|-------------------|
| 1) 225 227 | 2) 259 261 | 3) 337 339 |
| 4) 436 438 | 5) 529 531 | 6) 601 603 |
| 7) 203 205 | 8) 303 305 | 9) 666 668 |
| 10) 501 503 | 11) 789 791 | 12) 220 222 |
| 13) 346 348 | 14) 741 743 | 15) 639 641 |

Q.3 What comes after number?

- | | | |
|---------------|---------------|---------------|
| 1) 321 | 2) 555 | 3) 438 |
| 4) 449 | 5) 637 | 6) 714 |
| 7) 235 | 8) 362 | 9) 636 |
| 10) 523 | 11) 745 | 12) 236 |
| 13) 124 | 14) 170 | 15) 157 |

PADMAJA H.S.SCHOOL /CLASS-2nd/SUBJECT-Maths /**WORK SHEET-07**

Q.1 Find out the place values and face values of the digits:-

Number		Place value	Face value
864	8		
	6		
	4		
573	5		
	7		
	3		
982	9		
	8		
	2		
351	3		
	5		
	1		
426	4		
	2		
	6		

Q.2 Make all possible 3 digits numbers with the help of given digits when no repetition of digits is allowed:-

Digits	All possible numbers
4 , 8 , 3	
6 , 4 , 5	
3 , 9 , 2	
7 , 0 , 1	
5 , 3 , 7	
3 , 6 , 7	
4 , 3 , 9	

PADMAJA H.S.SCHOOL /CLASS-2nd/SUBJECT-Maths /**WORK SHEET-08**

Q.1 Observe the pattern and fill in the blanks:-

- 1) 310 , 312 , 322
- 2) 230 , 232, 242
- 3) 353 , 356, 371
- 4) 435 , 438 , 453
- 5) 215 , 220 , 245
- 6) 510 , 520 , 570
- 7) 100 , 120 , 210
- 8) 220 , 240, 340

Q.2 Arrange the numbers in ascending order:-

Numbers	In ascending order
425 , 415 , 431 , 440	
326 , 218 , 425 , 530	
215 , 242 , 348 , 270	
615 , 430 , 554 , 735	
736 , 750 , 848 , 910	
324 , 148 , 230 , 435	
123 , 148 , 159 , 121	
235 , 845 , 356 , 780	
236 , 265 , 487 , 147	
123 , 233 , 100 , 101	
235 , 103 , 140 , 258	

PADMAJA H.S.SCHOOL /CLASS-2nd/SUBJECT-Maths /WORK SHEET-09

Q.1 Find the add:-

$$\begin{array}{r} 24 \\ + 32 \\ \hline \end{array}$$

$$\begin{array}{r} 65 \\ + 33 \\ \hline \end{array}$$

$$\begin{array}{r} 386 \\ + 102 \\ \hline \end{array}$$

$$\begin{array}{r} 532 \\ + 127 \\ \hline \end{array}$$

$$\begin{array}{r} 454 \\ + 123 \\ \hline \end{array}$$

$$\begin{array}{r} 143 \\ + 425 \\ \hline \end{array}$$

Q.2 Find the subtract:-

$$\begin{array}{r} 58 \\ - 23 \\ \hline \end{array}$$

$$\begin{array}{r} 76 \\ - 25 \\ \hline \end{array}$$

$$\begin{array}{r} 53 \\ - 49 \\ \hline \end{array}$$

$$\begin{array}{r} 98 \\ - 06 \\ \hline \end{array}$$

$$\begin{array}{r} 49 \\ - 26 \\ \hline \end{array}$$

$$\begin{array}{r} 74 \\ - 63 \\ \hline \end{array}$$

Q.1 Word problems:-

1) How many men and women in your family? Count it:-

Solve.: No. of men =

No. of women =

Total members =

2) Your father is earns rs. 600 and mother earns is rs. 325. What is their total income:-

Solve.: Father is earns =

Mother is earns =

Total income =

3) I bought 1 dozen orange and 5 apples. Find the total fruits:-

Solve.: No. of orange =

No. of apples =

Total fruits =

4) I bought 1 dozen ice cream vanilla flavor and 8 ice cream strawberry flavor . Find the total number of ice cream:-

Solve.: No. of vanilla ice cream =

No. of strawberry ice cream =

Total ice cream =

PADMAJA H.S.SCHOOL /CLASS-2nd/SUBJECT-Maths /WORK SHEET- 11

Q.1 Fill in the boxes:-

1) $7 - 0 =$

2) $9 - 0 =$

3) $5 - 0 =$

4) $8 - 8 =$

5) $4 - 4 =$

6) $7 - 7 =$

7) $8 - 1 =$

8) $9 - 1 =$

9) $9 - 5 =$

10) $10 - 4 =$

Q.2 Write the related addition fact for each subtraction fact:-

1) $9 - 2 = 7$ + =

2) $6 - 3 = 3$ + =

3) $7 - 2 = 5$ + =

4) $8 - 6 = 2$ + =

5) $4 - 1 = 3$ + =

6) $5 - 3 = 2$ + =

Q.3 Write the related subtraction fact for each addition fact:-

1) $9 + 6 = 15$ - =

2) $8 + 4 = 12$ - =

3) $7 + 2 = 9$ - =

4) $6 + 3 = 9$ - =

5) $4 + 2 = 6$ - =

Q.1 Word problems:-

1) Your brother is 9 years old and you 6 years old. How much your brother is older than you?

Solve.:-

2) Your father gave you rs. 425. You spent rs. 312. How much money do you have now?

Solve.:-

3) You have 17 birthday gifts 9 came from your family , the rest came from your friends. How many gifts did your friends give you?

Solve.:-

4) In your class today only 26 of the 38 students were at school. How many were absent?

Solve.:-

PADMAJA H.S.SCHOOL /CLASS-2nd/SUBJECT-Maths /**WORK SHEET- 13**

Q.1 You picked 8 flowers and your friend picked 17 flowers. How many more flowers did your friend pick?

Solve.:-

Q.2 How many girls and boys in your class ii. Count it:-

Solve.:-

Q.3 Anju had rs. 750. She bought a pizza for rs. 325. Now how much money is left with anju?

Solve.:-

Q.4 Rani bought 100 sweets on her birthday. She distributed 94 sweets among his friends. How many sweets left with her?

Solve.:-

Q.5 Rahul scored 14 runs. Sourav scored 50 runs. How many runs they scored together?

Solve.:-

Q.1 Word problems:-

1) If your brother height is 75 cm. and your height is 63 cm. How you younger than your brother?

Solve.:-

2) A car is 25 meters long and another is 32 meters long. What is the length of the two cars together?

Solve.:-

3) You bought 167 cm. of white ribbon. If 25 cm. of the ribbon is cut off from it, What length of the ribbon is left?

Solve.:-

4) Find the total length of two pieces of shirt which have the lengths of 20 meters and 35 meters?

Solve.:-

Q.1 Word problems:-

1) An insect has 6 legs. How many legs do 5 insects have?

Solve.:-

2) How many wheels on 9 cars?

Solve.:-

3) I buy 6 packs of 10 pens. How many pens I have bought?

Solve.:-

4) I bought 5 packets of wax crayons. Each packet has 12 crayons.

How many crayons does I have?

Solve.:-

5) There are 8 baskets. Each basket has 10 oranges. How many oranges in all?

Solve.:-

Q.1 Word problems:-

1) Today reeta sold 126 cookies. There are 9 cookies in each box.

How many boxes of cookies did she sell today?

Solve.:-

2) I bought 9 gifts on my birthday party. I distributed these gifts

among 3 friends. How many gifts did he give to each of his friend?

Solve.:-

3) In your class you counted 64 hands. How many students were at the class?

Solve.:-

4) 5 toys costs rs. 250. Find the cost of one toy?

Solve.:-

5) 49 stickers are to be given to 7 children equally . How many stickers will each child get?

Solve.:-

PADMAJA H.S.SCHOOL /CLASS-2nd/SUBJECT-Maths /**WORK SHEET- 17**

Q.1 Add the following :-

$$1) \begin{array}{r} 152 \text{ m} \\ - 131 \text{ m} \\ \hline \end{array}$$

$$- 131 \text{ m}$$

$$2) \begin{array}{r} 360 \text{ m} \\ - 420 \text{ m} \\ \hline \end{array}$$

$$- 420 \text{ m}$$

$$3) \begin{array}{r} 500 \text{ m} \\ - 205 \text{ m} \\ \hline \end{array}$$

$$- 205 \text{ m}$$

$$4) \begin{array}{r} 700 \text{ m} \\ - 200 \text{ m} \\ \hline \end{array}$$

$$- 200 \text{ m}$$

$$5) \begin{array}{r} 654 \text{ m} \\ - 212 \text{ m} \\ \hline \end{array}$$

$$- 212 \text{ m}$$

$$6) \begin{array}{r} 467 \\ - 232 \\ \hline \end{array}$$

$$- 232$$

$$7) \begin{array}{r} \text{m} \quad \text{cm} \\ 51 \quad 23 \\ + 24 \quad 42 \\ \hline \end{array}$$

$$+ 24 \quad 42$$

$$8) \begin{array}{r} \text{m} \quad \text{cm} \\ 16 \quad 20 \\ + 42 \quad 50 \\ \hline \end{array}$$

$$+ 42 \quad 50$$

$$9) \begin{array}{r} \text{m} \quad \text{cm} \\ 70 \quad 47 \\ + 29 \quad 52 \\ \hline \end{array}$$

$$+ 29 \quad 52$$

Q.2 Subtract the following:-

$$1) \begin{array}{r} \text{m} \quad \text{cm} \\ 56 \quad 48 \\ - 32 \quad 13 \\ \hline \end{array}$$

$$- 32 \quad 13$$

$$2) \begin{array}{r} \text{m} \quad \text{cm} \\ 48 \quad 56 \\ - 12 \quad 14 \\ \hline \end{array}$$

$$- 12 \quad 14$$

$$3) \begin{array}{r} \text{m} \quad \text{cm} \\ 51 \quad 20 \\ - 31 \quad 10 \\ \hline \end{array}$$

$$- 31 \quad 10$$

$$4) \begin{array}{r} 591 \text{ m} \\ - 231 \text{ m} \\ \hline \end{array}$$

$$- 231 \text{ m}$$

$$5) \begin{array}{r} 634 \text{ m} \\ - 312 \text{ m} \\ \hline \end{array}$$

$$- 312 \text{ m}$$

$$6) \begin{array}{r} 825 \text{ m} \\ - 213 \text{ m} \\ \hline \end{array}$$

$$- 213 \text{ m}$$

PADMAJA H.S.SCHOOL /CLASS-2nd/SUBJECT-Maths /**WORK SHEET- 18**

Q.1 Multiply:-

$$\begin{array}{r} 1) \quad T \quad O \\ \quad 2 \quad 2 \\ \quad X \quad 4 \\ \hline \hline \end{array}$$

$$\begin{array}{r} 2) \quad T \quad O \\ \quad 3 \quad 2 \\ \quad X \quad 3 \\ \hline \hline \end{array}$$

$$\begin{array}{r} 3) \quad T \quad O \\ \quad 6 \quad 0 \\ \quad X \quad 2 \\ \hline \hline \end{array}$$

$$\begin{array}{r} 4) \quad T \quad O \\ \quad 4 \quad 1 \\ \quad X \quad 6 \\ \hline \hline \end{array}$$

$$\begin{array}{r} 5) \quad T \quad O \\ \quad 5 \quad 5 \\ \quad x \quad 8 \\ \hline \hline \end{array}$$

$$\begin{array}{r} 6) \quad T \quad O \\ \quad 1 \quad 4 \\ \quad X \quad 9 \\ \hline \hline \end{array}$$

$$\begin{array}{r} 7) \quad H \quad T \quad O \\ \quad 1 \quad 4 \quad 3 \\ \quad X \quad \quad 3 \\ \hline \hline \end{array}$$

$$\begin{array}{r} 8) \quad H \quad T \quad O \\ \quad 2 \quad 5 \quad 6 \\ \quad X \quad 7 \\ \hline \hline \end{array}$$

$$\begin{array}{r} 9) \quad H \quad T \quad O \\ \quad 6 \quad 7 \quad 8 \\ \quad X \quad \quad 4 \\ \hline \hline \end{array}$$

$$\begin{array}{r} 10) \quad H \quad T \quad O \\ \quad 1 \quad 4 \quad 4 \\ \quad X \quad 5 \\ \hline \hline \end{array}$$

$$\begin{array}{r} 11) \quad H \quad T \quad O \\ \quad 2 \quad 6 \quad 7 \\ \quad X \quad 6 \\ \hline \hline \end{array}$$

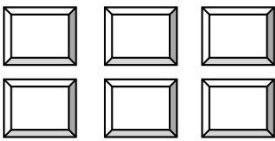
$$\begin{array}{r} 12) \quad H \quad T \quad O \\ \quad 2 \quad 6 \quad 9 \\ \quad X \quad 4 \\ \hline \hline \end{array}$$

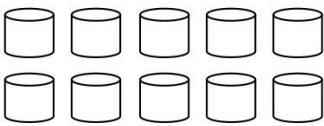
$$\begin{array}{r} 13) \quad H \quad T \quad O \\ \quad 3 \quad 2 \quad 4 \\ \quad X \quad 7 \\ \hline \hline \end{array}$$


$$\begin{array}{r} 14) \quad H \quad T \quad O \\ \quad 4 \quad 2 \quad 3 \\ \quad X \quad 8 \\ \hline \hline \end{array}$$


$$\begin{array}{r} 15) \quad H \quad T \quad O \\ \quad 6 \quad 0 \quad 9 \\ \quad X \quad 2 \\ \hline \hline \end{array}$$

Q.1 Represent the following by multiplication:-

1)  = X

2)  = X

3)  = X

4)  = X

5) $3 + 3 + 3 + 3 = \dots\dots\dots X \dots\dots\dots$

6) $5 + 5 + 5 = \dots\dots\dots X \dots\dots\dots$

7) $4 + 4 + 4 + 4 + 4 = \dots\dots\dots X \dots\dots\dots$

8) $7 + 7 = \dots\dots\dots X \dots\dots\dots$

9) $9 + 9 + 9 = \dots\dots\dots X \dots\dots\dots$

10) $1 + 1 + 1 + 1 + 1 + 1 = \dots\dots\dots X \dots\dots\dots$

Q.2 Fill in the place holders:-

1) $3 \times \square = 6$

2) $4 \times \square = 12$

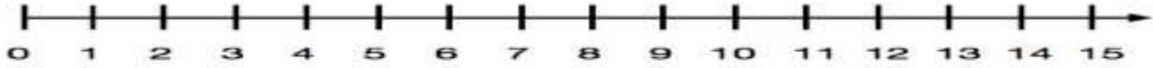
3) $4 \times \square = 12$

4) $5 \times 2 = \square$

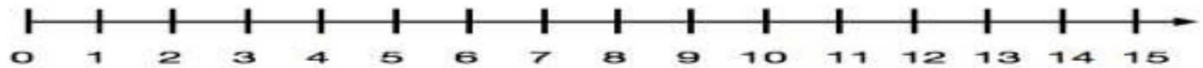
5) $7 \times \square = 63$

6) $8 \times \square = 16$

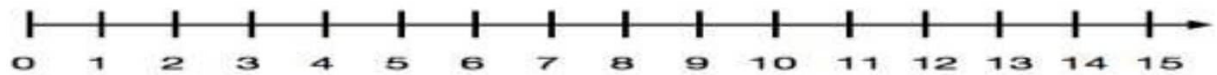
Q.1 Division on number line:-



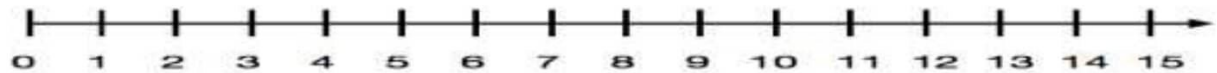
$$9 \div 3 = \boxed{}$$



$$12 \div 4 = \boxed{}$$



$$14 \div 2 = \boxed{}$$



$$10 \div 5 = \boxed{}$$

Q.2 Write correct numbers in the box:-

1) $12 \div 3 =$

2) $16 \div 2 =$

3) $21 \div 3 =$

4) $27 \div 3 =$

5) $16 \div 4 =$

6) $24 \div 4 =$

7) $35 \div 5 =$

8) $42 \div 7 =$

9) $64 \div 8 =$

10) $81 \div 9 =$

11) $14 \div 7 =$

12) $72 \div 8 =$

13) $50 \div 5 =$

14) $15 \div 3 =$

15) $20 \div 4 =$

PADMAJA H.S.SCHOOL /CLASS-2nd/SUBJECT-Maths /**WORK SHEET- 21**

Q.1 Fill in the box:-

1) $8 \times 4 =$

2) $32 \div 4 =$

3) $5 \times 4 =$

4) $20 \div 4 =$

5) $8 \times 6 =$

6) $48 \div 6 =$

7) $49 \div 7 =$

8) $7 \times 7 =$

9) $35 \div 7 =$

10) $5 \times 7 =$

11) $6 \div 3 =$

12) $18 \div 9 =$

Q.2 Cost of one book is rs. 90. Find the cost of 6 books?

Ans.:

Q.3 There are 65 pages in a book. Find the total number of pages in such 3 books?

Ans.:

Q.4 The cost of 5 toys is rs. 225. Find the cost of one toy?

Ans.:

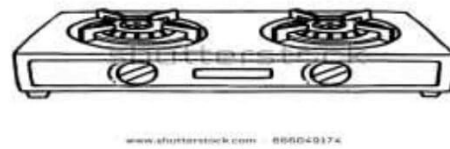
Q.5 A customer paid rs.300 for 4 bags. Find the cost of 1 bag?

Ans.:

Q.6 A box contains 25 toffees. How many toffees are there in 8 such boxes?

Ans.:

Q.1 Tick (✓) the heavier:-



Q.2 Write the names of items that are bought in kilogram:-

.....
.....

Q.3 Convert kilograms into grams:-

- | | |
|-----------------|------------------|
| 1) 2 kg = | 2) 8 kg = |
| 3) 4 kg = | 4) 9 kg = |
| 5) 6 kg = | 6) 10 kg = |
| 7) 1 kg = | 8) 3 kg = |
| 9) 5 kg = | 10) 7 kg = |

PADMAJA H.S.SCHOOL /CLASS-2nd/SUBJECT-Maths /**WORK SHEET- 23**

Q.1 Add the following:-

$$\begin{array}{r} \text{a) } 423 \text{ kg} \\ + 342 \text{ kg} \\ \hline \end{array}$$

$$\begin{array}{r} \text{b) } 023 \text{ kg} \\ + 952 \text{ kg} \\ \hline \end{array}$$

$$\begin{array}{r} \text{c) } 738 \text{ kg} \\ + 125 \text{ kg} \\ \hline \end{array}$$

$$\begin{array}{r} \text{d) } 836 \text{ kg} \\ + 015 \text{ kg} \\ \hline \end{array}$$

$$\begin{array}{r} \text{e) } 498 \text{ kg} \\ + 226 \\ \hline \end{array}$$

$$\begin{array}{r} \text{f) } 632 \text{ kg} \\ + 123 \text{ kg} \\ \hline \end{array}$$

Q.2 Subtract the following:-

$$\begin{array}{r} \text{a) } 587 \text{ kg} \\ - 223 \text{ kg} \\ \hline \end{array}$$

$$\begin{array}{r} \text{b) } 923 \text{ kg} \\ - 415 \text{ kg} \\ \hline \end{array}$$

$$\begin{array}{r} \text{c) } 646 \text{ kg} \\ - 418 \text{ kg} \\ \hline \end{array}$$

$$\begin{array}{r} \text{d) } 900 \text{ kg} \\ - 356 \text{ kg} \\ \hline \end{array}$$

$$\begin{array}{r} \text{e) } 815 \text{ kg} \\ - 308 \text{ kg} \\ \hline \end{array}$$

$$\begin{array}{r} \text{f) } 489 \text{ kg} \\ - 205 \text{ kg} \\ \hline \end{array}$$

Q.3 Add the following:-

$$\begin{array}{r} \text{a) kg} \quad \text{g} \\ 48 \quad 30 \\ + 16 \quad 25 \\ \hline \end{array}$$

$$\begin{array}{r} \text{b) kg} \quad \text{g} \\ 46 \quad 34 \\ + 26 \quad 12 \\ \hline \end{array}$$

$$\begin{array}{r} \text{c) kg} \quad \text{g} \\ 49 \quad 56 \\ + 29 \quad 28 \\ \hline \end{array}$$

PADMAJA H.S.SCHOOL /CLASS-2nd/SUBJECT-Maths /**WORK SHEET- 24**

Q.1 A student with school uniform dress weight 23kg 900grams. If weight of the uniform is 1kg 500 grams. What is the body weight of the student?

Solve.:-

Q.2 Your father bought 8 kg sugar, 5kg flour and 3 kg rice. What is total quantity of items?

Solve.:-

Q.3 Your father's weight 68kg and mother's weight is 54kg. Who weight less and by how much?

Solve:-

Q.4 A truck is carrying 210 kg rice, 375 kg of pulses and 98 kg of wheat. Find the total quantity of the grains carried by the truck?

Solve.:-

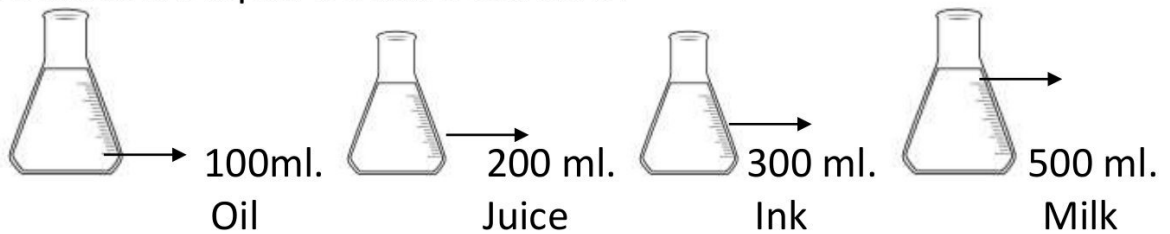
Q.5 Your mother purchased 8 kg of orange. Later on, she found that 3kg of orange were rotten. Find the quantity of orange in good condition?

Solve.:-

Q.1 Write the name of items which things are measured liter and milliliter:-

.....
.....
.....

Q.2 To measure liquid we have contains:-



Give the answer :-

- 1) Which item is 500ml?
- 2) Which item is 100ml?
- 3) Which item is 200ml?
- 4) Which item is 300ml?

Q.3 Convert liter into milliliter:-

- 1) 5 liters 2) 8 liters 3) 7 liters

- 4) 9 liters 5) 2 liters 6) 6 liters

- 7) 12 liters 8) 18 liters 9) 20 liters

PADMAJA H.S.SCHOOL /CLASS-2nd/SUBJECT-Maths /**WORK SHEET- 26**

Q.1 Find the sum:-

a) 3 2 6 liters

+ 4 1 2 liters

b) 4 8 0 liters

+ 1 2 6 liters

c) 6 4 6 liters

+ 1 8 2 liters

Q.2 Find the difference:-

a) 8 0 5 liters

- 3 2 9 liters

b) 8 4 2 liters

- 6 3 6 liters

c) 6 0 0 liters

- 4 2 4 liters

Q.3 Add:-

a) l ml.

68 40

+ 15 26

b) l ml.

85 25

+ 18 25

c) l ml.

72 49

+ 47 25

Q.4 Subtract:-

a) l ml.

62 90

- 46 65

b) l ml.

92 85

- 71 42

c) l ml.

75 46

- 52 28

Q.1 Word problems:-

1) Mohan bought 6 liters of kerosene in the first week and 8 liters in the second week. How much kerosene did mohan buy in the two weeks?

Solve.:-

2) On diwali festival, meena bought 8 liters of milk from dairy and 4 liters of milk from other dairy. How much total milk did she buy?

Solve.:-

3) Your mother bought 7 liters 50 ml. of ghee. She consumed 5 liters 30 ml. of ghee in cooking? How much ghee left with her?

Solve.:-

4) A bottle contained 2 liters 50 ml. of medicine. If a patient used up 1 liter 25 ml. medicine. How much medicine was left?

Solve.:-

5) A petrol pump sells 205 liters, 114 liters and 231 liters of petrol in three days. How much petrol is sold altogether?

Solve.:-

PADMAJA H.S.SCHOOL /CLASS-2nd/SUBJECT-Maths /**WORK SHEET- 28**

Q.1 How many days in a week? Give the name:-

Ans.:-
.....

Q.2 How many months in a year ? give the name:-

Ans.:-
.....

Q.3 How many months have 30 days?

Ans.:-
.....

Q.4 How many months have 31 days?

Ans.:-

Q.5 How many days in a leap year?

Ans.:-

Q.6 How many hours in a day?

Ans.:-

Q.7 How many days in a month?

Ans.:-

Q.8 How many hands in your clock?

Ans.:-

Q.1 Which is last day in a week?

Ans.:-

Q.2 Which is the third day of the week?

Ans.:-

Q.3 Which is the first day in a week?

Ans.:-

Q.4 Which day comes after Tuesday?

Ans.:-

Q.5 Which day comes before Tuesday?

Ans.:-

Q.6 Which the last month of the year?

Ans.:-

Q.7 Which is the first month of the year?

Ans.:-

Q.8 Which is month comes after May?

Ans.:-





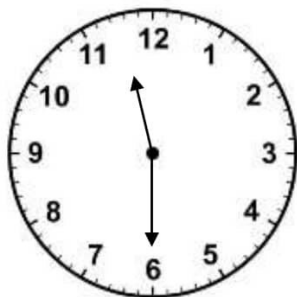



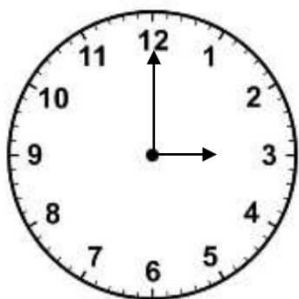
Q.9 In which month your birthday comes?

Ans.:-

Q.10 In which month teacher's day comes?

Ans.:-

Q.1 Write the time as in clock:-



Q.1 Match the column:

1day	60 seconds
1week	60 minutes
1 hour	366 days
Leap year	7 days
1 minute	24 hours

Q.2 Draw the clock:

2 o'clock

6 o'clock









4:30

2:30
















10:15

12:15

Q.1 Match the column :

- | | | |
|----|---|---------------|
| 1. |  | Six – Eighth |
| 2. |  | Four – Sixth |
| 3. |  | Two – Seventh |
| 4. |  | One – Fifth |
| 5. |  | Four - Sixth |
| 6. |  | One – Third |
| 7. |  | Three – Fifth |
| 8. |  | Two – Fourth |

Q.2 Connect the fraction to the correct shaded shapes :

- | | | | |
|------------------|---|---|---|
| A. $\frac{2}{5}$ |  |  |  |
| B. $\frac{5}{6}$ |  |  |  |
| C. $\frac{1}{3}$ |  |  |  |
| D. $\frac{4}{7}$ |  |  |  |
| E. $\frac{3}{4}$ |  |  |  |

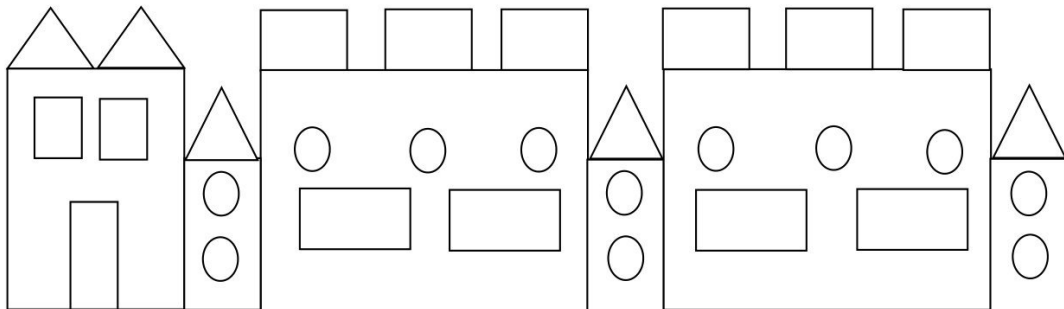
Q.3 A box contains 60 toffees. How many toffees are there in 8 such Boxes?






.....

Q.1 Fill in the blanks:

1. Circles hascorner.
2. Triangle hascorner.
3. Oval hascorner.
4. Rectangle hascorner.
5. Square hascorners.
6. Cone hascorners.
7. Cube hascorners.
8. Cuboid hascorners.
9. Cube hasfaces.
- 10 . Cylinder has edges.

Q.2 How many shapes do you see?



 =  =  =  =
 =

Q.1 Make the solid shapes (3D) and fill the colour?

Cylinde:

Cube:

Cuboid:

Cone:



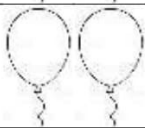
Q.2 Write the 2 - 2 examples of :

Cube: Cuboid:

Cone: Cylinder:






Sphere:

Q.1 Let us consider the following pictograph on careful observation , we find the following:

1 st child	
2 nd child	
3 rd child	

1. How many balloons have first child?
2. How many balloons have third child?
3. How many total balloons have children?
4. Which child have the least number of balloons?
5. Which child has the highest number of balloons?

Q.2 The following pictograph schools the number of students in a class who were absent during the week?

Days	Students
Monday	
Tuesday	
Wednesday	
Thursday	
Friday	
Saturday	

Absent student on Thursday, Highest number of student on which day..... , only girl absent on

Q.1 Write the total amount of money in the box:

Rs.200	Rs.200	Rs.50		
Rs.10	Rs.100	Rs.500		
Rs.10	Rs.10	Rs.50		
Rs.100	Rs.500	Rs.200	Rs.20	
Rs.100	Rs.20	Rs.20	Rs.10	

Q.2 Exchange of money we can exchange :

50 rupee note for	5	10 rupee notes
50 rupee note for		5 rupee notes
100 rupee note for		50 rupee notes
100 rupee note for		20 rupee notes
500 rupee note for		100 rupee notes
200 rupee note for		50 rupee notes
20 rupee note for		5 rupee notes
10 rupee note for		5 rupee notes

Q.3 Fill in the blanks:

a. Rs. 5 =paise.

b. Rs. 3 =paise.

c. Rs. 6 =paise.

d. Rs. 8 =paise.

e. Rs. 2 =paise.

f. Rs. 9 =paise.

Word problems:

1. You purchased three books from a book shop. The prices of books were Rs.10 , Rs. 25 and Rs. 40 . How much money did he spend for all these copies?

Solve:
.....

2. A cake costs Rs.95 and a packet of balloons costs Rs.15. What is the total cost of both the items?

Solve:
.....

3. One football costs Rs. 425, and one hockey stick cost Rs. 205. What is the total cost of both the items?

Solve:
.....

4. You had Rs.65. You bought a box of masks Rs.39. How much money does you have left?

Solve:
.....

5. She had Rs. 500, She purchased a bicycle for Rs. 455. How many rupees were left her now?

Solve:
.....

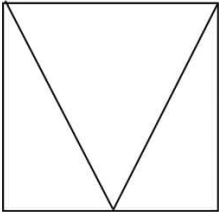
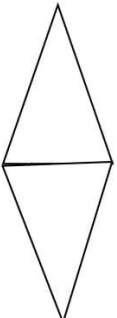

Q.1 Draw the horizontal , vertical and slanting lines:

a. Horizontal Lines :

b. Vertical Lines :

c. Slanting lines :

Q.2 Write the number of horizontal , vertical and slanting lines in the following figures:

Figure	Horizontal lines	Vertical lines	Slanting lines
			
			
			

Q.1 Cut the colour papers and make the shapes.

1. Triangle :

Paste Here

2. Square :

Paste Here

3. Rectangle:

Paste Here

4. Circle:

Paste Here

Q.2 Complete the tables:

6				30				54	
---	--	--	--	----	--	--	--	----	--

8			32						80
---	--	--	----	--	--	--	--	--	----

10					60		80		
----	--	--	--	--	----	--	----	--	--